



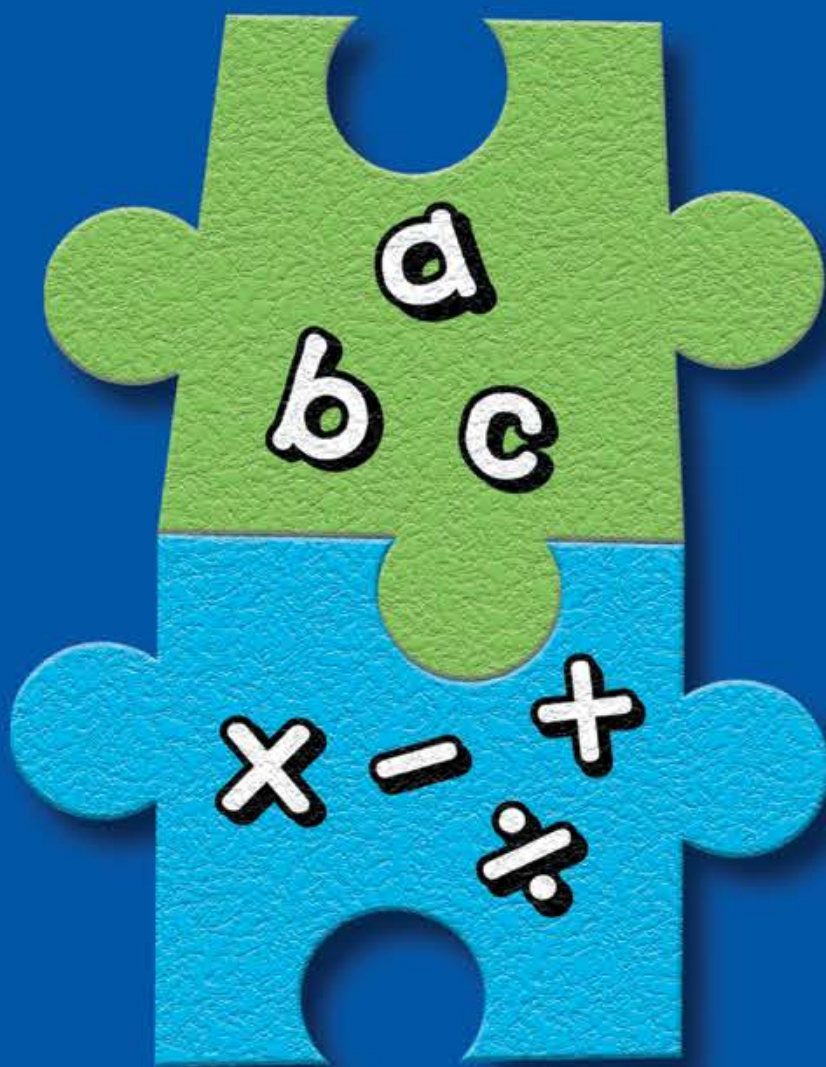
Grade

1

Daily Core Curriculum

Language

Math



Daily Activities to Reinforce Key Concepts

TABLE OF CONTENTS

Introduction2-3





Daily Warm-Up Lessons4-123

Two questions for every day

Quizzes124-135

One quiz for every 10 Warm-Up Lessons

Answer Key136



INTRODUCTION

As a first-grade teacher, you are aware of the key role you play in your students' lives. What your students learn, and the attitudes about school that they form while in your class, will influence their experiences throughout grade school and beyond. You know the importance of making school fun as well as educational, and of review, reinforcement, and applying content once it is learned. Daily Core Curriculum gets you and your class off to a great start, and keeps your students' skills sharp throughout the year.

Daily Core Curriculum provides your students with engaging starter activities to capture interest at the beginning of the classroom day or start of a new subject. Each daily activity includes key concepts in Language and Math—the two most critical subject areas in the first grade—as well as a Did You Know? item that will spark further interest, creative thought, and opportunity for sharing.

Daily Core Curriculum has been designed for any first-grade classroom, regardless of the textbooks or other supplementary programs being used. Implementation of the Daily Core Curriculum program is easy. Place the exercises for the day on the chalkboard, duplicate the questions for students, and/or project them on an overhead projector by photocopying the student pages as transparencies. Another option is to create a flip chart by binding each day's activities at the top. String or a dowel rod can be placed through the binding. Then, the pages can simply be flipped each day. You might want to bind the activities one month at a time. Additionally, you can use the appropriate starter in the content area of your classroom's schedule.

There are many other uses for this book. It can be used for those students who finish their other class assignments early, or as part of a center. If you are interested in creating more interest, correct answers can be acknowledged each week. Put all the papers in a box or bag, and choose one at random. If the one you have chosen has the correct answer, that student can receive an award, a prize, or other recognition.

PROGRAM DESIGN

This book contains daily activities with a starter for both the Language and Math subject areas. There are 120 lessons, and a quiz is located at the end of the book for every 10 lessons (12 quizzes in all). The quizzes include the questions covered in the lessons in standardized test format. Consider using the quizzes in place of the daily activity. There is enough material for you to use for each morning of your school year. Here is an explanation of each part of the daily activities:

Did You Know?

This includes an important fact in one of the following areas: history, geography, science, critters, human body, animals, and feelings. A thought-provoking journal prompt is given that is based on the fact. The journal prompt provides a good starter for transition times — before/after recess, before/after lunchtime, or as a starter to Writing time on your schedule. Textbooks and research materials (encyclopedias, almanacs, and Internet access) may be helpful with some journal prompts.

Language

One of the most important tasks a first-grade student faces is honing his or her reading and writing skills. Each day, Daily Core Curriculum offers quick practice of essential skills in the areas of capitalization, punctuation, spelling, and grammar. This is a good starter for language arts and/or reading time on your schedule.

Math

The mastery of basic arithmetic skills is also a fundamental component of the first-grade curriculum. With this program, students are appropriately challenged with daily math problems that are aligned with the NCTM Standards. This is a good starter for math time on your schedule.

TIME MANAGEMENT

Students quickly become focused as they copy the starters down and begin answering them. For some questions, students may need to use textbooks and reference materials to search for answers. Each problem usually takes no more than 5 minutes to complete. It is recommended that the exercises be used on a daily basis versus once a week, in order to keep these essential math and language skills fresh and at the ready for application throughout the students' school day.

Enjoy Daily Core Curriculum each day of the school year!



Name: _____

LANGUAGE (correct this sentence)

carlos ran away _____

MATH

$$\begin{array}{r} 7 \\ + 2 \\ \hline \square \end{array}$$



DID YOU KNOW?

Dinosaurs have not been alive for millions of years.

Do you like dinosaurs? Tell why.




Name: _____

LANGUAGE (correct this sentence)

she likes to play _____

MATH

How many parts are there? _____



DID YOU KNOW?

Bears sleep all winter long.

What would you dream about if you slept that long?


LANGUAGE (correct this sentence)carlos ran away Carlos ran away.**MATH**

$$\begin{array}{r} 7 \\ + 2 \\ \hline \boxed{9} \end{array}$$

**DID YOU KNOW?**

Dinosaurs have not been alive for millions of years.

Do you like dinosaurs? Tell why.

**LANGUAGE** (correct this sentence)she likes to play She likes to play.**MATH**How many parts are there? 2**DID YOU KNOW?**

Bears sleep all winter long.

What would you dream about if you slept that long?



Name: _____




LANGUAGE (correct this sentence)

jeff and bob play ball _____

MATH

How many sides do these shapes have?

A.) Triangle B.) Square C.) Rectangle



DID YOU KNOW?

Many kids feel scared and excited about their first day of school.

Tell about how you felt the night before your first day of first grade.





Name: _____

LANGUAGE (correct this sentence)

whos at the door _____

MATH

Which of these is a square? Circle the correct answer.



DID YOU KNOW?

People live in communities.

What is special about where you live?

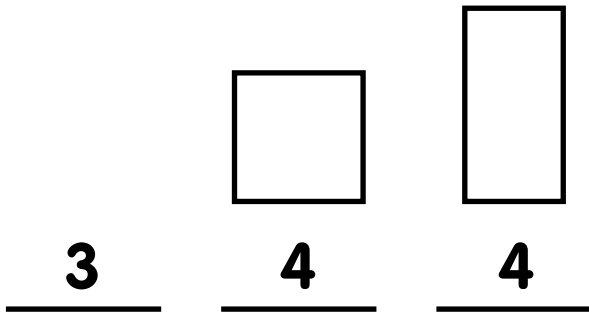
LANGUAGE (correct this sentence)

jeff and bob play ball Jeff and Bob play ball.

MATH

How many sides do these shapes have?

A.) Triangle B.) Square C.) Rectangle



DID YOU KNOW?

Many kids feel scared and excited about their first day of school.

Tell about how you felt the night before your first day of first grade.

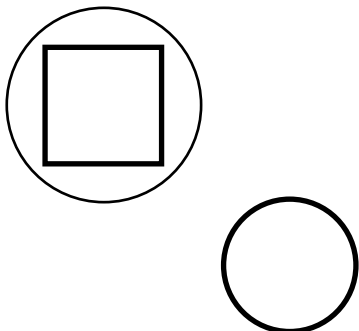


LANGUAGE (correct this sentence)

whos at the door Who's at the door?

MATH

Which of these is a square? Circle the correct answer.



DID YOU KNOW?

People live in communities.

What is special about where you live?



Name: _____

LANGUAGE (correct this sentence)

maria and I went to the store _____

MATH

Does a circle have corners or is it round?



DID YOU KNOW?

Gold was discovered in California in 1848.

What would you do if you found gold?



Name: _____

LANGUAGE (correct this sentence)

we want to stay here _____

MATH

How many legs does a dog have?



DID YOU KNOW?

A ladybug is a beetle.

Write about a ladybug flying through your school.

What would it see?

LANGUAGE (correct this sentence)

maria and I went to the store Maria and I went to the store.

MATH

Does a circle have corners or is it round?

Round

**DID YOU KNOW?**

Gold was discovered in California in 1848.

What would you do if you found gold?

**LANGUAGE** (correct this sentence)

we want to stay here We want to stay here.

MATH

How many legs does a dog have?

4

**DID YOU KNOW?**

A ladybug is a beetle.

Write about a ladybug flying through your school.

What would it see?



Name: _____

LANGUAGE (correct this sentence)

she wants to ride with ben _____

MATH

5 buttons + 8 buttons = _____ buttons



DID YOU KNOW?

Your heart, brain, and stomach are organs in your body.

Pretend you are one of these organs. Describe your job.



Name: _____

LANGUAGE (correct this sentence)

can the dog bark _____

MATH

How many letters are there in the alphabet? _____



DID YOU KNOW?

An X-ray machine can take a picture through your skin and lets a doctor see broken bones.

Have you ever broken a bone or known someone who has? Tell what happened.

LANGUAGE (correct this sentence)

she wants to ride with ben She wants to ride with Ben.

MATH

5 buttons + 8 buttons = 13 buttons

**DID YOU KNOW?**

Your heart, brain, and stomach are organs in your body.

Pretend you are one of these organs. Describe your job.

**LANGUAGE** (correct this sentence)

can the dog bark Can the dog bark?

MATH

How many letters are there in the alphabet? 26

**DID YOU KNOW?**

An X-ray machine can take a picture through your skin and lets a doctor see broken bones.

Have you ever broken a bone or known someone who has? Tell what happened.



Name: _____

LANGUAGE (correct this sentence)

i like taylor, anna, and nicole _____

MATH

Fill in the blanks.

1, 2, _____, 4, _____, 6, 7, 8, _____, 10.



DID YOU KNOW?

Chipmunks gather food to store for the winter.

Pretend that you are a chipmunk.
How would you get ready for winter?



Name: _____

LANGUAGE (correct this sentence)

bill wants a frog _____

MATH

How many cent(s) (¢) does a quarter equal? _____



DID YOU KNOW?

A diary is something you write in to remember feelings and events.

Pretend that this is an entry in your diary. Write about today.

LANGUAGE (correct this sentence)

i like taylor, anna, and nicole I like Taylor, Anna, and Nicole.

MATH

Fill in the blanks.

1, 2, 3, 4, 5, 6, 7, 8, 9, 10.

**DID YOU KNOW?**

Chipmunks gather food to store for the winter.

Pretend that you are a chipmunk.
How would you get ready for winter?

**LANGUAGE** (correct this sentence)

bill wants a frog Bill wants a frog.

MATH

How many cent(s) (¢) does a quarter equal? 25 cents

**DID YOU KNOW?**

A diary is something you write in to remember feelings and events.

Pretend that this is an entry in your diary. Write about today.



Name: _____

LANGUAGE (correct this sentence)

the horses need water _____

MATH

$$\begin{array}{r} 5 \\ - 3 \\ \hline \square \end{array}$$



DID YOU KNOW?

Communities have schools, post offices, and police stations. What happens at each of these places, and who works there?



Name: _____

LANGUAGE (correct this sentence)

maya and I ride scooters _____

MATH

1 dollar + 2 dollars = _____ dollars



DID YOU KNOW?

The 4th of July is a celebration of our nation's independence. What do you and your family do on the 4th of July?

LANGUAGE (correct this sentence)

the horses need water **The horses need water.**

MATH

$$\begin{array}{r} 5 \\ - 3 \\ \hline \boxed{2} \end{array}$$

**DID YOU KNOW?**

Communities have schools, post offices, and police stations. What happens at each of these places, and who works there?

**LANGUAGE** (correct this sentence)

maya and I ride scooters **Maya and I ride scooters.**

MATH

1 dollar + 2 dollars = **3** dollars

**DID YOU KNOW?**

The 4th of July is a celebration of our nation's independence. What do you and your family do on the 4th of July?



Name: _____

LANGUAGE (correct this sentence)

grace and allen see the cat _____

MATH

One penny is worth _____ cent(s).



DID YOU KNOW?

A queen bee and many worker bees live in a beehive.

Would you rather be the queen or a worker bee? Why?



Name: _____

LANGUAGE (correct this sentence)

sammy, arthur, and kelly build with blocks

MATH

One nickel is worth _____ cent(s).



DID YOU KNOW?

You have taste buds on your tongue to taste food.

Write about your favorite food.
Why is it your favorite?

LANGUAGE (correct this sentence)

grace and allen see the cat Grace and Allen see the cat.

MATH

One penny is worth 1 cent(s).

**DID YOU KNOW?**

A queen bee and many worker bees live in a beehive.

Would you rather be the queen or a worker bee? Why?

**LANGUAGE** (correct this sentence)

sammy, arthur, and kelly build with blocks

Sammy, Arthur, and Kelly build with blocks.

MATH

One nickel is worth 5 cent(s).

**DID YOU KNOW?**

You have taste buds on your tongue to taste food.

Write about your favorite food. Why is it your favorite?



Name: _____

LANGUAGE (correct this sentence)

do you like to draw _____

MATH

One dime is worth _____ cent(s).



DID YOU KNOW?

A habitat is a special place where certain animals live, eat, and sleep. If you lived in a forest, where would you sleep and what would you eat?



Name: _____

LANGUAGE (correct this sentence)

me like cookies _____

MATH

Two quarters are worth _____ cent(s).



DID YOU KNOW?

Snakes shed their skin. Tell what your day would be like if you were a snake.

LANGUAGE (correct this sentence)

do you like to draw Do you like to draw?

MATH

One dime is worth 10 cent(s).

**DID YOU KNOW?**

A habitat is a special place where certain animals live, eat, and sleep. If you lived in a forest, where would you sleep and what would you eat?

**LANGUAGE** (correct this sentence)

me like cookies I like cookies.

MATH

Two quarters are worth 50 cent(s).

**DID YOU KNOW?**

Snakes shed their skin. Tell what your day would be like if you were a snake.



Name: _____

LANGUAGE (correct this sentence)

he will play with albert _____

MATH

Draw 5 triangles.



DID YOU KNOW?

People feel love in many ways.
Write about how you will tell your family how much you love them.



Name: _____

LANGUAGE (correct this sentence)

We sees a horse _____

MATH

6 crayons + 10 crayons = _____ crayons



DID YOU KNOW?

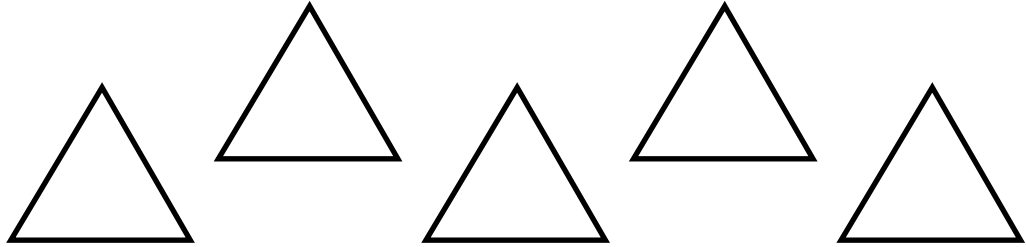
Firefighters help keep the community safe.
What would you do if you were a firefighter?

LANGUAGE (correct this sentence)

he will play with albert He will play with Albert.

MATH

Draw 5 triangles.

**DID YOU KNOW?**

People feel love in many ways.
Write about how you will tell your family how much you love them.

**LANGUAGE** (correct this sentence)

We sees a horse We see a horse.

MATH

6 crayons + 10 crayons = 16 crayons

**DID YOU KNOW?**

Firefighters help keep the community safe.
What would you do if you were a firefighter?



Name: _____

LANGUAGE (correct this sentence)

sylvia said he can play _____

MATH

6 sandwiches - 5 sandwiches = _____ sandwich



DID YOU KNOW?

In 1620, a group of people called Pilgrims came to America by boat. Have you ever gone on a boat trip? What was it like?



Name: _____

LANGUAGE (correct this sentence)

val like casey and pat _____

MATH

Do you eat breakfast before or after lunch?



DID YOU KNOW?

Spiders hatch from eggs. Write about another animal that comes from an egg.

LANGUAGE (correct this sentence)

sylvia said he can play Sylvia said he can play.

MATH

6 sandwiches - 5 sandwiches = 1 sandwich

**DID YOU KNOW?**

In 1620, a group of people called Pilgrims came to America by boat. Have you ever gone on a boat trip? What was it like?

**LANGUAGE** (correct this sentence)

val like casey and pat Val likes Casey and Pat.

MATH

Do you eat breakfast before or after lunch?

Before lunch

**DID YOU KNOW?**

Spiders hatch from eggs. Write about another animal that comes from an egg.



Name: _____

LANGUAGE (correct this sentence)

carson want to help her _____

MATH

What time is lunch at school?



DID YOU KNOW?

Your five senses are sight, touch, sound, taste, and smell.

Describe an ice-cream cone using all of your five senses.



Name: _____

LANGUAGE (correct this sentence)

they sits on the floor _____

MATH

Fill in the blanks:

Monday, _____, Wednesday, _____, Friday, _____, Sunday



DID YOU KNOW?

Deserts are hot and dry.

What kind of animals would you find in the desert?

LANGUAGE (correct this sentence)

carson want to help her **Carson wants to help her.**

MATH

What time is lunch at school?

Answers will vary.

**DID YOU KNOW?**

Your five senses are sight, touch, sound, taste, and smell.

Describe an ice-cream cone using all of your five senses.

**LANGUAGE** (correct this sentence)

they sits on the floor **They sit on the floor.**

MATH

Fill in the blanks:

Monday, **Tuesday**, Wednesday, **Thursday**, Friday, **Saturday**, Sunday

**DID YOU KNOW?**

Deserts are hot and dry.

What kind of animals would you find in the desert?



Name: _____

LANGUAGE (correct this sentence)

i saw todd, kat, and rachel _____

MATH

How many days are there in October? _____



DID YOU KNOW?

A turtle can hide its head under its shell.

Describe a time when you wish you could hide.



Name: _____

LANGUAGE (correct this sentence)

who wants to ride bikes _____

MATH

What time do you go to bed at night?



DID YOU KNOW?

People sing songs together to share feelings of happiness or sadness.

Write about your favorite song and how it makes you feel.

ANSWER KEY

Lesson
23

LANGUAGE (correct this sentence)

i saw todd, kat, and rachel I saw Todd, Kat, and Rachel.

MATH

How many days are there in October? 31



DID YOU KNOW?

A turtle can hide its head under its shell.

Describe a time when you wish you could hide.



ANSWER KEY

Lesson
24

LANGUAGE (correct this sentence)

who wants to ride bikes Who wants to ride bikes?

MATH

What time do you go to bed at night?

Answers will vary.



DID YOU KNOW?

People sing songs together to share feelings of happiness or sadness.

Write about your favorite song and how it makes you feel.



Name: _____

LANGUAGE (correct this sentence)

we feds the hamster _____

MATH

Fill in the blanks:

2, _____, 6, 8, 10, _____.



DID YOU KNOW?

Communities have parks for kids to enjoy.

What would you find at your perfect park?



Name: _____

LANGUAGE (correct this sentence)

martin and ross draw pictures _____

MATH

What shape has four equal sides? _____



DID YOU KNOW?

A woman named Betsy Ross sewed the first American flag.

How would you design a flag to represent your family? Draw it.

LANGUAGE (correct this sentence)

we feds the hamster **We fed the hamster.**

MATH

Fill in the blanks:

2, **4**, 6, 8, 10, **12**.

**DID YOU KNOW?**

Communities have parks for kids to enjoy.

What would you find at your perfect park?

**LANGUAGE** (correct this sentence)

martin and ross draw pictures **Martin and Ross draw pictures.**

MATH

What shape has four equal sides? **A square**

**DID YOU KNOW?**

A woman named Betsy Ross sewed the first American flag.

How would you design a flag to represent your family? Draw it.



Name: _____

LANGUAGE (correct this sentence)

wanda and I can swim _____

MATH

Count backward and fill in the missing numbers:

15, _____, 13, 12, _____, 10, _____.



DID YOU KNOW?

Many insects have wings.
Where would you fly if you had wings?



Name: _____

LANGUAGE (correct this sentence)

we read that book _____

MATH

How many days are there in 1 week? _____



DID YOU KNOW?

Eyes blink to keep the eye moist.
Try to keep from blinking for 1 minute. Was that hard?
Write about how it felt.

LANGUAGE (correct this sentence)

wanda and I can swim Wanda and I can swim.

MATH

Count backward and fill in the missing numbers:

15, 14, 13, 12, 11, 10, 9.

**DID YOU KNOW?**

Many insects have wings.
Where would you fly if you had wings?

**LANGUAGE** (correct this sentence)

we read that book We read that book.

MATH

How many days are there in 1 week? 7 days

**DID YOU KNOW?**

Eyes blink to keep the eye moist.
Try to keep from blinking for
1 minute. Was that hard?
Write about how it felt.



Name: _____

LANGUAGE (correct this sentence)

the man like the rain _____

MATH

How many months are there in 1 year? _____



DID YOU KNOW?

Fish can breathe underwater because they have gills.

If you could live and breathe underwater, what kind of animal would you be and why?



Name: _____

LANGUAGE (correct this sentence)

terry and I want to see a lion _____

MATH

1 dime + 1 penny = _____ cents



DID YOU KNOW?

Chickens lay eggs.

What happens to the eggs after the mother sits on them?

LANGUAGE (correct this sentence)

the man like the rain **The man likes the rain.**

MATH

How many months are there in 1 year? **12 months**

**DID YOU KNOW?**

Fish can breathe underwater because they have gills.

If you could live and breathe underwater, what kind of animal would you be and why?

**LANGUAGE** (correct this sentence)

terry and I want to see a lion **Terry and I want to see a lion.**

MATH

1 dime + 1 penny = **11** cents

**DID YOU KNOW?**

Chickens lay eggs.

What happens to the eggs after the mother sits on them?



Name: _____

LANGUAGE (correct this sentence)

do you see a bird _____

MATH

What weighs more, an elephant or a chicken? _____



DID YOU KNOW?

Some people have a hard time sleeping at night. They may be very excited about something that is supposed to happen the next day.

Begin a story with, "I couldn't sleep last night because I was so excited about . . ."



Name: _____

LANGUAGE (correct this sentence)

i want to play with helen, laura, and lois

MATH

4 bugs + 6 bugs = _____ bugs



DID YOU KNOW?

Large communities are called cities. Small communities are called towns.

Would you rather live in a city or a town? Why?

LANGUAGE (correct this sentence)

do you see a bird Do you see a bird?

MATH

What weighs more, an elephant or a chicken? An elephant

**DID YOU KNOW?**

Some people have a hard time sleeping at night. They may be very excited about something that is supposed to happen the next day.

Begin a story with, "I couldn't sleep last night because I was so excited about . . ."

**LANGUAGE** (correct this sentence)

i want to play with helen, laura, and lois

I want to play with Helen, Laura, and Lois.

MATH

4 bugs + 6 bugs = 10 bugs

**DID YOU KNOW?**

Large communities are called cities. Small communities are called towns.

Would you rather live in a city or a town? Why?



Name: _____

LANGUAGE (correct this sentence)

will the girls help sandy _____

MATH

Put these five numbers in order, from smallest to largest:

9, 3, 7, 5, 10



DID YOU KNOW?

Amelia Earhart was the first woman to fly an airplane across the Atlantic Ocean.

If you could fly an airplane, where would you go?



Name: _____

LANGUAGE (correct this sentence)

alex has a blue crayon _____

MATH

Write in the next number in the pattern:

5, 10, 15, _____.



DID YOU KNOW?

Spiders use webs to catch bugs for food.

What would you like to catch with a web?

LANGUAGE (correct this sentence)

will the girls help sandy Will the girls help Sandy?

MATH

Put these five numbers in order, from smallest to largest:

9, 3, 7, 5, 10

3, 5, 7, 9, 10

**DID YOU KNOW?**

Amelia Earhart was the first woman to fly an airplane across the Atlantic Ocean.

If you could fly an airplane, where would you go?

**LANGUAGE** (correct this sentence)

alex has a blue crayon Alex has a blue crayon.

MATH

Write in the next number in the pattern:

5, 10, 15, 20.

**DID YOU KNOW?**

Spiders use webs to catch bugs for food.

What would you like to catch with a web?



Name: _____

LANGUAGE (correct this sentence)

marie want a drink _____

MATH

Think of three other ways to add up to 8.

$6 + 2 = 8,$



DID YOU KNOW?

A sea diver wears an air tank to breathe under water.

Would you like to be a sea diver?
Why or why not?



Name: _____

LANGUAGE (correct this sentence)

he did not have a book _____

MATH

Draw a triangle, and divide it in half with a line.



DID YOU KNOW?

Every living thing needs food to survive.

What are your three favorite foods?

LANGUAGE (correct this sentence)

marie want a drink Marie wants a drink.

MATH

Think of three other ways to add up to 8.

$$6 + 2 = 8,$$

$$4 + 4 = 8$$

$$7 + 1 = 8$$

$$5 + 3 = 8$$

DID YOU KNOW?

A sea diver wears an air tank to breathe under water.

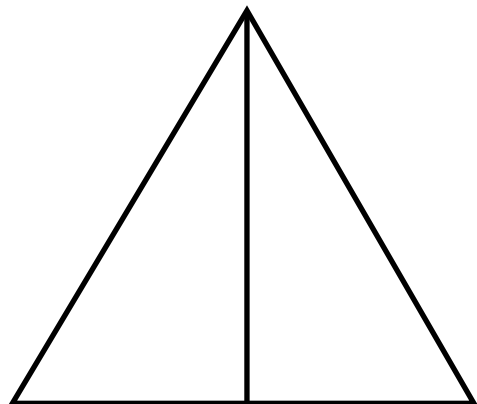
Would you like to be a sea diver?
Why or why not?

**LANGUAGE** (correct this sentence)

he did not have a book He did not have a book.

MATH

Draw a triangle, and divide it in half with a line.

**DID YOU KNOW?**

Every living thing needs food to survive.

What are your three favorite foods?



Name: _____

LANGUAGE (correct this sentence)

Mom and dad will be at the party _____

MATH

25 cents + 10 cents = _____ cents



DID YOU KNOW?

Some birds fly south for the winter.
How would you feel if you had to
move every winter?



Name: _____

LANGUAGE (correct this sentence)

did joan get a toy _____

MATH

Which number is smaller: 39 or 50? _____



DID YOU KNOW?

Scary movies are popular around
Halloween.
Describe the scariest monster you
can think of.

LANGUAGE (correct this sentence)

Mom and dad will be at the party Mom and Dad will be at the party.

MATH

25 cents + 10 cents = 35 cents

**DID YOU KNOW?**

Some birds fly south for the winter.
How would you feel if you had to move every winter?

**LANGUAGE** (correct this sentence)

did joan get a toy Did Joan get a toy?

MATH

Which number is smaller: 39 or 50? 39

**DID YOU KNOW?**

Scary movies are popular around Halloween.
Describe the scariest monster you can think of.



Name: _____

LANGUAGE (correct this sentence)

we could have walked there _____

MATH

Which number is bigger: 16 or 19? _____



DID YOU KNOW?

Rivers, lakes, and ponds are bodies of water.

What do you like to do in the water?



Name: _____

LANGUAGE (correct this sentence)

where did sara go camping _____

MATH

Write the number that comes before 23. _____



DID YOU KNOW?

Helen Keller was a blind and deaf woman who learned how to read, write, and use sign language.

Have you ever learned how to do something that was hard for you? What was it?

LANGUAGE (correct this sentence)

we could have walked there **We could have walked there.**

MATH

Which number is bigger: 16 or 19? **19**

**DID YOU KNOW?**

Rivers, lakes, and ponds are bodies of water.

What do you like to do in the water?

**LANGUAGE** (correct this sentence)

where did sara go camping **Where did Sara go camping?**

MATH

Write the number that comes before 23. **22**

**DID YOU KNOW?**

Helen Keller was a blind and deaf woman who learned how to read, write, and use sign language.

Have you ever learned how to do something that was hard for you? What was it?



Name: _____

LANGUAGE (correct this sentence)

julie play the guitar well _____

MATH

Write the number that comes after 50. _____



DID YOU KNOW?

Bees live in colonies. A colony is like a family.

Write about the people in your family.



Name: _____

LANGUAGE (correct this sentence)

jacob is not here _____

MATH

Circle the largest number.

18, 77, 79, 11



DID YOU KNOW?

The bones in your chest are called ribs. Ribs protect your lungs.

Write about a time when you protected someone or something.

LANGUAGE (correct this sentence)

julie play the guitar well **Julie plays the guitar well.**

MATH

Write the number that comes after 50. **51**

**DID YOU KNOW?**

Bees live in colonies. A colony is like a family.

Write about the people in your family.

**LANGUAGE** (correct this sentence)

jacob is not here **Jacob is not here.**

MATH

Circle the largest number.

18, 77, **79**, 11

**DID YOU KNOW?**

The bones in your chest are called ribs. Ribs protect your lungs.

Write about a time when you protected someone or something.



Name: _____

LANGUAGE (correct this sentence)

luke climb the hill _____

MATH

What number comes next? 50, 40, 30, 20, _____



DID YOU KNOW?

Water covers most (three-fourths) of the Earth.
Have you ever been in the ocean?
Tell about it.



Name: _____

LANGUAGE (correct this sentence)

joan fell down _____

MATH

14 cows – 12 cows = _____ cows



DID YOU KNOW?

Some fish glow in the dark.
If you were a fish in the deepest part of the ocean, where would you go if you could glow in the dark?

LANGUAGE (correct this sentence)

luke climb the hill Luke climbed the hill.

MATH

What number comes next? 50, 40, 30, 20, 10

**DID YOU KNOW?**

Water covers most (three-fourths) of the Earth.

Have you ever been in the ocean? Tell about it.

**LANGUAGE** (correct this sentence)

joan fell down Joan fell down.

MATH

14 cows – 12 cows = 2 cows

**DID YOU KNOW?**

Some fish glow in the dark.

If you were a fish in the deepest part of the ocean, where would you go if you could glow in the dark?



Name: _____

LANGUAGE (correct this sentence)

we will go to the zoo tomorrow _____

MATH

$$12 + 4 = \underline{\hspace{2cm}}$$



DID YOU KNOW?

Weather can change people's moods.
What kind of weather makes you happy?



Name: _____

LANGUAGE (correct this sentence)

ronald, liz, and denny stayed at school

MATH

$$2 \text{ dimes} = \underline{\hspace{2cm}} \text{ cents}$$



DID YOU KNOW?

There are more than 1 million kinds of insects in the world.
Pretend you discovered a new insect, and draw its picture.

LANGUAGE (correct this sentence)

we will go to the zoo tomorrow **We will go to the zoo tomorrow.**

MATH

$$12 + 4 = \underline{16}$$

**DID YOU KNOW?**

Weather can change people's moods.
What kind of weather makes you happy?

**LANGUAGE** (correct this sentence)

ronald, liz, and denny stayed at school

Ronald, Liz, and Denny stayed at school.

MATH

$$2 \text{ dimes} = \underline{20} \text{ cents}$$

**DID YOU KNOW?**

There are more than 1 million kinds of insects in the world.
Pretend you discovered a new insect, and draw its picture.



Name: _____

LANGUAGE (correct this sentence)

did neil see the ladybug _____

MATH

Think of three other ways to add up to 10. $3 + 7 = 10$,



DID YOU KNOW?

Johnny Appleseed traveled and planted apple seeds wherever he went during the 1800s.

How would you care for an apple seed if you planted one?



Name: _____

LANGUAGE (correct this sentence)

kate lost the video _____

MATH

Solve this equation:

$$4 + \underline{\hspace{2cm}} = 12$$



DID YOU KNOW?

Chameleons are lizards that can change their color to hide.

What if you could change your color to hide? What color would you be and why?

LANGUAGE (correct this sentence)

did neil see the ladybug Did Neil see the ladybug?

MATH

Think of three other ways to add up to 10. $3 + 7 = 10$,

$$9 + 1 = 10$$

$$6 + 4 = 10$$

$$5 + 5 = 10$$

$$8 + 2 = 10$$

**DID YOU KNOW?**

Johnny Appleseed traveled and planted apple seeds wherever he went during the 1800s.

How would you care for an apple seed if you planted one?

**LANGUAGE** (correct this sentence)

kate lost the video Kate lost the video.

MATH

Solve this equation:

$$4 + \underline{8} = 12$$

**DID YOU KNOW?**

Chameleons are lizards that can change their color to hide.

What if you could change your color to hide? What color would you be and why?



Name: _____

LANGUAGE (correct this sentence)

emma holded the pinecone _____

MATH

What number comes next?

1, 3, 5, 7, _____



DID YOU KNOW?

Your brain lets you think, feel, and learn.

Write a thank you letter to your brain, telling how it helped you learn a math skill this week.



Name: _____

LANGUAGE (correct this sentence)

i can't reach it _____

MATH

What is the seventh letter of the alphabet?



DID YOU KNOW?

The top of a rainforest is called the canopy.

If you were in the canopy of a rainforest what would it look like? What would you see?

LANGUAGE (correct this sentence)

emma holded the pinecone Emma held the pinecone.

MATH

What number comes next?

1, 3, 5, 7, 9

**DID YOU KNOW?**

Your brain lets you think, feel, and learn.

Write a thank you letter to your brain, telling how it helped you learn a math skill this week.

**LANGUAGE** (correct this sentence)

i can't reach it I can't reach it.

MATH

What is the seventh letter of the alphabet?

G

**DID YOU KNOW?**

The top of a rainforest is called the canopy.

If you were in the canopy of a rainforest what would it look like? What would you see?



Name: _____

LANGUAGE (correct this sentence)

brendan, glenn, and nora played basketball

MATH

1 quarter + 1 nickel = _____ cents



DID YOU KNOW?

Instead of sweating, dogs pant to cool off. If you were a dog in the summer, what would you do to cool off?



Name: _____

LANGUAGE (correct this sentence)

how is victor paying for the movie _____

MATH

What number comes next? 20, 19, 18, 17, _____



DID YOU KNOW?

Some little kids throw temper tantrums when they are mad. Have you ever had a temper tantrum? What made you feel so mad?

LANGUAGE (correct this sentence)

brendan, glenn, and nora played basketball

Brendan, Glenn, and Nora played basketball.

MATH

1 quarter + 1 nickel = 30 cents

**DID YOU KNOW?**

Instead of sweating, dogs pant to cool off. If you were a dog in the summer, what would you do to cool off?

**LANGUAGE** (correct this sentence)

how is victor paying for the movie **How is Victor paying for the movie?**

MATH

What number comes next? 20, 19, 18, 17, 16

**DID YOU KNOW?**

Some little kids throw temper tantrums when they are mad.

Have you ever had a temper tantrum?
What made you feel so mad?



Name: _____

LANGUAGE (correct this sentence)

jill already reads that book _____

MATH

Fill in the missing numbers:

2, _____, 6, 8, _____, 12, _____, 16, 18, _____



DID YOU KNOW?

Dry, hot, sandy areas are called deserts. What would be hard about living in a desert?



Name: _____

LANGUAGE (correct this sentence)

greg played with tammy and ruth _____

MATH

$$\begin{array}{r} 10 \\ + 5 \\ \hline \square \end{array}$$



DID YOU KNOW?

In the pioneer days, people in America traveled in covered wagons pulled by horses or mules. Pretend you are riding in a covered wagon. Write about where you would go and what you would see.

LANGUAGE (correct this sentence)

jill already reads that book Jill already read that book.

MATH

Fill in the missing numbers:

2, 4, 6, 8, 10, 12, 14, 16, 18, 20

**DID YOU KNOW?**

Dry, hot, sandy areas are called deserts. What would be hard about living in a desert?

**LANGUAGE** (correct this sentence)

greg played with tammy and ruth Greg played with Tammy and Ruth.

MATH

$$\begin{array}{r} 10 \\ + 5 \\ \hline 15 \end{array}$$

**DID YOU KNOW?**

In the pioneer days, people in America traveled in covered wagons pulled by horses or mules. Pretend you are riding in a covered wagon. Write about where you would go and what you would see.



Name: _____

LANGUAGE (correct this sentence)

the monkey like bananas _____

MATH

What is the missing number: 29, _____, 31



DID YOU KNOW?

Bugs have skin and it's hard.
Write about a trick you could do
with hard skin.



Name: _____

LANGUAGE (correct this sentence)

molly said my sister is nice _____

MATH

$6 - 6 =$ _____



DID YOU KNOW?

Bones make up your skeletal system.
Explain how a dog's skeleton is
different than your skeleton.

LANGUAGE (correct this sentence)

the monkey like bananas **The monkey likes bananas.**

MATH

What is the missing number: 29, **30**, 31

**DID YOU KNOW?**

Bugs have skin and it's hard.
Write about a trick you could do
with hard skin.

**LANGUAGE** (correct this sentence)

molly said my sister is nice **Molly said my sister is nice.**

MATH

$6 - 6 =$ **0**

**DID YOU KNOW?**

Bones make up your skeletal system.
Explain how a dog's skeleton is
different than your skeleton.



Name: _____

LANGUAGE (correct this sentence)

scott found ten dollars _____

MATH

What weighs more? A balloon or a bicycle? _____



DID YOU KNOW?

Fishermen catch food like tuna and shrimp in the ocean.

Do you like to eat fish? Write a story about a fish who can talk.



Name: _____

LANGUAGE (correct this sentence)

would you like to come over _____

MATH

Is 3 greater than ($>$), less than ($<$), or equal to ($=$) 6? _____



DID YOU KNOW?

Bats and owls sleep all day and are awake at night.

Describe what you would do if you slept all day and stayed awake all night.

LANGUAGE (correct this sentence)

scott found ten dollars Scott found ten dollars.

MATH

What weighs more? A balloon or a bicycle? A bicycle

**DID YOU KNOW?**

Fishermen catch food like tuna and shrimp in the ocean.

Do you like to eat fish? Write a story about a fish who can talk.

**LANGUAGE** (correct this sentence)

would you like to come over Would you like to come over?

MATH

Is 3 greater than ($>$), less than ($<$), or equal to ($=$) 6? $3 < 6$ (less than)

**DID YOU KNOW?**

Bats and owls sleep all day and are awake at night.

Describe what you would do if you slept all day and stayed awake all night.



Name: _____

LANGUAGE (correct this sentence)

julio and david painted the house _____

MATH

Which weighs less, a book or a feather? _____



DID YOU KNOW?

Friends are fun to play with. Friends help us feel better when we are sad.

Pretend a friend is having a very bad day. What would you do and say to cheer your friend up?



Name: _____

LANGUAGE (correct this sentence)

do she like to read _____

MATH

7 airplanes - _____ airplanes = 4 airplanes



DID YOU KNOW?

Large rock formations are called mountains.

Would you like to climb a mountain? Why or why not?

LANGUAGE (correct this sentence)

julio and david painted the house Julio and David painted the house.

MATH

Which weighs less, a book or a feather? A feather

**DID YOU KNOW?**

Friends are fun to play with. Friends help us feel better when we are sad.

Pretend a friend is having a very bad day. What would you do and say to cheer your friend up?

**LANGUAGE** (correct this sentence)

do she like to read Does she like to read?

MATH

7 airplanes - 3 airplanes = 4 airplanes

**DID YOU KNOW?**

Large rock formations are called mountains.

Would you like to climb a mountain? Why or why not?



Name: _____

LANGUAGE (correct this sentence)

yesterday, we played a long game of checkers

MATH

100, 200, _____, 400, _____



DID YOU KNOW?

The Nile River is in Egypt. It is the longest river in the world.

Write a story about an adventure you might have while traveling on the Nile River.



Name: _____

LANGUAGE (correct this sentence)

chuck like to play ball _____

MATH

$$\begin{array}{r} 101 \\ + 5 \\ \hline \square \end{array}$$



DID YOU KNOW?

Caterpillars end up turning into butterflies.

What kind of insect would you like to turn into? Why?

LANGUAGE (correct this sentence)

yesterday, we played a long game of checkers

Yesterday, we played a long game of checkers.

MATH

100, 200, 300, 400, 500

**DID YOU KNOW?**

The Nile River is in Egypt. It is the longest river in the world.

Write a story about an adventure you might have while traveling on the Nile River.

**LANGUAGE** (correct this sentence)

chuck like to play ball **Chuck likes to play ball.**

MATH

$$\begin{array}{r} 101 \\ + 5 \\ \hline \boxed{106} \end{array}$$

**DID YOU KNOW?**

Caterpillars end up turning into butterflies.

What kind of insect would you like to turn into? Why?



Name: _____

LANGUAGE (correct this sentence)

isabel didnt see the sign _____

MATH

What is: $120 - 110 =$ _____



DID YOU KNOW?

A human heart beats 70 beats per minute.

Can you feel your heart beat? List three activities that would make your heart beat faster.



Name: _____

LANGUAGE (correct this sentence)

amy, nick, and i went to dinner _____

MATH

Use: +, -, or =

3 _____ 1 = 4



DID YOU KNOW?

There are nine planets in our solar system: Mercury, Venus, Earth, Mars, Jupiter, Saturn, Uranus, Neptune, and Pluto.

What planet would you like to visit and why?

LANGUAGE (correct this sentence)

isabel didnt see the sign Isabel didn't see the sign.

MATH

What is: $120 - 110 =$ 10

**DID YOU KNOW?**

A human heart beats 70 beats per minute.

Can you feel your heart beat? List three activities that would make your heart beat faster.

**LANGUAGE** (correct this sentence)

amy, nick, and i went to dinner Amy, Nick, and I went to dinner.

MATH

Use: +, -, or =

3 + 1 = 4

**DID YOU KNOW?**

There are nine planets in our solar system: Mercury, Venus, Earth, Mars, Jupiter, Saturn, Uranus, Neptune, and Pluto.

What planet would you like to visit and why?



Name: _____

LANGUAGE (correct this sentence)

where is keith going today _____

MATH

Use: +, -, or =

$$6 - 4 \underline{\hspace{2cm}} 2$$



DID YOU KNOW?

Dinosaurs are extinct. This means that no more dinosaurs are alive, and they will never live again.

What would you do if you found a dinosaur bone buried in your yard?



Name: _____

LANGUAGE (correct this sentence)

will you wash the car on saturday _____

MATH

Hot dogs cost 50¢ each.

How much would 4 hot dogs cost? _____



DID YOU KNOW?

When you smile at someone, you can make that person feel better.

How do you feel when someone smiles at you?

LANGUAGE (correct this sentence)

where is keith going today Where is Keith going today?

MATH

Use: +, -, or =

$$6 - 4 = 2$$

**DID YOU KNOW?**

Dinosaurs are extinct. This means that no more dinosaurs are alive, and they will never live again.

What would you do if you found a dinosaur bone buried in your yard?

**LANGUAGE** (correct this sentence)

will you wash the car on saturday Will you wash the car on Saturday?

MATH

Hot dogs cost 50¢ each.

How much would 4 hot dogs cost? \$2.00

**DID YOU KNOW?**

When you smile at someone, you can make that person feel better.

How do you feel when someone smiles at you?



Name: _____

LANGUAGE (correct this sentence)

beth walked her dog sparky around the block

MATH

Popsicles cost 15¢ and ice cream costs 25¢.

If John ate one of each, how much did he spend?



DID YOU KNOW?

The capital of the United States is Washington, D.C. The president lives there.

What would it be like to be the president of the United States?



Name: _____

LANGUAGE (correct this sentence)

my dog fido likes to sleep on my bed _____

MATH

Is 1 dollar greater than ($>$), less than ($<$), or equal to ($=$) 4 quarters?



DID YOU KNOW?

Egypt is a country in Africa. A long time ago kings and queens ruled the land.

If you were a king or queen, what school rule would you change and why?

LANGUAGE (correct this sentence)

beth walked her dog sparky around the block

Beth walked her dog Sparky around the block.

MATH

Popsicles cost 15¢ and ice cream costs 25¢.

If John ate one of each, how much did he spend?

40¢

**DID YOU KNOW?**

The capital of the United States is Washington, D.C. The president lives there.

What would it be like to be the president of the United States?

**LANGUAGE** (correct this sentence)

my dog fido likes to sleep on my bed

My dog Fido likes to sleep on my bed.

MATH

Is 1 dollar greater than ($>$), less than ($<$), or equal to ($=$) 4 quarters?

1 dollar is equal to ($=$) 4 quarters

**DID YOU KNOW?**

Egypt is a country in Africa. A long time ago kings and queens ruled the land.

If you were a king or queen, what school rule would you change and why?



Name: _____

LANGUAGE (correct this sentence)

zack eat breakfast then brushed his teeth

MATH

Fill in the blanks.

1, 3, _____, 7, _____



DID YOU KNOW?

A dragonfly begins its life in the water. Write a story about a dragonfly that steps out of the water for the first time.



Name: _____

LANGUAGE (correct this sentence)

teresa and I collect bugs _____

MATH

Is $6 + 5$ greater than ($>$), less than ($<$), or equal to ($=$) 12?



DID YOU KNOW?

Warm-blooded means you stay the same temperature even when it is very cold or very warm. Pretend you are not warm-blooded. Would you rather live in a warm place or a cold place? Why?

LANGUAGE (correct this sentence)

zack eat breakfast then brushed his teeth

Zack ate breakfast then brushed his teeth.

MATH

Fill in the blanks.

1, 3, 5, 7, 9

**DID YOU KNOW?**

A dragonfly begins its life in the water. Write a story about a dragonfly that steps out of the water for the first time.

**LANGUAGE** (correct this sentence)

teresa and I collect bugs **Teresa and I collect bugs.**

MATH

Is $6 + 5$ greater than ($>$), less than ($<$), or equal to ($=$) 12?

$6 + 5$ is less than ($<$) 12

**DID YOU KNOW?**

Warm-blooded means you stay the same temperature even when it is very cold or very warm. Pretend you are not warm-blooded. Would you rather live in a warm place or a cold place? Why?



Name: _____

LANGUAGE (correct this sentence)

don't you have to go home _____

MATH

Is $9 - 4$ greater than ($>$), less than ($<$), or equal to ($=$) 5?



DID YOU KNOW?

An astronaut is a person who travels in outer space.

Tell a story about an outer space adventure.




Name: _____

LANGUAGE (correct this sentence)

she invited diane, victoria, and rose to her clubhouse

MATH

What time is it? _____



DID YOU KNOW?

Many people say that dogs are "man's best friend."

If you chose an animal to be your best friend, what would you pick and why?

LANGUAGE (correct this sentence)

don't you have to go home **Don't you have to go home?**

MATH

Is $9 - 4$ greater than ($>$), less than ($<$), or equal to ($=$) 5?

$9 - 4$ is equal to ($=$) 5

**DID YOU KNOW?**

An astronaut is a person who travels in outer space.

Tell a story about an outer space adventure.


**LANGUAGE** (correct this sentence)

she invited diane, victoria, and rose to her clubhouse

She invited Diane, Victoria, and Rose to her clubhouse.

MATH

What time is it? **3:00**

**DID YOU KNOW?**

Many people say that dogs are "man's best friend."


If you chose an animal to be your best friend, what would you pick and why?

LANGUAGE (correct this sentence)

do you like peas _____

MATH

What time is it? _____



DID YOU KNOW?

New students may feel shy and scared.

Write a letter to a new student who is coming to your school. Tell the student about your school.




LANGUAGE (correct this sentence)

dan walked doggs for extra money _____

MATH


What time is it? _____



DID YOU KNOW?


We live in a country called the United States of America.

Research the name of the state you live in. HINT: There are 50 states.

LANGUAGE (correct this sentence)do you like peas Do you like peas?**MATH**What time is it? 9:30**DID YOU KNOW?**

New students may feel shy and scared.

Write a letter to a new student who is coming to your school. Tell the student about your school.

**LANGUAGE** (correct this sentence)dan walked doggs for extra money Dan walked dogs for extra money.**MATH**What time is it? 7:15**DID YOU KNOW?**

We live in a country called the United States of America.


Research the name of the state you live in. HINT: There are 50 states.

LANGUAGE (correct this sentence)

will we see you in december _____

MATH

What time is it? _____



DID YOU KNOW?

One of the first people to discover America was a man named Christopher Columbus.

Write a story about a new land that you discovered. Make sure to give details about what this new land might look like.




LANGUAGE (correct this sentence)

the flowers bloom in may _____

MATH

What time is it? _____



DID YOU KNOW?

A bee may sting you if it feels that it needs to protect itself.


Would you sting someone if you felt you needed to protect yourself?

LANGUAGE (correct this sentence)

will we see you in december Will we see you in December?

MATH

What time is it? 1:15

**DID YOU KNOW?**

One of the first people to discover America was a man named Christopher Columbus.


Write a story about a new land that you discovered. Make sure to give details about what this new land might look like.

**LANGUAGE** (correct this sentence)

the flowers bloom in may The flowers bloom in May.

MATH

What time is it? 3:45

**DID YOU KNOW?**

A bee may sting you if it feels that it needs to protect itself.


Would you sting someone if you felt you needed to protect yourself?

LANGUAGE (correct this sentence)

we saw three deer running in the woods

MATH

What time is it? _____



DID YOU KNOW?

The food pyramid lets you know what to eat every day to keep a strong and healthy body.

Create a healthy lunch menu for one week.




LANGUAGE (correct this sentence)

did cal's cat have six kittens _____

MATH

What time is it? _____



DID YOU KNOW?

From outer space, Earth looks like a big ball that is blue and green.

Describe what another planet in our solar system looks like.


LANGUAGE (correct this sentence)

we saw three deer running in the woods

We saw three deer running in the woods.

MATH

What time is it? 8:45



DID YOU KNOW?

The food pyramid lets you know what to eat every day to keep a strong and healthy body.

Create a healthy lunch menu for one week.




LANGUAGE (correct this sentence)

did cal's cat have six kittens **Did Cal's cat have six kittens?**

MATH

What time is it? 2:55



DID YOU KNOW?

From outer space, Earth looks like a big ball that is blue and green.

Describe what another planet in our solar system looks like.



Name: _____

LANGUAGE (correct this sentence)

i like to drink a lot of water _____

MATH

If you have one red apple and two green apples, how many apples do you have altogether?



DID YOU KNOW?

Starfish have five arms.

Draw a picture of a starfish and write a story about some of the things you would do if you had five arms.



Name: _____

LANGUAGE (correct this sentence)

you are tall than me _____

MATH

Your mother woke you up at 7:00 a.m. for school. You ate breakfast 30 minutes later. What time did you eat breakfast?



DID YOU KNOW?

Teachers like to know how you are doing.

Write a letter to your kindergarten teacher. Tell about your summer and what you have learned in first grade so far.

LANGUAGE (correct this sentence)

i like to drink a lot of water I like to drink a lot of water.

MATH

If you have one red apple and two green apples, how many apples do you have altogether?

3 apples

**DID YOU KNOW?**

Starfish have five arms.

Draw a picture of a starfish and write a story about some of the things you would do if you had five arms.

**LANGUAGE** (correct this sentence)

you are tall than me You are taller than me.

MATH

Your mother woke you up at 7:00 a.m. for school. You ate breakfast 30 minutes later. What time did you eat breakfast?

7:30 a.m.

**DID YOU KNOW?**

Teachers like to know how you are doing.

Write a letter to your kindergarten teacher. Tell about your summer and what you have learned in first grade so far.



Name: _____

LANGUAGE (correct this sentence)

gail is my bestest friend _____

MATH

You had 5 peas on your plate and you ate 3 of them. How many peas are left?



DID YOU KNOW?

People in the United States travel from state to state.

Pick three states you would like to visit and tell why you would like to visit them.



Name: _____

LANGUAGE (correct this sentence)

we fed the goats at the zoo _____

MATH

Jamie has a dime and a nickel.
Pat has a dime and five pennies.
How much money does each person have?



DID YOU KNOW?

During a thunderstorm, a man named Benjamin Franklin flew a kite. He discovered that lightning is electricity.

Pretend you discovered something new. What would it be?

LANGUAGE (correct this sentence)

gail is my bestest friend **Gail is my best friend.**

MATH

You had 5 peas on your plate and you ate 3 of them. How many peas are left?

2 peas

**DID YOU KNOW?**

People in the United States travel from state to state.

Pick three states you would like to visit and tell why you would like to visit them.

**LANGUAGE** (correct this sentence)

we fed the goats at the zoo **We fed the goats at the zoo.**

MATH

Jamie has a dime and a nickel.
Pat has a dime and five pennies.
How much money does each person have?

15¢

**DID YOU KNOW?**

During a thunderstorm, a man named Benjamin Franklin flew a kite. He discovered that lightning is electricity.

Pretend you discovered something new. What would it be?



Name: _____

LANGUAGE (correct this sentence)

we are making a pizza _____

MATH

If a banana is cut once,
how many pieces are there?



DID YOU KNOW?

Spiders can walk on their webs
without getting stuck.

Draw a picture to show what
your web would look like if you
were a spider.



Name: _____

LANGUAGE (correct this sentence)

the bus pikked me up for school _____

MATH

How many eggs are in one dozen? _____



DID YOU KNOW?

Your stomach breaks down the
food you eat for your body.

Pretend your stomach could speak.
What would it say?

LANGUAGE (correct this sentence)

we are making a pizza **We are making a pizza.**

MATH

If a banana is cut once,
how many pieces are there?

2 pieces

**DID YOU KNOW?**

Spiders can walk on their webs without getting stuck.

Draw a picture to show what your web would look like if you were a spider.

**LANGUAGE** (correct this sentence)

the bus pikked me up for school **The bus picked me up for school.**

MATH

How many eggs are in one dozen? **12 eggs**

**DID YOU KNOW?**

Your stomach breaks down the food you eat for your body.

Pretend your stomach could speak. What would it say?



Name: _____

LANGUAGE (correct this sentence)

he is speak in spanish _____

MATH

Write the correct symbol.

Is 10 greater than ($>$) or less than ($<$) 5? _____



DID YOU KNOW?

When the sun is shining in America, it is dark, or nighttime, on the other side of the world. What do you think the people on the other side of the world are doing?



Name: _____

LANGUAGE (correct this sentence)

jerome sang in muzic class _____

MATH

True or False: 35 is greater than 39. _____



DID YOU KNOW?

A penguin is a bird but it can't fly. Tell about a penguin that discovers it can fly.

LANGUAGE (correct this sentence)

he is speak in spanish He is speaking in Spanish.

MATH

Write the correct symbol.

Is 10 greater than ($>$) or less than ($<$) 5? greater than ($>$)

**DID YOU KNOW?**

When the sun is shining in America, it is dark, or nighttime, on the other side of the world.

What do you think the people on the other side of the world are doing?

**LANGUAGE** (correct this sentence)

jerome sang in muzic class Jerome sang in music class.

MATH

True or False: 35 is greater than 39. False

**DID YOU KNOW?**

A penguin is a bird but it can't fly.

Tell about a penguin that discovers it can fly.



Name: _____

LANGUAGE (correct this sentence)

me went shopping for shoes _____

MATH

True or False: 47 is less than 64. _____



DID YOU KNOW?

You can usually tell when someone is in a bad mood.

How do you feel when you are in a bad mood? What do you do to be in a good mood again?



Name: _____

LANGUAGE (correct these sentences)

wish i good luck. i am going to take a Test.

MATH

True or False: The number fifty-five is equal to 55. _____



DID YOU KNOW?

Mail and e-mail help people keep in touch even when they are far apart.

Write a letter to a relative who lives far away. Tell them about your school.

LANGUAGE (correct this sentence)

me went shopping for shoes I went shopping for shoes.

MATH

True or False: 47 is less than 64. True

**DID YOU KNOW?**

You can usually tell when someone is in a bad mood.

How do you feel when you are in a bad mood? What do you do to be in a good mood again?

**LANGUAGE** (correct these sentences)

wish i good luck. i am going to take a Test.

Wish me good luck. I am going to take a test.

MATH

True or False: The number fifty-five is equal to 55. True

**DID YOU KNOW?**

Mail and e-mail help people keep in touch even when they are far apart.

Write a letter to a relative who lives far away. Tell them about your school.



Name: _____

LANGUAGE (correct this sentence)

brett is wash the car _____

MATH

Write the number for each below: nine and six.



DID YOU KNOW?

George Washington was the first American president.

If you were the president, what would you do to make the world a better place?



Name: _____

LANGUAGE (correct this sentence)

kurt skinned his nee _____

MATH

Which number is larger, 919 or 991? _____



DID YOU KNOW?

Grasshoppers jump really far.

If you could jump far, where would you go? Why?

LANGUAGE (correct this sentence)

brett is wash the car **Brett is washing the car.**

MATH

Write the number for each below: nine and six.

96**DID YOU KNOW?**

George Washington was the first American president.

If you were the president, what would you do to make the world a better place?

**LANGUAGE** (correct this sentence)

kurt skinned his nee **Kurt skinned his knee.**

MATH

Which number is larger, 919 or 991? **991**

**DID YOU KNOW?**

Grasshoppers jump really far.

If you could jump far, where would you go? Why?



Name: _____

LANGUAGE (correct this sentence)

joe eats pizza every friday _____

MATH

Which number is larger, 64 or forty-six?



DID YOU KNOW?

Your heart never stops working, even when you go to sleep.

Is there something you would like to do all the time? Write about it.



Name: _____

LANGUAGE (correct this sentence)

lucy is the most small girl in the class _____

MATH

Which number is smaller, 415 or 514?



DID YOU KNOW?

The biggest chunks of land on Earth are called continents.

Do you know what continent you live on? Draw a picture of what your continent looks like.

LANGUAGE (correct this sentence)

joe eats pizza every friday Joe eats pizza every Friday.

MATH

Which number is larger, 64 or forty-six? 64

**DID YOU KNOW?**

Your heart never stops working, even when you go to sleep.

Is there something you would like to do all the time? Write about it.

**LANGUAGE** (correct this sentence)

lucy is the most small girl in the class Lucy is the smallest girl in the class.

MATH

Which number is smaller, 415 or 514? 415

**DID YOU KNOW?**

The biggest chunks of land on Earth are called continents.

Do you know what continent you live on? Draw a picture of what your continent looks like.



Name: _____

LANGUAGE (correct this sentence)

i need a straw for my milk _____

MATH

Which number is smaller,
three hundred forty-one or 431? _____



DID YOU KNOW?

A polar bear has a thick layer of fat under its skin to protect it from the cold.

What are ways you stay warm when it's very cold?



Name: _____

LANGUAGE (correct this sentence)

i saw two mouses _____

MATH

Fill in the blank: 0, 3, 6, 9, 12, _____



DID YOU KNOW?

Everyone goes to the doctor to stay healthy.

What do you like about going to the doctor? What do you dislike?

LANGUAGE (correct this sentence)

i need a straw for my milk I need a straw for my milk.

MATH

Which number is smaller,
three hundred forty-one or 431? Three hundred forty-one

**DID YOU KNOW?**

A polar bear has a thick layer of fat under its skin to protect it from the cold.

What are ways you stay warm when it's very cold?

**LANGUAGE** (correct this sentence)

i saw two mouses I saw two mice.

MATH

Fill in the blank: 0, 3, 6, 9, 12, 15

**DID YOU KNOW?**

Everyone goes to the doctor to stay healthy.

What do you like about going to the doctor? What do you dislike?



Name: _____

LANGUAGE (correct this sentence)

how many foots do you have _____

MATH

There are 20 fish. Then 14 more come swimming along. How many fish are there now?



DID YOU KNOW?

The United States shares the continent of North America with Canada and Mexico.

Which would you rather visit, Canada or Mexico? Why?



Name: _____

LANGUAGE (correct this sentence)

al is my friend from camp _____

MATH

Draw an octagon. (HINT: Think of a stop sign.)



DID YOU KNOW?

There are many kinds of butterflies in the rain forest.

Why do you think butterflies like the rain forest?

LANGUAGE (correct this sentence)

how many fouts do you have How many feet do you have?

MATH

There are 20 fish. Then 14 more come swimming along. How many fish are there now?

34 fish

**DID YOU KNOW?**

The United States shares the continent of North America with Canada and Mexico.

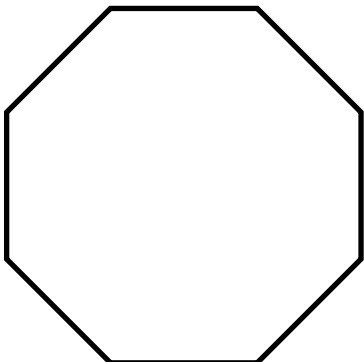
Which would you rather visit, Canada or Mexico? Why?

**LANGUAGE** (correct this sentence)

al is my friend from camp Al is my friend from camp.

MATH

Draw an octagon. (HINT: Think of a stop sign.)

**DID YOU KNOW?**

There are many kinds of butterflies in the rain forest.

Why do you think butterflies like the rain forest?



Name: _____

LANGUAGE (correct this sentence)

my grandma is from africa _____

MATH

Draw a six-sided polygon.



DID YOU KNOW?

Your nose helps you smell things.
What is your favorite scent? Why?



Name: _____

LANGUAGE (correct this sentence)

she sleep through the storm last night _____

MATH

Draw a square and a triangle that share one side.



DID YOU KNOW?

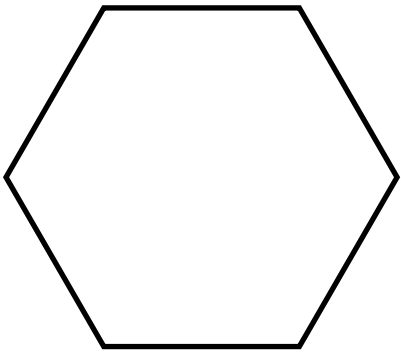
Spring, summer, fall, and winter
are all seasons.
What is your favorite season and
why?

LANGUAGE (correct this sentence)

my grandma is from africa My grandma is from Africa.

MATH

Draw a six-sided polygon.

**DID YOU KNOW?**

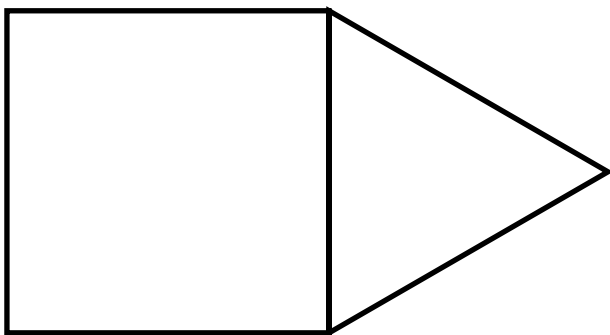
Your nose helps you smell things.
What is your favorite scent? Why?

**LANGUAGE** (correct this sentence)

she sleep through the storm last night She slept through the storm last night.

MATH

Draw a square and a triangle that share one side.

**DID YOU KNOW?**

Spring, summer, fall, and winter
are all seasons.
What is your favorite season and
why?



Name: _____

LANGUAGE (correct this sentence)

jennifer took a trip to paris, france _____

MATH

$$\begin{array}{r} 113 \\ +114 \\ \hline \square \end{array}$$



DID YOU KNOW?

There is a sea animal called a sponge.

What does it look like, and where do you think it lives?




Name: _____

LANGUAGE (correct this sentence)

connor visit his aunt last saturday _____

MATH

Draw a line of symmetry to show 2 equal parts.



DID YOU KNOW?

Things we like to do are called hobbies.

What's your favorite thing to do?
How do you feel when you are doing that?

LANGUAGE (correct this sentence)

jennifer took a trip to paris, france Jennifer took a trip to Paris, France.

MATH

$$\begin{array}{r} 113 \\ +114 \\ \hline \boxed{227} \end{array}$$

**DID YOU KNOW?**

There is a sea animal called a sponge.

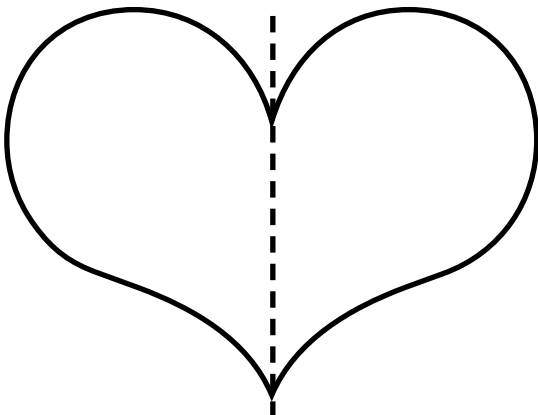
What does it look like, and where do you think it lives?

**LANGUAGE** (correct this sentence)

connor visit his aunt last saturday Connor visited his aunt last Saturday.

MATH

Draw a line of symmetry to show 2 equal parts.

**DID YOU KNOW?**

Things we like to do are called hobbies.

What's your favorite thing to do?
How do you feel when you are doing that?




Name: _____

LANGUAGE (correct this sentence)

we droves to colorado to see the rocky mountains

MATH

Draw 2 lines of symmetry in this shape so there are 4 equal parts.



DID YOU KNOW?

On each side of the United States is an ocean.

Write a story about a boat trip you would take on an ocean.



Name: _____

LANGUAGE (correct this sentence)

the planet venus is covered in clouds _____

MATH


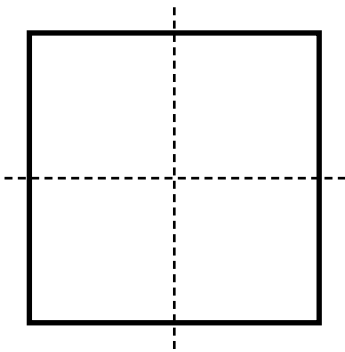

$$\begin{array}{r} 7 \\ 6 \\ + 5 \\ \hline \square \end{array}$$



DID YOU KNOW?

Spiders shed their skin when they grow.

Write about a place a spider would go to shed its skin.





Name: _____

LANGUAGE (correct this sentence)

Deer Grandma

thank you for the cookies _____

MATH

$$\begin{array}{r} 9 \\ 3 \\ +12 \\ \hline \square \end{array}$$



DID YOU KNOW?

Your skeleton keeps you standing straight up.

Would you rather walk on two legs or four legs? Why?



Name: _____

LANGUAGE (correct this sentence)

ellen is more taller than I be _____

MATH

Carol has 10 dominoes.

Parker takes 2 of Carol's dominoes.

How many dominoes does Carol have?



DID YOU KNOW?

When you lose your baby teeth, they are replaced with permanent teeth.

How many teeth have you lost?

LANGUAGE (correct this sentence)

Deer Grandma

thank you for the cookies Dear Grandma,Thank you for the cookies.**MATH**

$$\begin{array}{r} 9 \\ 3 \\ +12 \\ \hline \boxed{24} \end{array}$$

**DID YOU KNOW?**

Your skeleton keeps you standing straight up.

Would you rather walk on two legs or four legs? Why?

**LANGUAGE** (correct this sentence)ellen is more taller than I be Ellen is taller than I am.**MATH**

Carol has 10 dominoes.

Parker takes 2 of Carol's dominoes.

How many dominoes does Carol have?

8 dominoes**DID YOU KNOW?**

When you lose your baby teeth, they are replaced with permanent teeth.

How many teeth have you lost?



Name: _____

LANGUAGE (correct this sentence)

the airplane flew over the atlantic ocean

MATH

Underline the number in the 10's place, and circle the number in the 1's

42



DID YOU KNOW?

An octopus has eight arms.
Write directions for how an octopus should put a shirt on.



Name: _____

LANGUAGE (correct this sentence)

rudy arrive early _____

MATH

Measure your pencil or pen, and write down how long it is in inches.

_____ inches.



DID YOU KNOW?

Pets are animals we keep in the house.
Why do you think people like to have pets?

LANGUAGE (correct this sentence)

the airplane flew over the atlantic ocean

The airplane flew over the Atlantic Ocean.

MATH

Underline the number in the 10's place, and circle the number in the 1's

42

**DID YOU KNOW?**

An octopus has eight arms.
Write directions for how an octopus should put a shirt on.

**LANGUAGE** (correct this sentence)

rudy arrive early **Rudy arrived early. or Rudy arrives early.**

MATH

Measure your pencil or pen, and write down how long it is in inches.

Answers will vary.

**DID YOU KNOW?**

Pets are animals we keep in the house.
Why do you think people like to have pets?



Name: _____

LANGUAGE (correct this sentence)

leslie's turtle was slow than mine was _____

MATH

A hexagon has _____ sides. Draw a hexagon.



DID YOU KNOW?

Europe is one of seven continents.
How would you get to Europe
from the United States?



Name: _____

LANGUAGE (correct this sentence)

many animal live in a tree _____

MATH

How many inches are in one foot? _____



DID YOU KNOW?

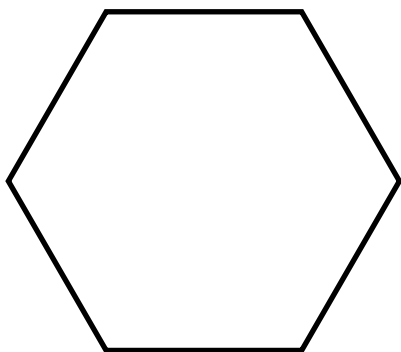
An anthill has several different
rooms in it.
Write about the different rooms in
your house.

LANGUAGE (correct this sentence)

leslie's turtle was slow than mine was Leslie's turtle was slower than mine was.

MATH

A hexagon has 6 sides. Draw a hexagon.

**DID YOU KNOW?**

Europe is one of seven continents.
How would you get to Europe
from the United States?

**LANGUAGE** (correct this sentence)

many animal live in a tree Many animals live in a tree.

MATH

How many inches are in one foot? 12 inches

**DID YOU KNOW?**

An anthill has several different
rooms in it.
Write about the different rooms in
your house.



Name: _____

LANGUAGE (correct this sentence)

how many tooth have you lost _____

MATH

How many feet are in one yard? _____



DID YOU KNOW?

Your muscles let you run, walk, dance, toss, pull, and push.

List five things you could do if you were the strongest person in the world.



Name: _____

LANGUAGE (correct this sentence)

the king live in a castle _____

MATH

Solve this problem:

$$\begin{array}{r} 365 \\ + 14 \\ \hline \square \end{array}$$



DID YOU KNOW?

There are four main oceans: Atlantic, Pacific, Indian, and Arctic. What ocean is closest to you?

LANGUAGE (correct this sentence)

how many tooth have you lost How many teeth have you lost?

MATH

How many feet are in one yard? 3 feet

**DID YOU KNOW?**

Your muscles let you run, walk, dance, toss, pull, and push.

List five things you could do if you were the strongest person in the world.

**LANGUAGE** (correct this sentence)

the king live in a castle The king lives in a castle.

MATH

Solve this problem:

$$\begin{array}{r} 365 \\ + 14 \\ \hline \boxed{379} \end{array}$$

**DID YOU KNOW?**

There are four main oceans: Atlantic, Pacific, Indian, and Arctic. What ocean is closest to you?



Name: _____

LANGUAGE (correct this sentence)

i has many neighbors _____

MATH

Solve this problem:

$$\begin{array}{r} 989 \\ - 73 \\ \hline \end{array}$$



DID YOU KNOW?

An elephant has 100,000 muscles in its trunk.

If you had a trunk, what would you like most about having it?



Name: _____

LANGUAGE (correct this sentence)

our new home is in madison wisconsin

MATH

A plant is 4 inches tall.
It grows 1 inch per week.
How tall is it after 4 weeks?



DID YOU KNOW?

Sometimes after it rains, you can see a rainbow.

What would you find if you went to the end of a rainbow? Write a story about it.

LANGUAGE (correct this sentence)

i has many neighbors I have many neighbors.

MATH

Solve this problem:

$$\begin{array}{r} 989 \\ - 73 \\ \hline \end{array}$$

916

**DID YOU KNOW?**

An elephant has 100,000 muscles in its trunk.

If you had a trunk, what would you like most about having it?

**LANGUAGE** (correct this sentence)

our new home is in madison wisconsin

Our new home is in Madison, Wisconsin.

MATH

A plant is 4 inches tall.

It grows 1 inch per week.

How tall is it after 4 weeks?

8 inches

**DID YOU KNOW?**

Sometimes after it rains, you can see a rainbow.

What would you find if you went to the end of a rainbow? Write a story about it.



Name: _____

LANGUAGE (correct this sentence)

she can't finde her pink shirt _____

MATH

How many letters are between B and L? _____



DID YOU KNOW?

Every state has a capital city. People in the capital make decisions and rules for each state. What rule would you make for your state? Why?



Name: _____

LANGUAGE (correct this sentence)

the spider has eight leggs _____

MATH

The first and second day we drove 20 miles per day.
The third day we drove 30 miles.
How many total miles did we drive?



DID YOU KNOW?

Insects can run, fly, or even swim away from danger. What do you do when you are scared?

LANGUAGE (correct this sentence)

she can't finde her pink shirt **She can't find her pink shirt.**

MATH

How many letters are between B and L? **9 letters**

**DID YOU KNOW?**

Every state has a capital city. People in the capital make decisions and rules for each state. What rule would you make for your state? Why?

**LANGUAGE** (correct this sentence)

the spider has eight leggs **The spider has eight legs.**

MATH

The first and second day we drove 20 miles per day.
The third day we drove 30 miles.
How many total miles did we drive?

70 miles

**DID YOU KNOW?**

Insects can run, fly, or even swim away from danger. What do you do when you are scared?



Name: _____

LANGUAGE (correct this sentence)

i have alot of science homework _____

MATH

Write these numbers from largest to smallest:

100, 2, 6, 50, 11



DID YOU KNOW?

Your eye is the size of a ping pong ball.

Imagine you can not see for one day. What would you do to get around school?



Name: _____

LANGUAGE (correct this sentence)

a dove is a wite bird _____

MATH

There are _____ days in 4 weekends.



DID YOU KNOW?

A tadpole is a baby frog.

What are some other animals that live in a pond?

LANGUAGE (correct this sentence)

i have alot of science homework I have a lot of science homework.

MATH

Write these numbers from largest to smallest:

100, 2, 6, 50, 11

100, 50, 11, 6, 2

**DID YOU KNOW?**

Your eye is the size of a ping pong ball.

Imagine you can not see for one day. What would you do to get around school?

**LANGUAGE** (correct this sentence)

a dove is a wite bird A dove is a white bird.

MATH

There are 8 days in 4 weekends.

**DID YOU KNOW?**

A tadpole is a baby frog.

What are some other animals that live in a pond?



Name: _____

LANGUAGE (correct this sentence)

this kave is dark and kold _____

MATH

How many legs do a
dog and turtle have altogether? _____



DID YOU KNOW?

Unlike most other bears, panda bears have thumbs.

Where do pandas live? Describe what you think their lives are like.



Name: _____

LANGUAGE (correct this sentence)

the children playd by the pool _____

MATH

If you eat 3 meals a day, how many
meals will you have eaten in 3 days? _____



DID YOU KNOW?

Some stories are really funny.

Write about the last funny story you heard.

LANGUAGE (correct this sentence)

this kave is dark and kold **This cave is dark and cold.**

MATH

How many legs do a
dog and turtle have altogether? **8 legs**

**DID YOU KNOW?**

Unlike most other bears, panda bears have thumbs.

Where do pandas live? Describe what you think their lives are like.

**LANGUAGE** (correct this sentence)

the children playd by the pool **The children played by the pool.**

MATH

If you eat 3 meals a day, how many
meals will you have eaten in 3 days? **9 meals**

**DID YOU KNOW?**

Some stories are really funny.

Write about the last funny story you heard.

LANGUAGE (correct this sentence)

fishes swim in skools _____

MATH

Counting from left to right, circle the fifth star.



DID YOU KNOW?



The United States has a national flag. Each state also has a flag. Design a flag to represent your community.

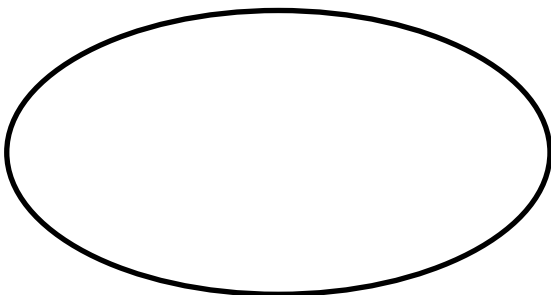


LANGUAGE (correct this sentence)

eva rode a horse and one a ribbon _____

MATH

Is this shape a circle or an oval? _____




DID YOU KNOW?

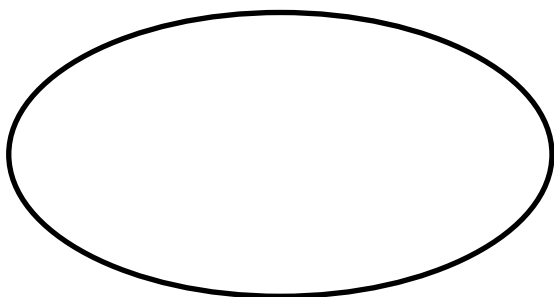
Plants grow from seeds. Explain what you need to do to grow a plant.

LANGUAGE (correct this sentence)fishes swim in skools Fish swim in schools.**MATH**

Counting from left to right, circle the fifth star.

**DID YOU KNOW?**

The United States has a national flag. Each state also has a flag. Design a flag to represent your community.

**LANGUAGE** (correct this sentence)eva rode a horse and one a ribbon Eva rode a horse and won a ribbon.**MATH**Is this shape a circle or an oval? oval**DID YOU KNOW?**

Plants grow from seeds. Explain what you need to do to grow a plant.

LESSON 1 QUIZ (Lessons 1-10)

Shade in the correct answer.

LANGUAGE SKILLS

1. whos at the door

- ☐ Who are at the door?
- ☐ Whose at the door?
- ☐ Who's at the door?
- ☐ Who is that at the door?

2. we want to stay here

- ☐ We want to stay here?
- ☐ We want to stay here.
- ☐ We want to stay hear.
- ☐ We won't stay here.

3. she wants to ride with ben

- ☐ She want to ride with Ben.
- ☐ She wants to ride with been.
- ☐ She wants too ride with Ben
- ☐ She wants to ride with Ben.

4. can the dog bark

- ☐ Can the Dog bark?
- ☐ Can the dog bark?
- ☐ Can't the dog bark?
- ☐ Can that dog bark!

5. jeff and bob play ball

- ☐ Jeff and bob play ball.
- ☐ Jeff and Bob play ball.
- ☐ Jeff and Bob plays ball.
- ☐ Jeff and Bob play ball

MATH SKILLS

6. $7 + 2 = \underline{\quad}$

- ☐ 5
- ☐ 14
- ☐ 8
- ☐ 9

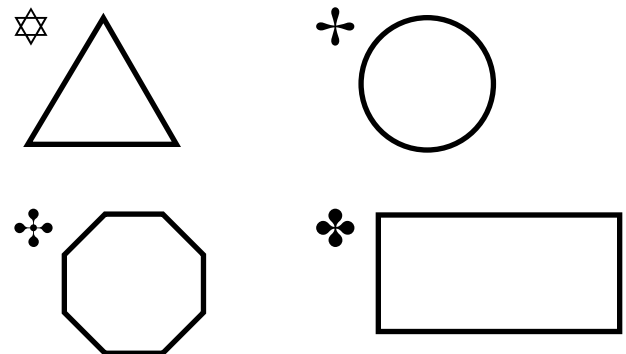
7. How many sides does a triangle have?

- ☐ 2
- ☐ 3
- ☐ 4
- ☐ 6

8. How much money does a quarter equal?

- ☐ 10 cents
- ☐ 5 cents
- ☐ 25 cents
- ☐ 1 dollar

9. Which shape below is a rectangle?



10. How many legs does a dog have?

- ☐ 2
- ☐ 4
- ☐ 6
- ☐ 8

LESSON 2 QUIZ (Lessons 11-20)

Shade in the correct answer.

LANGUAGE SKILLS

1. grace and allen see the cat

- ☐ Grace and Allen sees the cat.
- ☐ Grace and Allen seen the cat.
- ☐ Grace and allen see the cat
- ☐ Grace and Allen see the cat.

2. they sits on the floor

- ☐ they sit on the floor.
- ☐ They sits on the floor.
- ☐ They sit on the floor.
- ☐ They sat on the floor.

3. do you like to draw

- ☐ Do you like to draw?
- ☐ Do you likes to draw?
- ☐ You do like to draw.
- ☐ Do you want to draw?

4. me like cookies

- ☐ Me like cookies.
- ☐ I like cookies.
- ☐ I like cookies?
- ☐ Me likes cookies.

5. we sees a horse

- ☐ We sees a horse.
- ☐ We saw a horse.
- ☐ We sea a horse.
- ☐ We see a horse.

MATH SKILLS

6. $5 - 3 = \underline{\quad}$

- ☐ 5
- ☐ 8
- ☐ 15
- ☐ 2





7. 2 dollars + 3 dollars = dollars

- ☐ 4
- ☐ 5
- ☐ 23
- ☐ 1

8. How much money does a nickel equal?

- ☐ 10 cents
- ☐ 25 cents
- ☐ 5 cents
- ☐ 50 cents

9. Which row shows 5 happy faces?

- ☐ 
- ☐ 
- ☐ 
- ☐ 

10. 4 crayons + 5 crayons = crayons

- ☐ 9
- ☐ 4
- ☐ 1
- ☐ 8

LESSON 3 QUIZ (Lessons 21-30)

Shade in the correct answer.

LANGUAGE SKILLS

1. who wants to ride bikes

- ☐ Who want to ride bikes.
- ☐ Who wants to ride bikes?
- ☐ Who want to ride bikes?
- ☐ Who wanted to ride a bike?

2. the man like the rain

- ☐ the man likes the rain
- ☐ A man likes the rain.
- ☐ The man likes the train.
- ☐ The man likes the rain.

3. carlos and i want to see a shark

- ☐ Carlos and I went to see a shark
- ☐ Carlos and I want to see a shark.
- ☐ Carlos and I wanted to see a shark.
- ☐ Carlos and I saw a shark!

4. wanda and i can swim

- ☐ Wanda said I can swim.
- ☐ Wanda and I can swim.
- ☐ wanda and I can swim
- ☐ Wanda and I can swim

5. they like to sits on the floor

- ☐ They like to sits on the floor.
- ☐ They like to sat on the floor.
- ☐ They like to sit on the floor.
- ☐ They likes to sit in the floor.

MATH SKILLS

6. How many months are there in one year?

- ☐ 365
- ☐ 7
- ☐ 12
- ☐ 4

7. 1 dime + 1 penny = _____ cents

- ☐ 11
- ☐ 6
- ☐ 26
- ☐ 15

8. What shape has 4 straight sides that are all the same length?

- ☐ Square
- ☐ Circle
- ☐ Triangle
- ☐ Star

9. How many days are there in one week?

- ☐ 5
- ☐ 30
- ☐ 31
- ☐ 7

10. Count backward. What is the missing number?

15, 14, 13, _____, 11, 10, 9, 8

- ☐ 12
- ☐ 14
- ☐ 7
- ☐ 16

LESSON 4 QUIZ (Lessons 31-40)

Shade in the correct answer.

LANGUAGE SKILLS

1. do you see a bird

- ☐ Do you sea a bird?
- ☐ Do you see a Bird?
- ☐ Do you see a bird?
- ☐ Do you see a bird.

2. did joan get a toy

- ☐ Did Joan get a toy?
- ☐ Did Joan get a toy.
- ☐ Didn't Joan get a toy?
- ☐ Did Joan got a toy?

3. mom and dad will be at the party

- ☐ Dad will be at the party.
- ☐ Will Mom and Dad be at the party?
- ☐ Mom and dad will be at the party?
- ☐ Mom and Dad will be at the party.

4. where did sarah go camping

- ☐ Where did Sarah go camping
- ☐ Where did Sarah go camping?
- ☐ Were did Sarah go camping?
- ☐ Did Sarah go camping?

5. will the boys help carl

- ☐ Will the boys help carl?
- ☐ Will the boys helps Carl?
- ☐ Will the boys help Carl.
- ☐ Will the boys help Carl?

MATH SKILLS

6. What number comes right before 35?

- ☐ 36
- ☐ 30
- ☐ 34
- ☐ 3

7. Which one of the following addition problems equals 8?

- ☐ $6 + 2$
- ☐ $4 + 5$
- ☐ $3 + 4$
- ☐ $10 + 2$

8. $4 \text{ bugs} + 6 \text{ bugs} = \underline{\hspace{1cm}}$ bugs

- ☐ 2
- ☐ 4
- ☐ 24
- ☐ 10

9. Which is the smallest number below?

- ☐ 14
- ☐ 16
- ☐ 41
- ☐ 11

10. $25 \text{ cents} + 10 \text{ cents} = \underline{\hspace{1cm}}$ cents

- ☐ 30
- ☐ 35
- ☐ 15
- ☐ 250

LESSON 5 QUIZ (Lessons 41-50)

Shade in the correct answer.

LANGUAGE SKILLS

1. jack fell down

- ☐ Jack fall down.
- ☐ Jack fallen down.
- ☐ Jack fell down.
- ☐ Jack falls down

2. emma holded the pinecone

- ☐ emma held the pinecone
- ☐ Emma held the pinecone.
- ☐ Emma holds the pinecone
- ☐ Emma hold the pinecone.

3. jacob is not here

- ☐ Jacob is not here.
- ☐ Jacob isn't not here.
- ☐ Jacob is not there.
- ☐ Jacob is not hear.

4. kate lost the video

- ☐ Kate lose the video.
- ☐ Kate loose the video.
- ☐ Kate losted the video.
- ☐ Kate lost the video.

5. ronald, liz, and denny stayed at school

- ☐ Ronald and Denny stayed at school.
- ☐ Ronald, Liz, and Denny stayed at school.
- ☐ Ronald, liz, and denny stayed at school.
- ☐ Ronald, Liz, and Denny staid at school.

MATH SKILLS

6. $4 + \underline{\hspace{1cm}} = 12$

- ☐ 4
- ☐ 6
- ☐ 8
- ☐ 10

7. What is the seventh letter of the alphabet?

- ☐ S
- ☐ 7
- ☐ H
- ☐ G

8. 2 dimes = cents

- ☐ 10
- ☐ 20
- ☐ 30
- ☐ 40

9. What number comes right after 99?

- ☐ 98
- ☐ 10
- ☐ 100
- ☐ 66

10. $10 \text{ cows} - 7 \text{ cows} = \underline{\hspace{1cm}} \text{ cows}$

- ☐ 3
- ☐ 17
- ☐ 4
- ☐ 2

LESSON 6 QUIZ (Lessons 51-60)

Shade in the correct answer.

LANGUAGE SKILLS

1. jill already reads that book

- ☐ Jill already readed that book.
- ☐ Jill already read that book.
- ☐ Jill already reads that books.
- ☐ Jill already red that book.

2. would you like to come over

- ☐ Would you like to come over?
- ☐ Wouldn't you like to come over?
- ☐ Wood you like to come over?
- ☐ Would you likes to come over?

3. do she like to read

- ☐ Do she likes to read?
- ☐ Do she like to read?
- ☐ Do she like to reed?
- ☐ Does she like to read?

4. julio and david painted the house

- ☐ Julio and david painted the house.
- ☐ Julio and David painted the house.
- ☐ Julio and David painted their house
- ☐ Julio and David like to paint houses.

5. how is pam paying for the movie

- ☐ How is Pam paying for the movie?
- ☐ Is Pam paying for the movie?
- ☐ Who is Pam paying for the movie?
- ☐ How is Pam paying for the movie.

MATH SKILLS

6. $6 - 6 =$ _____

- ☐ 12
- ☐ 66
- ☐ 16
- ☐ 0

7. $7 \text{ airplanes} + 2 \text{ airplanes} =$ _____ airplanes

- ☐ 9
- ☐ 5
- ☐ 72
- ☐ 7

8. 2 nickels equal how much money?

- ☐ 5 dollars
- ☐ 5 cents
- ☐ 10 cents
- ☐ 55 cents

9. What is the missing number? 25, _____, 27

- ☐ 24
- ☐ 26
- ☐ 28
- ☐ 30

10. $1 \text{ quarter} + 1 \text{ nickel} =$ _____ cents

- ☐ 30
- ☐ 15
- ☐ 26
- ☐ 35

LESSON 7 QUIZ (Lessons 61-70)

Shade in the correct answer.

LANGUAGE SKILLS

1. isabel didn't see the sign

☐ Isabel didnt see the sign.

☐ Isabel didn't see the sign.

☐ Isabel didn't sea the sign.

☐ Isabel did see the sign.

2. zack eat breakfast and then brush his teeth

☐ Zack ate breakfast and then brush his teeth.

☐ Zack eated breakfast and then brushed his teeth.

☐ Zack eat breakfast and then brushed his teeth.

☐ Zack ate breakfast and then brushed his teeth.

3. where is keith going today

☐ Where is Keith going today?

☐ Where is keith going today?

☐ Where is Keith going to day?

☐ Wear is Keith going today?

4. chuck like to play ball

☐ Chuck like to play ball.

☐ Chuck likes to play ball.

☐ Chuck wants to play ball.

☐ Chuck likes to play ball

5. yesterday we played a long game of checkers

☐ Yesterday we played along game of checkers.

☐ Yesterday we play a long game of checkers.

☐ Yesterday, we played a game of checkers.

☐ Yesterday, we played a long game of checkers.

6. Hot dogs cost 50 cents each. How much would 3 hot dogs cost?

☐ \$3.00

☐ \$1.50

☐ \$1.00

☐ \$2.00

7. Which number comes next? 1, 3, 5, 7, _____

☐ 16

☐ 8

☐ 9

☐ 2

8. What does $25 + 25 + 25 + 25$ equal?

☐ 50

☐ 75

☐ 100

☐ 125

9. How much money does 4 quarters equal?

☐ \$1.00

☐ 75 cents

☐ 50 cents

☐ \$4.00

10. $101 - 5 =$ _____

☐ 106

☐ 95

☐ 51

☐ 96

MATH SKILLS

LESSON 8 QUIZ (Lessons 71-80)

Shade in the correct answer.

LANGUAGE SKILLS

1. i like to drink a lot of water

- ☐ I likes to drink a lot of water.
- ☐ I like to drink a lot of water.
- ☐ I like to drink alot of water.
- ☐ I like to drinks a lot of water.

2. will we see you in december

- ☐ Will we see you in December?
- ☐ Will we see you in december?
- ☐ We will see you in December.
- ☐ Will we see you in December.

3. the flowers bloom in may

- ☐ The flowers bloom in may.
- ☐ The flours bloom in May.
- ☐ The flowers bloom in May.
- ☐ The flowers blooms in May.

4. don't you have to go home

- ☐ Don't you have to go home?
- ☐ You don't have to go home.
- ☐ Dont you have to go home?
- ☐ Don't you have to go home.

5. you are tall than me

- ☐ You are taller then me.
- ☐ You are tall like me.
- ☐ You are taller than me.
- ☐ You is taller than me.


MATH SKILLS

6. If you have one red apple and two green apples, how many apples do you have?

- ☐ 2
- ☐ 4
- ☐ 6
- ☐ 3

7. What time is it?

- ☐ 6:45
- ☐ 9:30
- ☐ 10:30
- ☐ 3:30



8. If you start playing ball at 3:00 and play for one hour, what time is it when you finish playing ball?


- ☐ 4:00
- ☐ 3:30
- ☐ 5:00
- ☐ 2:00

9. Judy has 4 toy horses and Jeannie has 10. How many toy horses do they have altogether?

- ☐ 6
- ☐ 16
- ☐ 410
- ☐ 14

10. What time is it?

- ☐ 10:04
- ☐ 10:30
- ☐ 10:20
- ☐ 3:50



LESSON 9 QUIZ (Lessons 81-90)

Shade in the correct answer.

LANGUAGE SKILLS

1. brett is wash the car

- ☐ Brett is wash the car.
- ☐ Brett wash the car.
- ☐ Brett washed the car
- ☐ Brett is washing the car.

2. kurt skinned his nee.

- ☐ Kurt skin his knee.
- ☐ Kurt skinned his knee.
- ☐ Kurt skined his knee.
- ☐ Kurt skimmed his knee.

3. he is speak in spanish

- ☐ He is speak in spanish.
- ☐ He is speke in Spanish.
- ☐ He spoke in spanish.
- ☐ He is speaking in Spanish.

4. me went shopping for shoes

- ☐ I went shopping for shoos.
- ☐ I went shopping for shoes.
- ☐ I went shopping four shoes.
- ☐ I went to shop for shoes.

5. the bus pikked me up for school

- ☐ The bus picked me up for school.
- ☐ The buss picked me up for skool.
- ☐ The bus packed me up for school.
- ☐ The bus parked at my school.

MATH SKILLS

6. Of the numbers below, which one is the largest?

- ☐ 189
- ☐ 198
- ☐ 819
- ☐ 981

7. How many eggs are in a dozen?

- ☐ 6
- ☐ 10
- ☐ 12
- ☐ 24

8. You have five cupcakes, but your dog eats two of them! How many cupcakes do you have left?

- ☐ 3
- ☐ 2
- ☐ 7
- ☐ 10

9. What number comes next? 10, 20, 30, 40, _____

- ☐ 41
- ☐ 45
- ☐ 50
- ☐ 100

10. True or False: 19 is less than 91

- ☐ True
- ☐ False

LESSON 10 QUIZ (Lessons 91-100)

Shade in the correct answer.

LANGUAGE SKILLS

1. joe eats pizza every friday

- ☐ Joe eats pizza every friday.
- ☐ Joe eats Pizza every Friday.
- ☐ Joe eats pizza every Friday.
- ☐ Joe will eat pizza this Friday.

2. jennifer took a trip to rome, italy

- ☐ Jennifer took a trip to Rome, Italy.
- ☐ Jennifer took a trip to roam Italy.
- ☐ Jennifer took a trip to Rome Italy.
- ☐ Jennifer took a trip to Roam, Italy.

3. connor visit his aunt last saturday

- ☐ Connor visited his ant last Saturday.
- ☐ Connor visits his aunt on saturdays.
- ☐ Connor visited his aunt last Saturday.
- ☐ Connor will visit his aunt next Saturday.

4. my grandma is from japan

- ☐ My grandma, is from japan.
- ☐ My grandma is from Japan.
- ☐ My grandma is Japanese.
- ☐ My grandma lives in Japan.

5. she sleep through the storm last night

- ☐ She sleeps through the storm last night.
- ☐ She sleep through the storm last night.
- ☐ She slept through the storm last night.
- ☐ She slept through the storm last night.

MATH SKILLS

6. Which number is the smallest?

- ☐ 13
- ☐ 18
- ☐ 16
- ☐ 11

7. What number comes next? 0, 3, 6, 9, 12, _____

- ☐ 24
- ☐ 15
- ☐ 13
- ☐ 21

8. There are 20 fish. Then 14 more come swimming along. How many fish are there now?

- ☐ 6
- ☐ 2,014
- ☐ 24
- ☐ 34

9. How many sides does an octagon have? (HINT: A stop sign is an octagon.)

- ☐ 4
- ☐ 6
- ☐ 8
- ☐ 10

10. There are 34 fish. Then 20 swim away. How many fish are there now?

- ☐ 54
- ☐ 14
- ☐ 24
- ☐ 34

LESSON 11 QUIZ (Lessons 101-110)

Shade in the correct answer.

LANGUAGE SKILLS

1. how many tooth have you lost

- ☐ How many tooth have you lost?
- ☐ How many teeth have you lost?
- ☐ Have you lost many teeth?
- ☐ How many tooths have you lost?

2. ellen is taller than i be

- ☐ Ellen is taller than I is.
- ☐ Ellens taller than I am.
- ☐ Ellen is taller than I am.
- ☐ I am taller than Ellen.

3. bobs turtle was slow than mine was

- ☐ Bob's turtle was slower than mine was.
- ☐ Bob's turtle was slower than me.
- ☐ Bobs turtle was slower than mine was.
- ☐ Bob's turtle was more slower than mine was.

4. we droves to colorado to see the rocky mountains

- ☐ We drove to colorado to see the Rocky Mountains.
- ☐ We drived to Colorado to see the Rocky Mountains.
- ☐ We drove to Colorado to see the rocky mountains.
- ☐ We drove to Colorado to see the Rocky Mountains.

5. many animal live in a tree

- ☐ Many animals live in a tree.
- ☐ Many aministrals live in a tree.
- ☐ Many animals lives in a tree.
- ☐ Many animal lives in a tree.

MATH SKILLS

6. How many feet are in one yard?

- ☐ 2
- ☐ 3
- ☐ 4
- ☐ 6

7. $6 + 3 + 5 =$ _____

- ☐ 9
- ☐ 16
- ☐ 12
- ☐ 14

8. Rodney has 6 baseball cards. Tim has 5.

How many cards do they have altogether?

- ☐ 9
- ☐ 11
- ☐ 15
- ☐ 19

9. How many inches are in one foot?

- ☐ 10
- ☐ 12
- ☐ 20
- ☐ 36

10. True or false? A hexagon has six sides.

- ☐ True
- ☐ False

LESSON 12 QUIZ (Lessons 111-120)

Shade in the correct answer.

LANGUAGE SKILLS

1. eva rode a horse and one a ribbon

☐ Eva road a horse and won a ribbon.
☐ Eva rode a horse and one a ribbon.
☐ Eva rode a horse and won a ribbon.
☐ Eva rode a horse and won a ribbin.

2. i have alot of science homework

☐ I have alot of Science home work.
☐ I gots a lot of science homework.
☐ I has a lot of science homework.
☐ I have a lot of science homework.

3. i has many neighbors

☐ I have many neighbors.
☐ I has many neighbors.
☐ I have many neighbor.
☐ I have meny neighbors.

4. a dove is a wite bird

☐ A dove is a wite bird.
☐ A dove is a white burd.
☐ A dove is a white bird.
☐ An dove is an white bird.

5. this kave is dark and kold

☐ This cave is dark and cold.
☐ This kave is dark and cold.
☐ All caves are dark and cold.
☐ This cave is dark and kold.

MATH SKILLS

6. Write these numbers from the smallest to the largest: 100, 45, 83, 6, 0

☐ 6, 0, 83, 45, 100
☐ 0, 100, 45, 83, 6
☐ 0, 6, 45, 83, 100
☐ 100, 83, 45, 6, 0

7. Write these numbers from the largest to the smallest: 76, 14, 39, 5, 24

☐ 5, 14, 24, 39, 76
☐ 76, 39, 24, 14, 5
☐ 39, 76, 5, 14, 24
☐ 76, 39, 14, 24, 5

8. Meg and Joe drove 40 miles on one day, 25 miles the next day, and 15 miles on the last day. How many miles did they drive altogether?

☐ 80
☐ 70
☐ 75
☐ 65

9. There are 7 days in every week. How many days are there in three weeks?









☐ 14
☐ 28
☐ 21
☐ 10

10. $158 - 31 = \underline{\hspace{2cm}}$











☐ 189
☐ 172
☐ 118
☐ 127

ANSWER KEY











QUIZ 1, PAGE 124

1. 
2. 
3. 
4. 
5. 
6. 
7. 
8. 
9. 
10. 











QUIZ 4, PAGE 127

1. 
2. 
3. 
4. 
5. 
6. 
7. 
8. 
9. 
10. 











QUIZ 7, PAGE 130

1. 
2. 
3. 
4. 
5. 
6. 
7. 
8. 
9. 
10. 











QUIZ 10, PAGE 133

1. 
2. 
3. 
4. 
5. 
6. 
7. 
8. 
9. 
10. 











QUIZ 2, PAGE 125

1. 
2. 
3. 
4. 
5. 
6. 
7. 
8. 
9. 
10. 

QUIZ 5, PAGE 128

1. 
2. 
3. 
4. 
5. 
6. 
7. 
8. 
9. 
10. 











QUIZ 8, PAGE 131

1. 
2. 
3. 
4. 
5. 
6. 
7. 
8. 
9. 
10. 

QUIZ 11, PAGE 134

1. 
2. 
3. 
4. 
5. 
6. 
7. 
8. 
9. 
10. 

QUIZ 3, PAGE 126

1. 
2. 
3. 
4. 
5. 
6. 
7. 
8. 
9. 
10. 










QUIZ 6, PAGE 129

1. 
2. 
3. 
4. 
5. 
6. 
7. 
8. 
9. 
10. 

QUIZ 9, PAGE 132

1. 
2. 
3. 
4. 
5. 
6. 
7. 
8. 
9. 
10. 

QUIZ 12, PAGE 135

1. 
2. 
3. 
4. 
5. 
6. 
7. 
8. 
9. 
10. 