

First Grade Assessments: Fall (end of October to end of December)

Download these hand-selected worksheets for evaluating the progress and assessing the skills of your first grade students for fall evaluations.

Table of Contents

Sight Words Inventory
Narrative Writing Prompt
Short Vowel Word Families
 Long/Short I
 Long/Short O
 Long/Short U
Blends & Digraphs
Informational Writing
Procedural Writing
Sentence Features (Capitalization)
Sentence Features (Punctuation)
Assessment: Addition to 20
Assessment: Subtraction to 20
 Numbers to 100
 Addition Word Problems
 Subtraction Word Problems
 Measurement Assessment
Assessment: Adding Three Numbers
 Long/Short A
 Long/Short E

Name: _____

Date: _____

Sight Words



Point to each word. Circle the words students can read by sight.

after

any

as

ask

by

could

every

from

give

had

have

her

just

live

open

over

is

put

said

some

stop

take

thank

the

them

then

think

walk

where

when



___ / 30

Name: _____

Date: _____

Narrative Writing




Write a story about a time in your life.

Handwriting practice lines for narrative writing. The page contains 10 sets of horizontal lines, each consisting of a solid top line, a dashed middle line, and a solid bottom line, providing a guide for letter height and placement.

Name: _____

Date: _____

Short Vowel Word Families



Write three words in each word family.

1. -at family

2. -en family

3. -it family

4. -op family

5. -ug family

_____ / 15

Name: _____




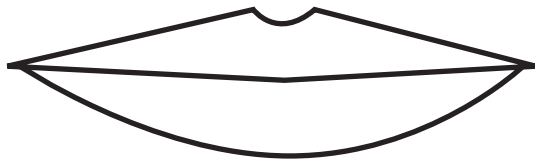




Date: _____

Long/ Short I



Circle the pictures showing words with the long I sound.

Put an X on the pictures showing words with a short I sound.



/ 10

Name: _____


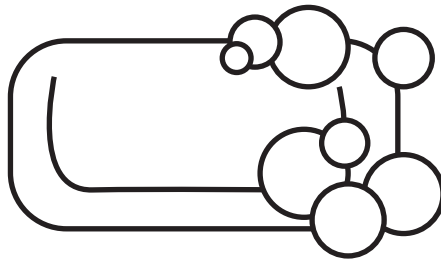
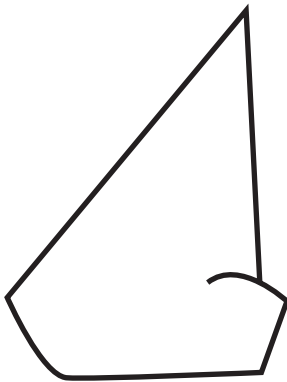

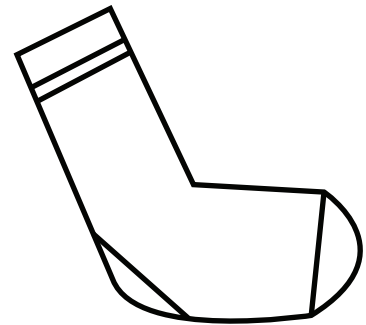

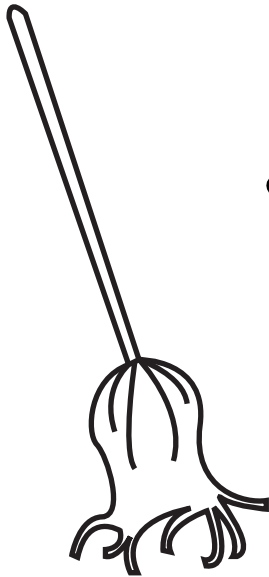



Date: _____

Long/ Short O



Circle the pictures showing words with the long O sound.

Put an X on the pictures showing words with a short O sound.



____ / 10

Name: _____



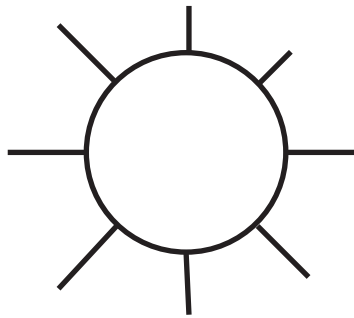
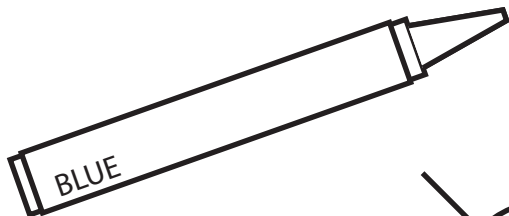
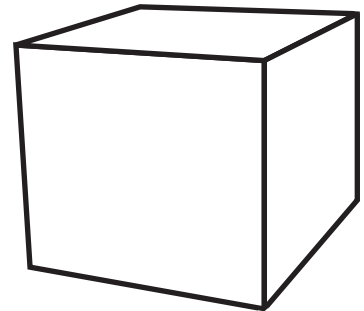
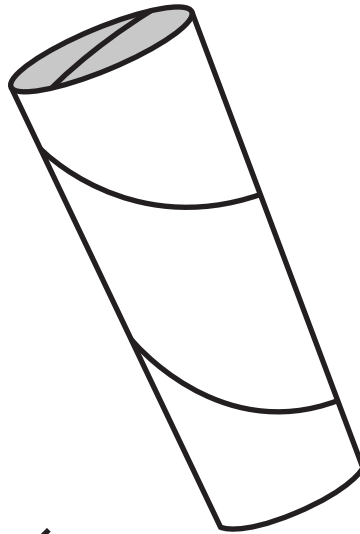
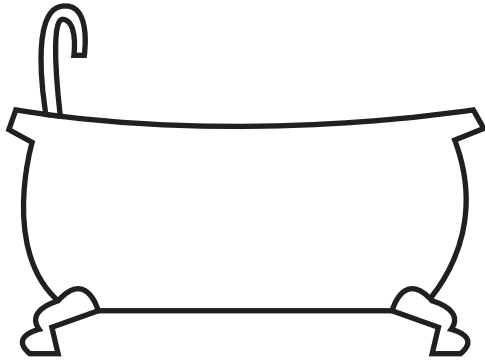


Date: _____

Long/ Short U



Circle the pictures showing words with the long U sound.

Put an X on the pictures showing words with a short U sound.



/ 10

Name: _____

Date: _____

Blends and Digraphs



Point to each word. Circle the words students read correctly.

Crow Chest Then

Block Drum Flag

Swing Straw Track

Whale Smile Sled

Plum Spider Scale



_____ / 15

Name: _____


Date: _____

Informational Writing



Think about a topic you know a lot about. Write about your topic below, using key details and facts.

Handwriting practice lines consisting of solid top and bottom lines with a dashed middle line. There are 10 sets of these lines for writing.



Name: _____

Date: _____

Procedural Writing



Think about something you know how to do or make. Write step-by-step instructions for how to do or make the thing you chose.

Handwriting practice lines consisting of solid top and bottom lines with a dashed middle line. There are 10 sets of these lines for writing instructions.



Name: _____

Date: _____

Sentence Features (Capitalization)



Rewrite the sentences with correct capitalization.

1. maria went to the store.

2. the dog is very fast.

3. where did the people go?

4. i will be there soon.

5. how was your day?



Name: _____

Date: _____

Sentence Features (Punctuation)



Rewrite the sentences with correct end punctuation.


1. I will see you soon

2. How are you feeling

3. Bobby loved to dance

4. Where is the party

5. I'm so excited



Name: _____

Date: _____

Addition to 20



Solve the addition problems. Draw pictures to show your work.

$$4 + 3 =$$

$$15 + 5 =$$

$$7 + 7 =$$


$$1 + 9 =$$

$$11 + 3 =$$

$$12 + 5 =$$

$$6 + 4 =$$

$$8 + 3 =$$



Name: _____

Date: _____

Subtraction to 20



Solve the subtraction problems. Draw pictures to show your work.

$$15 - 2 =$$

$$10 - 5 =$$

$$8 - 4 =$$


$$11 - 6 =$$

$$9 - 2 =$$

$$16 - 3 =$$

$$11 - 3 =$$

$$18 - 10 =$$



≡ Numbers to 100 ≡

Name: _____

Date: _____

Instructions:

Start at 1 and write numbers in each box until you get to the end (or as high as you can count!).

Name: _____

Date: _____

Addition Word Problems



Solve the word problems. Show your work.

1. Noah had 12 books. He got 5 more books. How many books did Noah have in all?
2. Bonnie found 8 rocks on her sidewalk and 7 rocks in her backyard. How many rocks did Bonnie find in all?
3. Edward had 5 toy cars. He got 8 more toy cars. How many toy cars did Edward have in all?
4. Mariela collected 11 feathers. Then she found 3 more feathers. How many feathers did Mariela have in all?
5. LaMonte made 14 cookies. Then he made 5 more cookies. How many cookies did LaMonte have in all?

Name: _____

Date: _____

Subtraction Word Problems



Solve the word problems. Show your work.

1. Ana had 18 apples. She gave 5 away. How many apples did Ana have left?
2. Bernard collected 17 marbles. He lost 11 marbles. How many marbles did Bernard have left?
3. Samuel had 15 pennies. He spent 5 of them. How many pennies did Samuel have left?
4. Nyleah made 11 cookies. She gave away 4 of them. How many cookies did Nyleah have left?
5. Raymond had 9 apples. He ate 3 of them. How many apples did Raymond have left?


Name: _____

Date: _____


Measurement




Use a ruler to measure the three bears below.



Bear A



Bear B



Bear C

Which bear is the tallest? _____


Which bear is the shortest? _____

How tall is each bear? A _____ B _____ C _____

Name: _____

Date: _____

Adding Three Numbers



Solve the problems below. Draw pictures to show your work.

1. $3 + 4 + 3 =$

6. $7 + 4 + 7 =$

2. $6 + 3 + 2 =$

7. $8 + 3 + 4 =$

3. $7 + 1 + 3 =$

8. $9 + 1 + 5 =$

4. $5 + 5 + 4 =$

9. $11 + 1 + 3 =$

5. $2 + 6 + 3 =$

10. $10 + 5 + 2 =$

Name: _____


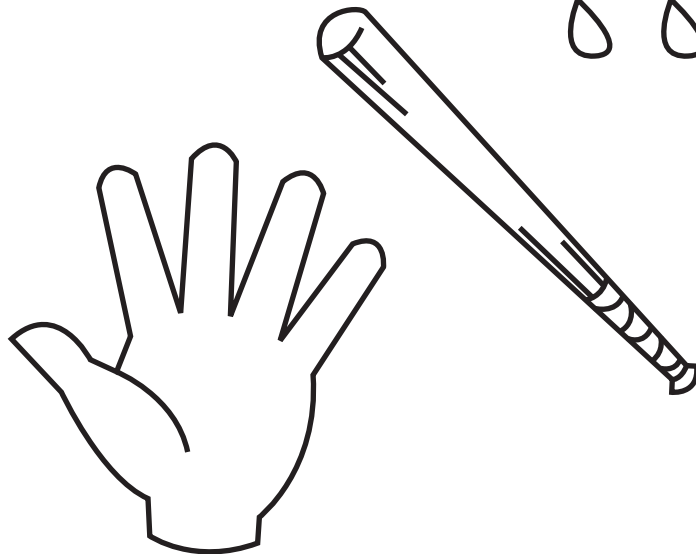



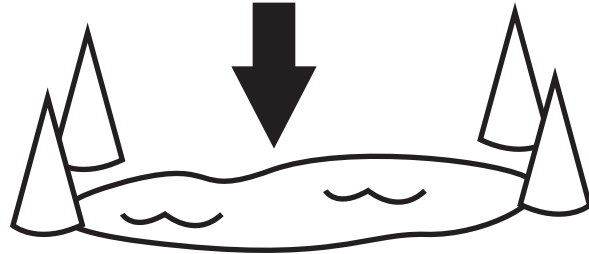



Date: _____

Long/ Short A



Circle the pictures showing words with the long A sound.

Put an X on the pictures showing words with a short A sound.



/ 10

Name: _____




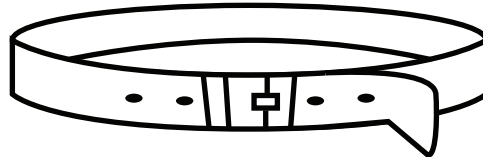





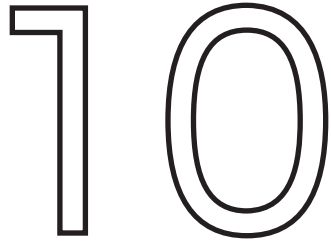
Date: _____

Long/ Short E



Circle the pictures showing words with the long E sound.

Put an X on the pictures showing words with a short E sound.



_____ / 10

Answer Sheets

First Grade Assessments: Fall (end of October to end of December)

- Long/Short I
- Long/Short O
- Long/Short U
- Sentence Features (Capitalization)
- Sentence Features (Punctuation)
- Assessment: Addition to 20
- Assessment: Subtraction to 20
- Addition Word Problems
- Subtraction Word Problems
- Assessment: Adding Three Numbers
- Long/Short A
- Long/Short E

Name: _____


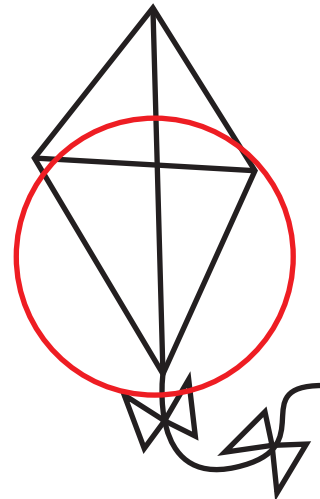





Date: _____

Long/ Short I



Circle the pictures showing words with the long I sound.

Put an X on the pictures showing words with a short I sound.



/ 10

Name: _____

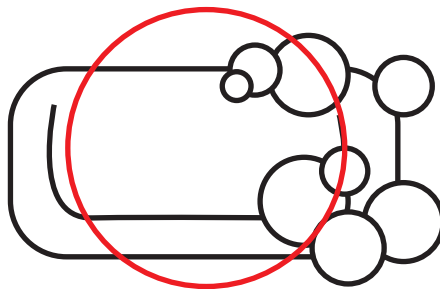
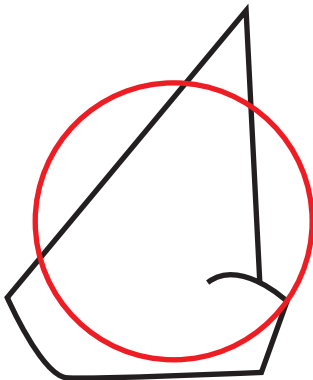



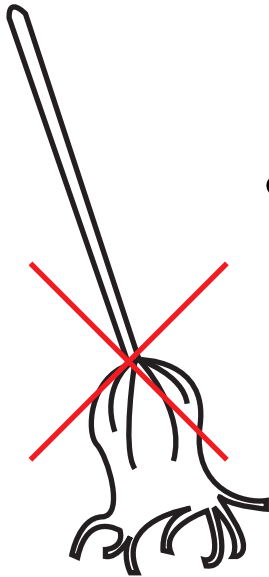
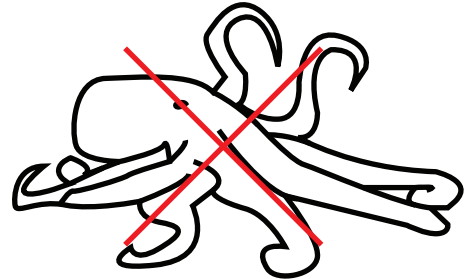
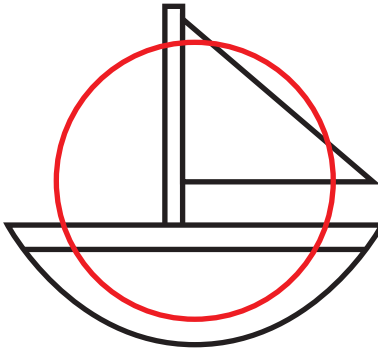
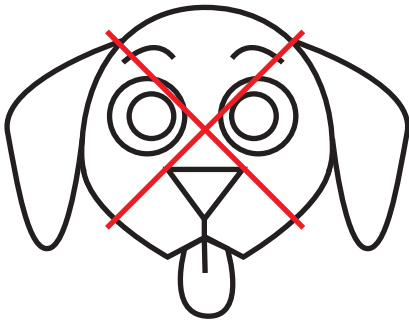
Date: _____

Long/ Short O



Circle the pictures showing words with the long O sound.

Put an X on the pictures showing words with a short O sound.



____ / 10

Name: _____



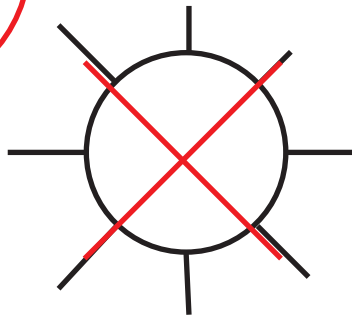
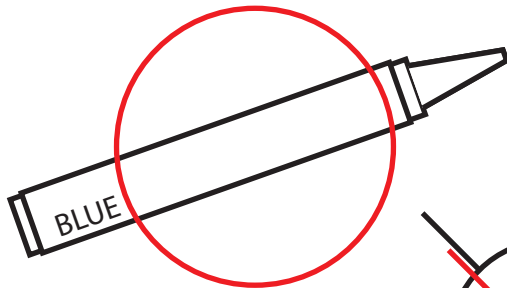
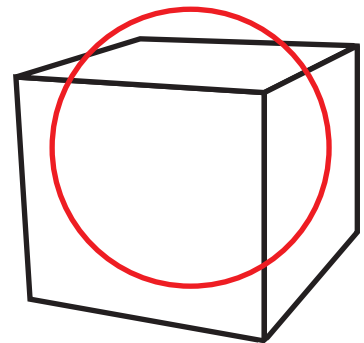
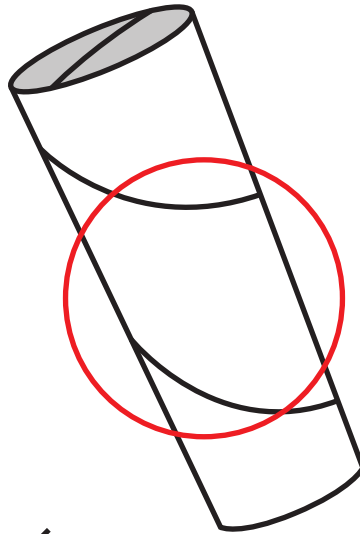
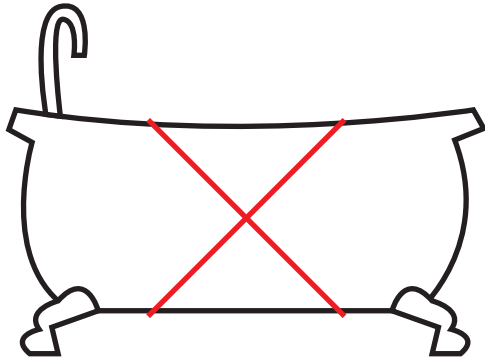


Date: _____

Long/ Short U



Circle the pictures showing words with the long U sound.

Put an X on the pictures showing words with a short U sound.



/ 10

Name: _____

Date: _____

Sentence Features (Capitalization)



Rewrite the sentences with correct capitalization.

1. maria went to the store.

Maria went to the store.

2. the dog is very fast.

The dog was very fast.

3. where did the people go?

Where did the people go?

4. i will be there soon.

I will be there soon.

5. how was your day?

How was your day?



Name: _____

Date: _____

Sentence Features (Punctuation)



Rewrite the sentences with correct end punctuation.

1. I will see you soon

I will see you soon.

2. How are you feeling

How are you feeling?

3. Bobby loved to dance


Bobby loved to dance.

4. Where is the party

Where is the party?

5. I'm so excited

I'm so excited!



Name: _____

Date: _____

Addition to 20



Solve the addition problems. Draw pictures to show your work.

$$4 + 3 = 7$$

$$15 + 5 = 20$$

$$7 + 7 = 14$$


$$1 + 9 = 10$$

$$11 + 3 = 14$$

$$12 + 5 = 17$$

$$6 + 4 = 10$$

$$8 + 3 = 11$$



Name: _____

Date: _____

Subtraction to 20



Solve the subtraction problems. Draw pictures to show your work.

$$15 - 2 = 13$$

$$10 - 5 = 5$$

$$8 - 4 = 4$$


$$11 - 6 = 5$$

$$9 - 2 = 7$$

$$16 - 3 = 13$$

$$11 - 3 = 8$$

$$18 - 10 = 8$$



Name: _____

Date: _____

Addition Word Problems



Solve the word problems. Show your work.

1. Noah had 12 books. He got 5 more books. How many books did Noah have in all?

17

2. Bonnie found 8 rocks on her sidewalk and 7 rocks in her backyard. How many rocks did Bonnie find in all?

15

3. Edward had 5 toy cars. He got 8 more toy cars. How many toy cars did Edward have in all?

13

4. Mariela collected 11 feathers. Then she found 3 more feathers. How many feathers did Mariela have in all?

14

5. LaMonte made 14 cookies. Then he made 5 more cookies. How many cookies did LaMonte have in all?

19

Name: _____

Date: _____

Subtraction Word Problems



Solve the word problems. Show your work.

1. Ana had 18 apples. She gave 5 away. How many apples did Ana have left?

13

2. Bernard collected 17 marbles. He lost 11 marbles. How many marbles did Bernard have left?

6

3. Samuel had 15 pennies. He spent 5 of them. How many pennies did Samuel have left?

10

4. Nyleah made 11 cookies. She gave away 4 of them. How many cookies did Nyleah have left?

7


5. Raymond had 9 apples. He ate 3 of them. How many apples did Raymond have left?

6

Name: _____

Date: _____

Adding Three Numbers



Solve the problems below. Draw pictures to show your work.

1. $3 + 4 + 3 = 10$

6. $7 + 4 + 7 = 18$

2. $6 + 3 + 2 = 11$

7. $8 + 3 + 4 = 15$

3. $7 + 1 + 3 = 11$

8. $9 + 1 + 5 = 15$

4. $5 + 5 + 4 = 14$

9. $11 + 1 + 3 = 15$

5. $2 + 6 + 3 = 11$

10. $10 + 5 + 2 = 17$

Name: _____


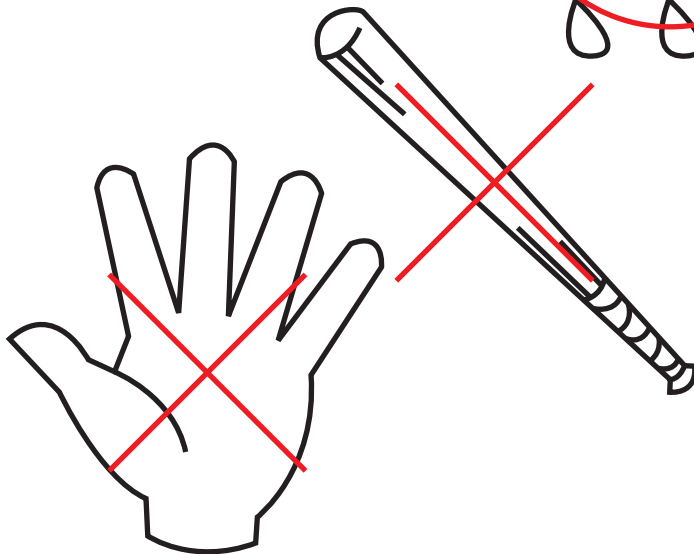
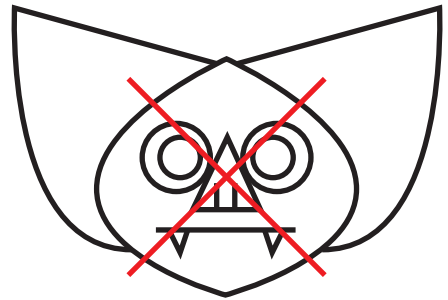


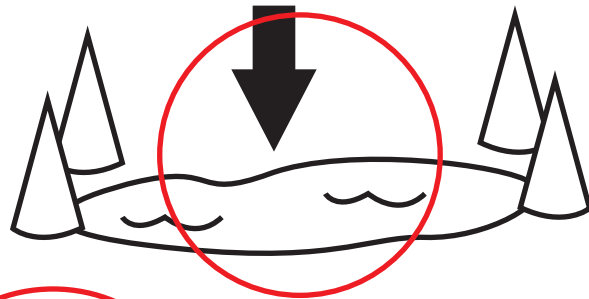
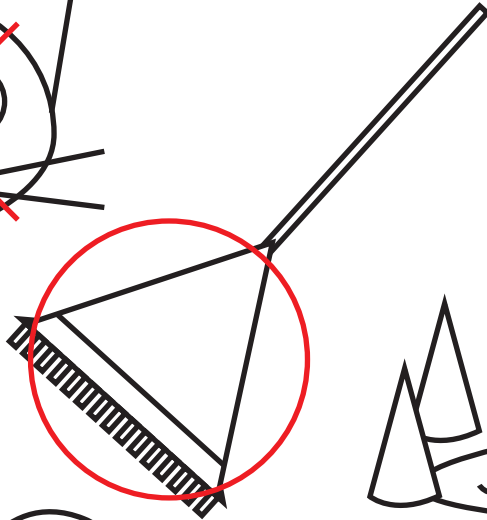

Date: _____

Long/ Short A



Circle the pictures showing words with the long A sound.

Put an X on the pictures showing words with a short A sound.



/ 10

Name: _____


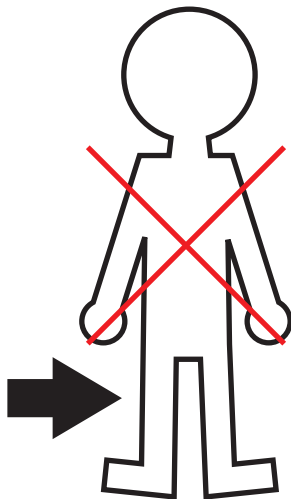

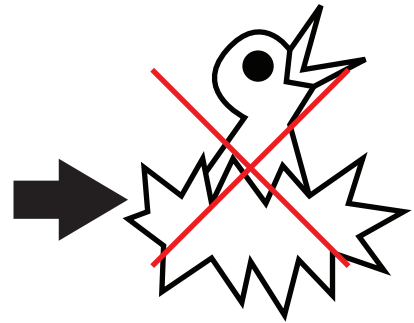
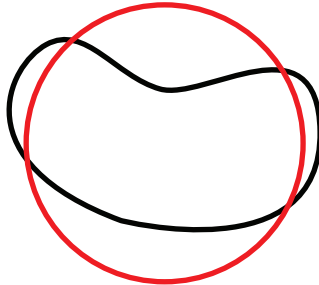
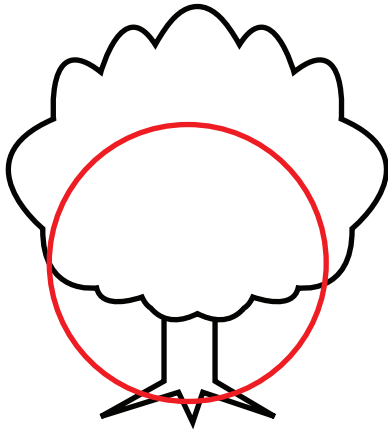


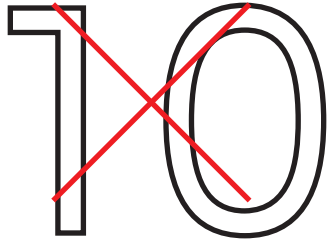
Date: _____

Long/ Short E



Circle the pictures showing words with the long E sound.

Put an X on the pictures showing words with a short E sound.



/ 10
