

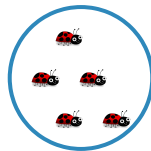
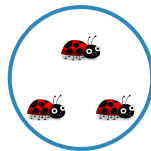


- #1 Count the planes. Now choose the group that shows how you count down by 1.



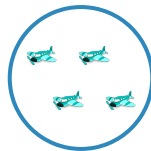


Show your work

- #2 Count the ladybugs. Now choose the group that shows how you count up by 1.



Show your work

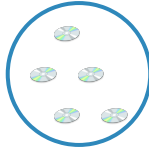
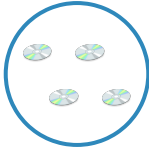
- #3 Count the planes. Now choose the group that shows how you count up by 1.



Show your work

#4




Count the compact discs. Now choose the group that shows how you count down by 1.



Show your work

#5


Count the apples. Now choose the group that shows how you count up by 1.



Show your work



#6

Count the trains. Now choose the group that shows how you count down by 1.






Show your work

- #7 Count the cell phones. Now choose the group that shows how you count down by 1.



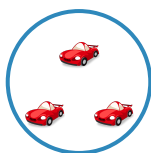
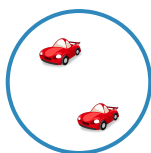

Show your work

- #8 Count the oranges. Now choose the group that shows how you count up by 1.



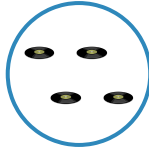
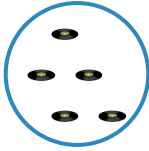
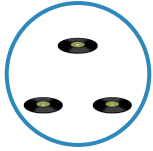
Show your work

- #9 Count the sports cars. Now choose the group that shows how you count down by 1.




Show your work

- #10 Count the records. Now choose the group that shows how you count down by 1.






Show your work

- #11 Count the ants. Now choose the group that shows how you count down by 1.



Show your work

- #12 Count the moons. Now choose the group that shows how you count down by 1.



Show your work

Question	Answer
#1	choice 1
#2	choice 2
#3	choice 3
#4	choice 2
#5	choice 3
#6	choice 2
#7	choice 3
#8	choice 3
#9	choice 3
#10	choice 1
#11	choice 3
#12	choice 3