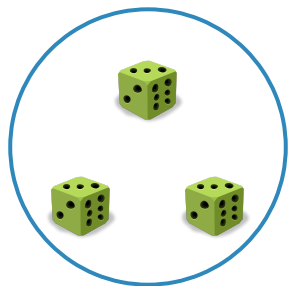


#1

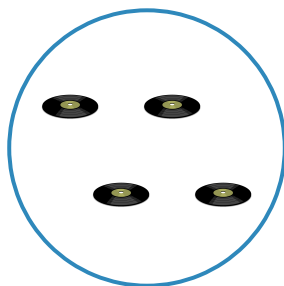
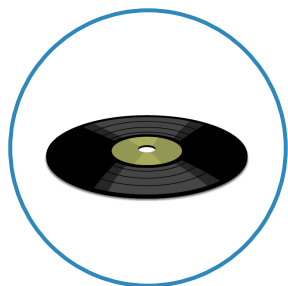
Which group has fewer dice?



Show your work

#2

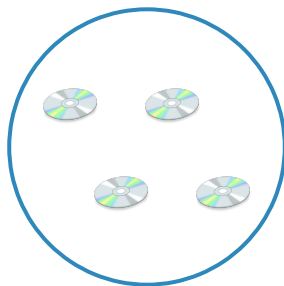
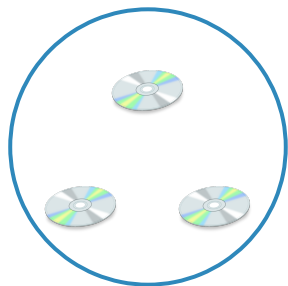
Which group has fewer records?



Show your work

#3


Which group has fewer compact discs?



Show your work

#4


Which group has more skateboards?



Show your work

#5


Which group has fewer dolls?



Show your work

#6


Which group has more whistles?



Show your work

#7

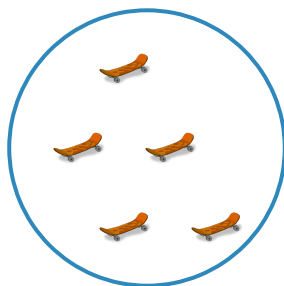
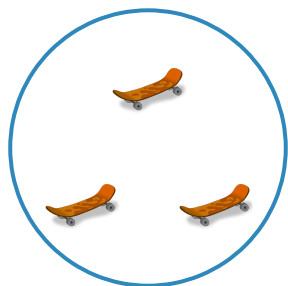
Which group has fewer whistles?



Show your work

#8



Which group has more skateboards?



Show your work

#9



Which group has more dolls?



Show your work

#10

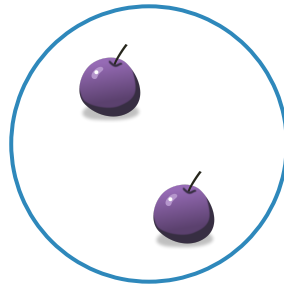

Which group has fewer hats?



Show your work

#11



Which group has fewer grapes?



Show your work

#12

Which group has more apples?



Show your work

Question	Answer
#1	choice 2
#2	choice 1
#3	choice 1
#4	choice 1
#5	choice 1
#6	choice 1
#7	choice 1
#8	choice 2
#9	choice 1
#10	choice 2
#11	choice 2
#12	choice 2