




#1

Which holds more?

☐☐

Show your work

#2

Which holds less?

☐☐

Show your work

#3

Which holds less?


☐☐

Show your work



#4

Which holds more?

☐☐

Show your work

#5



Which holds more?

☐☐

Show your work

#6

Which holds more?


☐☐

Show your work



#7



Which holds less?

☐☐

Show your work

#8


Which holds more?

☐☐

Show your work

#9

Which holds less?

☐☐

Show your work



#10



Which holds more?

☐☐

Show your work

#11



Which holds more?

☐☐

Show your work

#12

Which holds less?

☐☐

Show your work



Question	Answer
#1	choice 2
#2	choice 2
#3	choice 2
#4	choice 2
#5	choice 1
#6	choice 2
#7	choice 1
#8	choice 1
#9	choice 1
#10	choice 1
#11	choice 2
#12	choice 1