




#1


Which holds less?



Show your work

#2


Which holds more?



Show your work

#3

Which holds more?





Show your work



#4

Which holds less?

☐☐

Show your work

#5


Which holds less?

☐☐

Show your work

#6

Which holds more?

☐☐

Show your work



#7

Which holds more?

☐☐

Show your work

#8

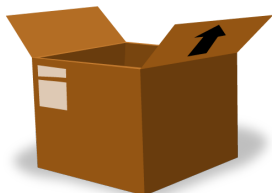
Which holds more?

☐☐

Show your work

#9

Which holds more?



☐☐

Show your work



#10



Which holds more?

☐☐

Show your work

#11


Which holds less?

☐☐

Show your work

#12

Which holds less?

☐☐

Show your work



Question	Answer
#1	choice 2
#2	choice 1
#3	choice 2
#4	choice 2
#5	choice 2
#6	choice 1
#7	choice 2
#8	choice 1
#9	choice 1
#10	choice 2
#11	choice 1
#12	choice 1