





#1


Which of the following objects is a circle?



Show your work

#2



Which of the following objects is a circle?



Show your work

#3

Which of the following objects is a star?






Show your work



#4


Which of the following objects is a rectangle?



Show your work

#5




Which of the following objects is a triangle?



Show your work

#6

Which of the following objects is a rectangle?




Show your work



#7



Which of the following objects is a star?



Show your work

#8




Which of the following objects is a rectangle?



Show your work

#9

Which of the following objects is a star?




Show your work



#10



Which of the following objects is a triangle?



Show your work

#11


Which of the following objects is a circle?



Show your work

#12

Which of the following objects is a square?



Show your work



Question	Answer
#1	choice 2
#2	choice 2
#3	choice 1
#4	choice 2
#5	choice 1
#6	choice 2
#7	choice 3
#8	choice 1
#9	choice 2
#10	choice 3
#11	choice 3
#12	choice 2