





#1




Which of the following objects is a hexagon?



Show your work

#2



Which of the following objects is a pentagon?



Show your work

#3

Which of the following objects is a hexagon?






Show your work



#4



Which of the following objects is a pentagon?



Show your work

#5



Which of the following objects is a hexagon?



Show your work

#6

Which of the following objects is a triangle?





Show your work



#7




Which of the following objects is a pentagon?



Show your work

#8



Which of the following objects is a pentagon?



Show your work

#9

Which of the following objects is a star?




Show your work



#10



Which of the following objects is a hexagon?



Show your work

#11




Which of the following objects is a hexagon?



Show your work

#12

Which of the following objects is a star?



Show your work



Question	Answer
#1	choice 3
#2	choice 2
#3	choice 2
#4	choice 1
#5	choice 1
#6	choice 3
#7	choice 3
#8	choice 3
#9	choice 3
#10	choice 2
#11	choice 3
#12	choice 2