



#1


How many sides does this shape have?

☐ 3☐ 6☐ 1☐ 5

Show your work

#2

How many corners does this shape have?

☐ 1☐ 6☐ 4☐ 5

Show your work

#3

How many corners does this shape have?

☐ 6☐ 4☐ 5☐ 7

Show your work



#4

How many sides does this shape have?

☐ 6☐ 3☐ 4☐ 2

Show your work

#5


How many corners does this shape have?

☐ 6☐ 2☐ 3☐ 1

Show your work

#6

How many sides does this shape have?


☐ 4☐ 5☐ 3☐ 1

Show your work



#7

How many corners does this shape have?

☐ 4☐ 5☐ 2☐ 1

Show your work

#8

How many corners does this shape have?

☐ 4☐ 6☐ 5☐ 1

Show your work

#9

How many corners does this shape have?

☐ 3☐ 6☐ 1☐ 0

Show your work



#10

How many corners does this shape have?

☐ 0☐ 2☐ 3☐ 6

Show your work

#11

How many corners does this shape have?

☐ 3☐ 2☐ 5☐ 4

Show your work

#12

How many corners does this shape have?

☐ 3☐ 5☐ 4☐ 7

Show your work



Question	Answer
#1	3
#2	4
#3	4
#4	3
#5	3
#6	4
#7	4
#8	4
#9	3
#10	3
#11	4
#12	4