



#1



Which picture shows $2 + 1 = 3$?


☐

☐

Show your work

#2



Which picture shows $4 + 1 = 5$?


☐

☐

Show your work

#3



Which picture shows $4 + 1 = 5$?


☐

☐

Show your work

#4



Which picture shows $2 + 1 = 3$?

☐☐

Show your work

#5



Which picture shows $1 + 3 = 4$?

☐☐

Show your work

#6



Which picture shows $1 + 1 = 2$?

☐☐

Show your work

#7



Which picture shows $4 + 1 = 5$?


☐

☐

Show your work

#8



Which picture shows $4 + 1 = 5$?


☐

☐

Show your work

#9



Which picture shows $4 + 1 = 5$?


☐

☐

Show your work

#10



Which picture shows $2 + 1 = 3$?

☐☐

Show your work

#11



Which picture shows $1 + 3 = 4$?

☐☐

Show your work

#12

Which picture shows $2 + 2 = 4$?

☐☐

Show your work

Question	Answer
#1	choice 1
#2	choice 2
#3	choice 1
#4	choice 2
#5	choice 2
#6	choice 1
#7	choice 2
#8	choice 1
#9	choice 2
#10	choice 2
#11	choice 2
#12	choice 1