

#1

Add



☐ 6

☐ 0


☐ 4

☐ 3

Show your work

#2

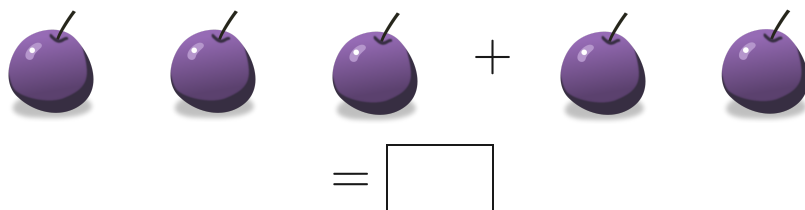
Add



Show your work

#3

Add



Show your work

#4

Add



☐ 0

☐ 3

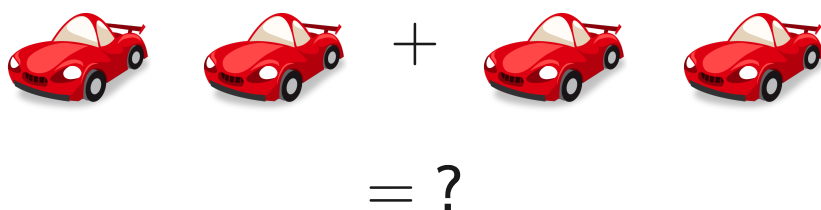
☐ 5

☐ 2

Show your work

#5

Add



☐ 5

☐ 4


☐ 3

☐ 1

Show your work

#6


Add



Show your work

#7

Add



= ?

☐ 8

☐ 6

☐ 5

☐ 4

Show your work

#8

Add



=

Show your work

#9

Add



=

Show your work

#10

Add



= ?

☐ 5

☐ 8

☐ 3

☐ 4

Show your work

#11

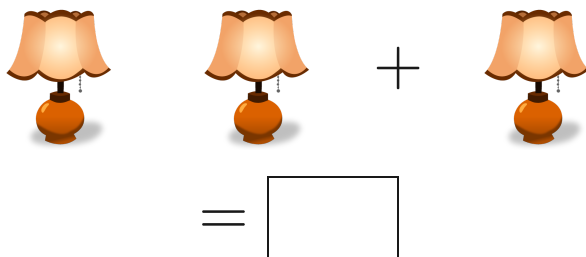
Add



Show your work

#12

Add



Show your work

Question	Answer
#1	3
#2	5
#3	5
#4	2
#5	4
#6	3
#7	5
#8	3
#9	5
#10	5
#11	2
#12	3