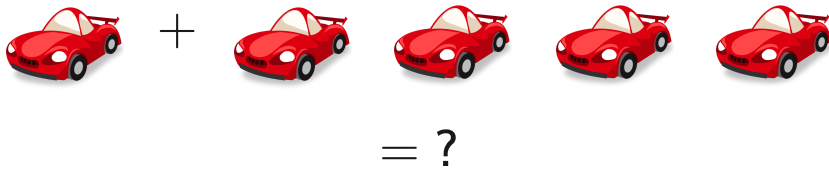


#1

Add



☐ 5

☐ 8

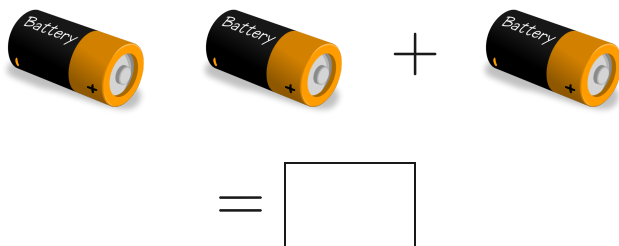
☐ 3

☐ 4

Show your work

#2

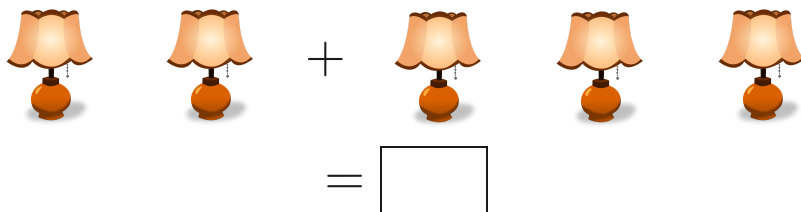
Add



Show your work

#3

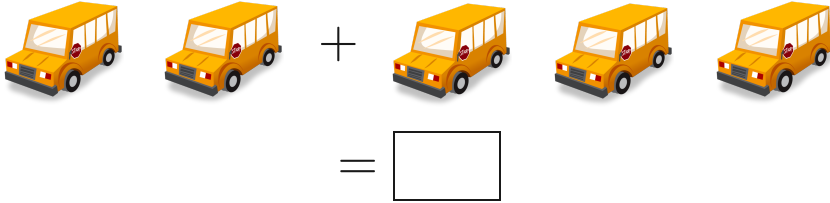
Add



Show your work

#4

Add



Show your work

#5

Add



☐ 0

☐ 2

☐ 4

☐ 3

Show your work

#6

Add



Show your work

#7

Add



= ?

☐ 6

☐ 5

☐ 7

☐ 8

Show your work

#8

Add




=

Show your work

#9

Add



= ?

☐ 7

☐ 2


☐ 5

☐ 4

Show your work

#10

Add



☐ 1

☐ 2

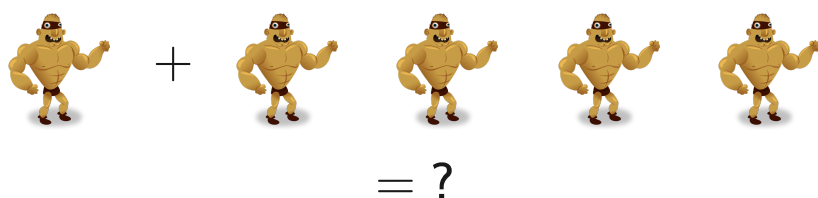
☐ 4

☐ 5

Show your work

#11

Add



☐ 8

☐ 5

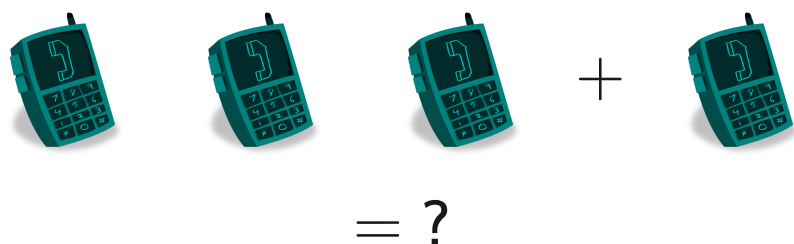
☐ 4

☐ 6

Show your work

#12

Add



☐ 1

☐ 6

☐ 4

☐ 5

Show your work

Question	Answer
#1	5
#2	3
#3	5
#4	5
#5	3
#6	2
#7	5
#8	5
#9	5
#10	2
#11	5
#12	4