


#1


Subtract



Show your work

#2

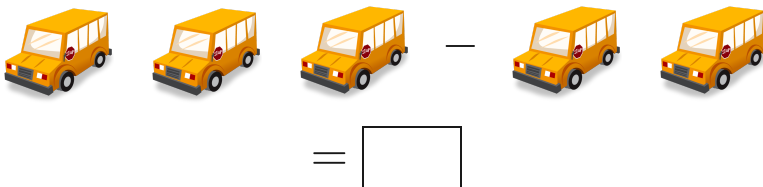
Subtract



Show your work

#3

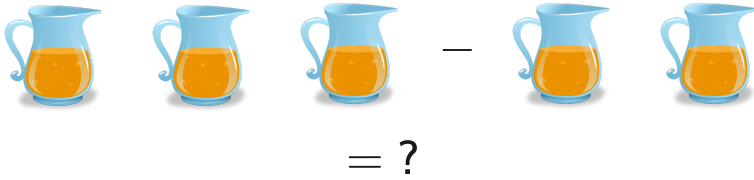
Subtract



Show your work

#4

Subtract



☐ 3

☐ 0

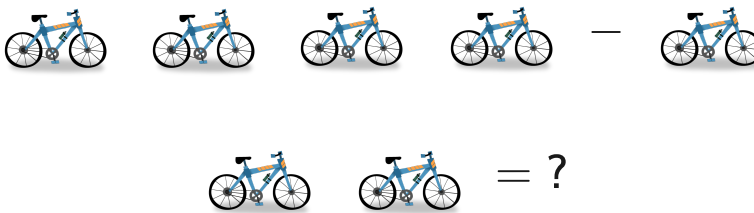
☐ 1

☐ 4

Show your work

#5

Subtract



☐ 3

☐ 0

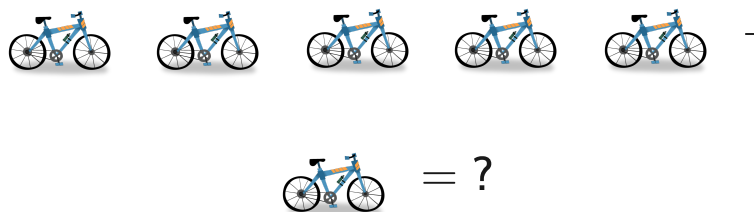
☐ 1

☐ 4

Show your work

#6

Subtract



☐ 4

☐ 2

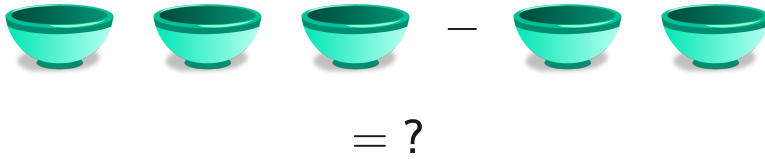
☐ 1

☐ 7

Show your work

#7

Subtract



☐ 4

☐ 2


☐ 1

☐ 0

Show your work

#8

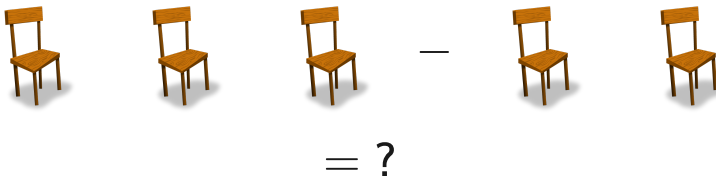
Subtract



Show your work

#9

Subtract



☐ 4

☐ 0

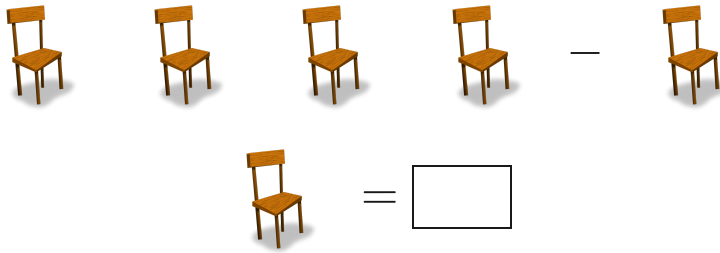
☐ 1

☐ 3

Show your work

#10

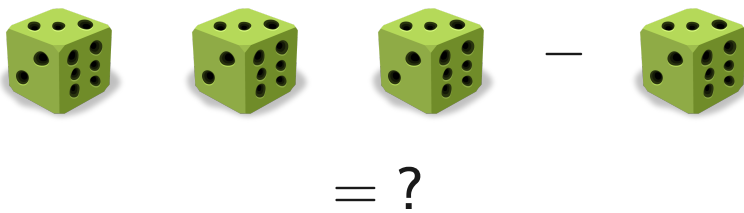
Subtract



Show your work

#11

Subtract



☐ 5

☐ 0


☐ 2

☐ 1

Show your work

#12

Subtract



Show your work

Question	Answer
#1	1
#2	1
#3	1
#4	1
#5	1
#6	4
#7	1
#8	1
#9	1
#10	2
#11	2
#12	1