


#1

Subtract



Show your work

#2

Subtract



☐ 3

☐ 1

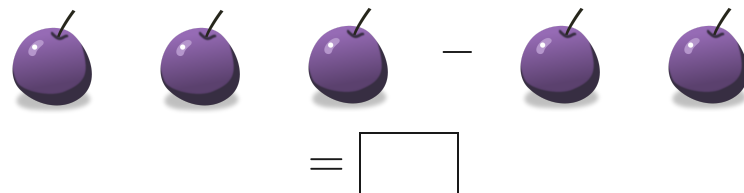
☐ 2

☐ 4

Show your work

#3

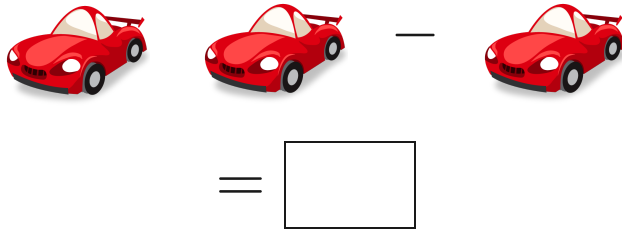
Subtract



Show your work

#4


Subtract



Show your work

#5

Subtract



☐ 1

☐ 5


☐ 4

☐ 2

Show your work

#6

Subtract



☐ 1

☐ 2


☐ 4

☐ 7

Show your work

#7


Subtract



Show your work

#8

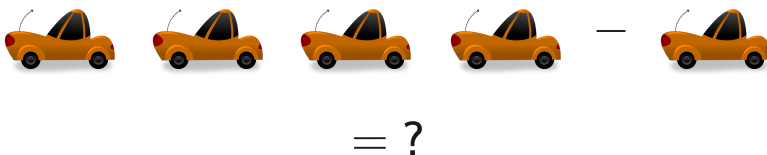
Subtract



Show your work

#9

Subtract



☐ 5

☐ 2

☐ 3

☐ 0

Show your work

#10

Subtract



= ?

☐ 0

☐ 5

☐ 2

☐ 3

Show your work

#11

Subtract



= ?

☐ 0

☐ 3


☐ 2

☐ 5

Show your work

#12

Subtract



=

Show your work

Question	Answer
#1	1
#2	1
#3	1
#4	1
#5	2
#6	4
#7	2
#8	2
#9	3
#10	2
#11	2
#12	1