


Greater Than, Less Than, Equal To

Name: _____

Draw the correct sign for greater than, less than, or equal to.



< > =

3 **5**


7 **1**

9 **2**

4 **8**

6 **7**

3 **3**




2 **9**

Greater Than, Less Than, Equal To

Name: _____

Draw the correct sign for greater than, less than, or equal to.



< > =

3 **5**


7 **1**

9 **2**

4 **8**

6 **7**

3 **3**




2 **9**

Greater Than, Less Than, Equal To

Name: _____

Draw the correct sign for greater than, less than, or equal to.



< > =

2 **1**


7 **7**

4 **6**

3 **9**

5 **2**

10 **10**




8 **6**

Greater Than, Less Than, Equal To

Name: _____

Draw the correct sign for greater than, less than, or equal to.



< > =

7 9


1 1

10 6

3 5

2 8

4 4




9 10

Greater Than, Less Than, Equal To

Name: _____

Draw the correct sign for greater than, less than, or equal to.



< > =

8 **5**


6 **2**

1 **2**

3 **9**

10 **7**

4 **3**




5 **9**

Greater Than, Less Than, Equal To

Name: _____

Draw the correct sign for greater than, less than, or equal to.



< > =

15 **13**


17 **11**

19 **12**

14 **18**

16 **17**

13 **13**




12 **19**

Greater Than, Less Than, Equal To

Name: _____

Draw the correct sign for greater than, less than, or equal to.



< > =

18 17


16 19

20 20

13 17

15 14

11 16




20 19

Greater Than, Less Than, Equal To

Name: _____

Draw the correct sign for greater than, less than, or equal to.



< > =

12 **15**


14 **14**

11 **13**

18 **13**

17 **16**

19 **18**




15 **17**

Greater Than, Less Than, Equal To

Name: _____

Draw the correct sign for greater than, less than, or equal to.



< > =

$15 \square 10$


$7 \square 17$

$8 \square 16$

$14 \square 9$

$13 \square 7$

$3 \square 18$




$20 \square 10$

Greater Than, Less Than, Equal To

Name: _____

Draw the correct sign for greater than, less than, or equal to.



< > =

6 **5**

17 **19**

14 **18**

3 **8**

16 **11**

2 **4**

12 **6**

