

Math: Everything in its

Place Value

2nd
GRADE

193

194

198

199



Table of Contents

Math: Everything in its Place Value

Math Counting #1
Math Counting #2
Dot-to-Dot Zoo #1
Dot-to-Dot Zoo #2
Dot-to-Dot Zoo #3
Odd and Even Numbers
Jellybean Numbers
Cupcake Match
Lemons and Limes
Comparing 2 Digit Numbers
Comparing 3 Digit Numbers
Color the Missing Number: "Less Than"
Shopping Math: Furniture
What am I?
Ordinal or Cardinal?

Certificate of Completion

Want more workbooks? Join Education.com Plus to save time and money.
<http://www.education.com/education-plus/>

2nd Grade Math Counting

Count from 100 to 150 by filling in the missing numbers in the balloons below!

Start here! →

100	101			104	105	
	108		110			114
	116			119		121
	124	125			128	
131	132			135	136	
	140			143		145
	148					




Excellent!






2nd Grade Math

Counting

Count from 150 to 200 by filling in the missing numbers inside the flowers below!



Start here!

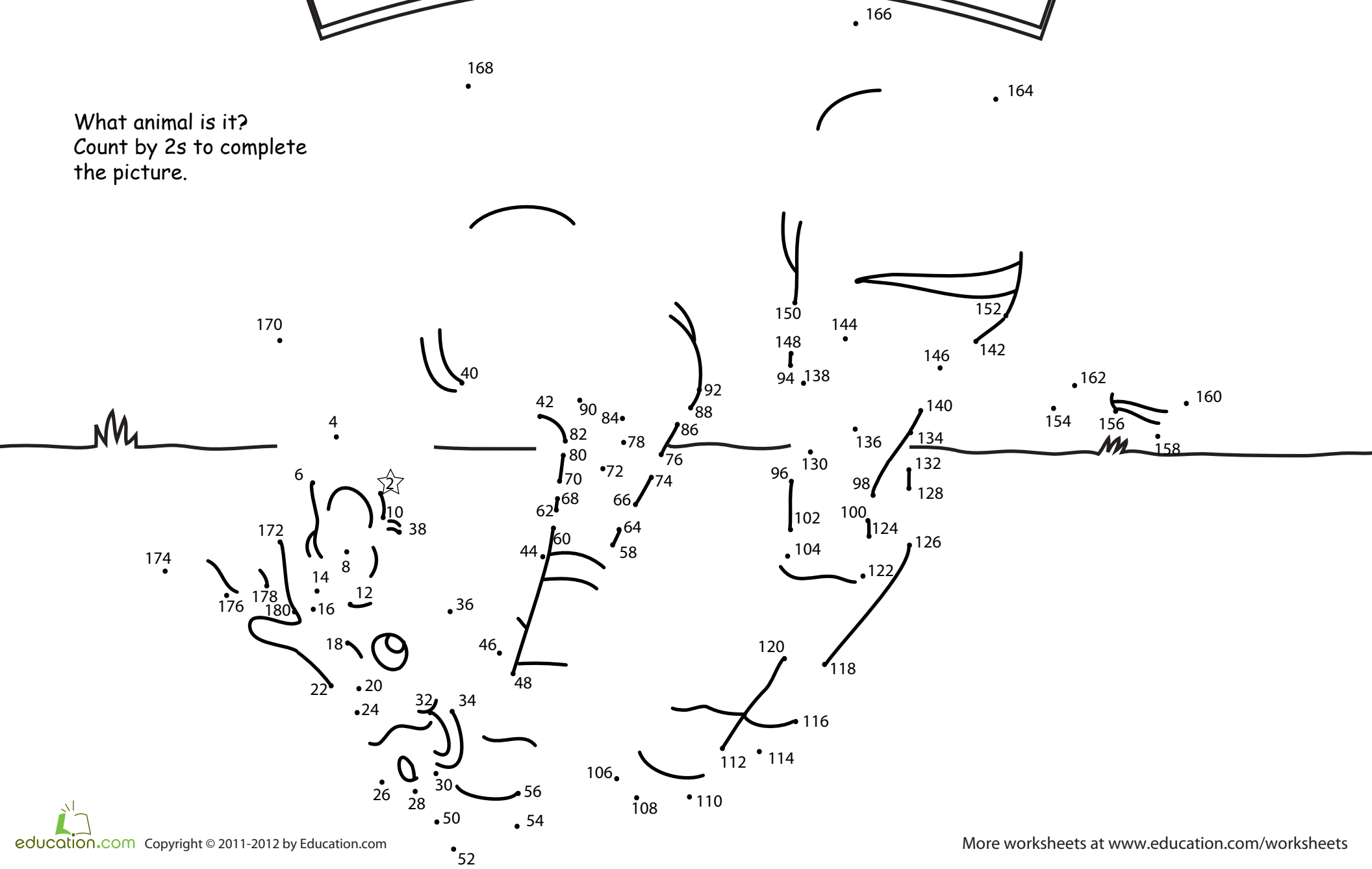


Nice job!



DOT-TO-DOT ZOO

What animal is it?
Count by 2s to complete the picture.

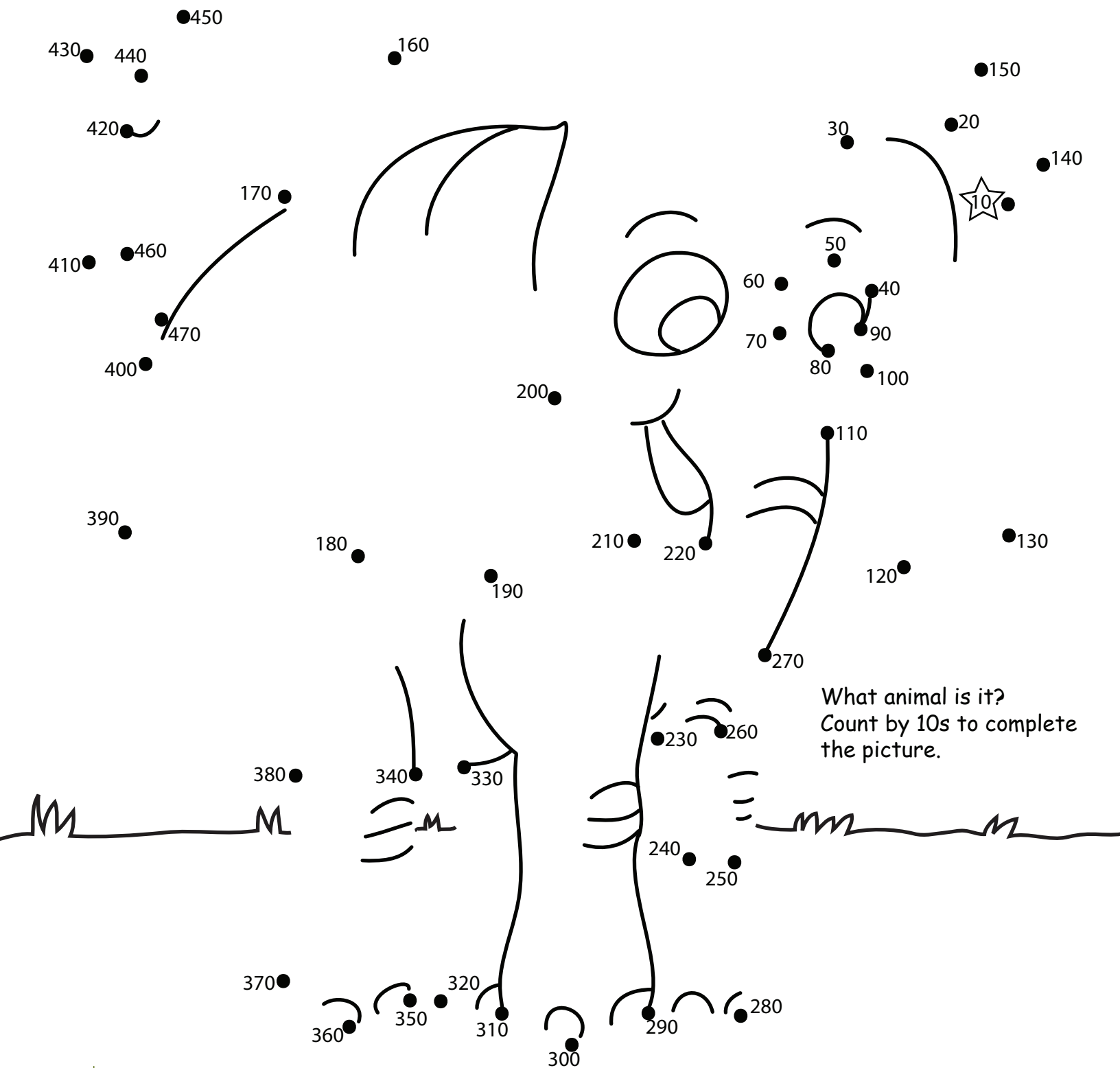


DOT-TO-DOT ZOO

What animal is it?
Count by 2s to complete the picture.




DOT-TO-DOT ZOO



2nd Grade Math

Odd and Even Numbers

This caterpillar only likes to eat odd numbers. Find all the odd numbers written on this page and then write them in the circles.



Jellybean Numbers

Write the numbers in the jellybean.

sixty-eight

thirty-five

one hundred fifty-seven

six hundred thirteen

five hundred twenty-five

seven hundred nine

eight hundred ninety-four

seven hundred nine

one thousand four hundred eighteen

Cupcake Match

Draw a line to match the number to the words.



1 ten and 2 ones



4 hundreds, 2 tens, and 3 ones



1 thousand, 8 hundreds,
5 tens, and 4 ones



2 tens and 4 ones



2 hundreds, 1 ten, and 5 ones



1 thousand, 4 hundreds,
8 tens, and 7 ones



3 hundreds, 1 ten, and 6 ones

Lemons and Limes

Draw a line to match the number to the words.



2,354

3 hundreds and 5 ones



305

6 tens and 7 ones



67

2 thousands, 3 hundreds,
5 tens, and 4 ones



598

5 thousands, 6 hundreds,
2 tens, and 3 ones



5,623

5 hundreds, 9 tens, and 8 ones

Write out the number **564** using words:

Comparing Digit Numbers

Write the numbers in the boxes from the least to the greatest value. See the example below.

10, 15, 11

$$\boxed{10} < \boxed{11} < \boxed{15}$$

20, 32, 28

$$\boxed{} < \boxed{} < \boxed{}$$

40, 27, 52

$$\boxed{} < \boxed{} < \boxed{}$$

68, 29, 34

$$\boxed{} < \boxed{} < \boxed{}$$

49, 65, 48

$$\boxed{} < \boxed{} < \boxed{}$$

34, 47, 98, 73

$$\boxed{} < \boxed{} < \boxed{} < \boxed{}$$

75, 38, 61, 46, 93

$$\boxed{} < \boxed{} < \boxed{} < \boxed{} < \boxed{}$$

Comparing 3 Digit Numbers

Write the numbers in the boxes from the greatest to the least value. See the example below.

120, 115, 131

$$\boxed{131} > \boxed{120} > \boxed{115}$$

543, 345, 435

$$\boxed{} > \boxed{} > \boxed{}$$

627, 982, 166

$$\boxed{} > \boxed{} > \boxed{}$$

705, 175, 510

$$\boxed{} > \boxed{} > \boxed{}$$

433, 400, 551, 431, 902

$$\boxed{} > \boxed{} > \boxed{} > \boxed{} > \boxed{}$$

887, 604, 317, 802, 714

$$\boxed{} > \boxed{} > \boxed{} > \boxed{} > \boxed{}$$

Color the Missing Number: "Less than"

Color the number that make the equation correct. See the example below.

(<) means "Less than"

$$9 + ? < 12$$

3 2 5

$$13 + ? < 20$$

6 7 8

$$14 + ? < 21$$

7 8 6

$$33 + ? < 44$$

10 11 12

$$28 + ? < 33$$

5 6 7

$$53 + ? < 62$$

12 10 7

$$70 + ? < 84$$

12 14 16 18

$$65 + ? < 97$$


34 32 36 30

Shopping Math: Furniture


Help Jenny decide what furniture to buy. Look at the prices in each category and circle the cheaper ones.

Lamps

◦ \$68



◦ \$86

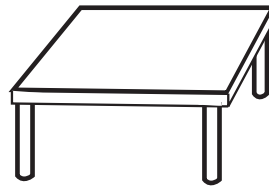


Tables

◦ \$142




◦ \$124

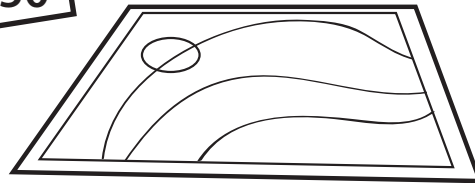


Rugs

◦ \$105



◦ \$150




Chairs

◦ \$136

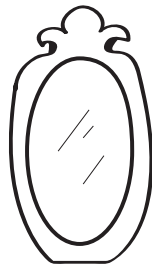


◦ \$163




Mirrors

◦ \$76



◦ \$67



Challenge!

Jenny only has \$230 to spend on furniture.
Color in the items she can buy.

What am I?

Write the correct number using clues given.



I have 2 in the ones place and 4 in the tens place. I am

42

I have 7 in the ones place and 3 in the tens place. I am

I have 5 in the ones place. I am more than 20 but less than 30. What am I?

I have 3 in the ones place. My value is greater than 45 but less than 57. What am I?

I have 6 in the hundreds place, 4 in the tens place and 7 in the ones place. What am I?

I have 5 in the ones place and 8 in the tens place. I am greater than 600 but less than 800. What am I?

I have 3 in the ones place and 7 in the tens place. I am greater than 535 but less than 630. What am I?

Ordinal Or Cardinal?

Write "O" if the number in the sentence is an ordinal number.

Ordinal numbers look like this: 1st, 2nd, 3rd, 4th, etc.

Write "C" if the number in the sentence is a cardinal number.

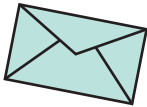
Cardinal numbers look like this: 1, 2, 3, 4, 5 etc.

**42nd**

My school is located on 42nd street and Park Avenue.



Jenny bought 3 pairs of sandals.



Mitch delivered 20 packages and 56 letters yesterday.



April finished in 3rd place in last year's marathon.



Yum! This is the 5th hamburger I had this week!



Jacky cut 8 beautiful flowers from her garden.



Susie went to see the 4th of July fireworks in Chicago.



Great job!

is an Education.com math superstar

