

Subtraction:

Facts Practice

1st
GRADE

Draw an **X** to pop all the balloons that equal 3





Table of Contents

Subtraction: Facts Practice

Coloring Subtraction
Subtraction Surprise! #1
Find the Difference
Subtraction Surprise! #2
Fishing for Answers #1
Simple Subtraction: Two-Digit Subtraction #1
Fishing for Answers #2
Baseball Subtraction
Odd or Even? Practice Subtraction
Basketball Subtraction
Balloon Buster
Simple Subtraction: Two-Digit Subtraction #2
Problem Solving
Math-Go-Round: Subtraction

Certificate of Completion

Want more workbooks? Join Education.com Plus to save time and money.
<http://www.education.com/education-plus/>

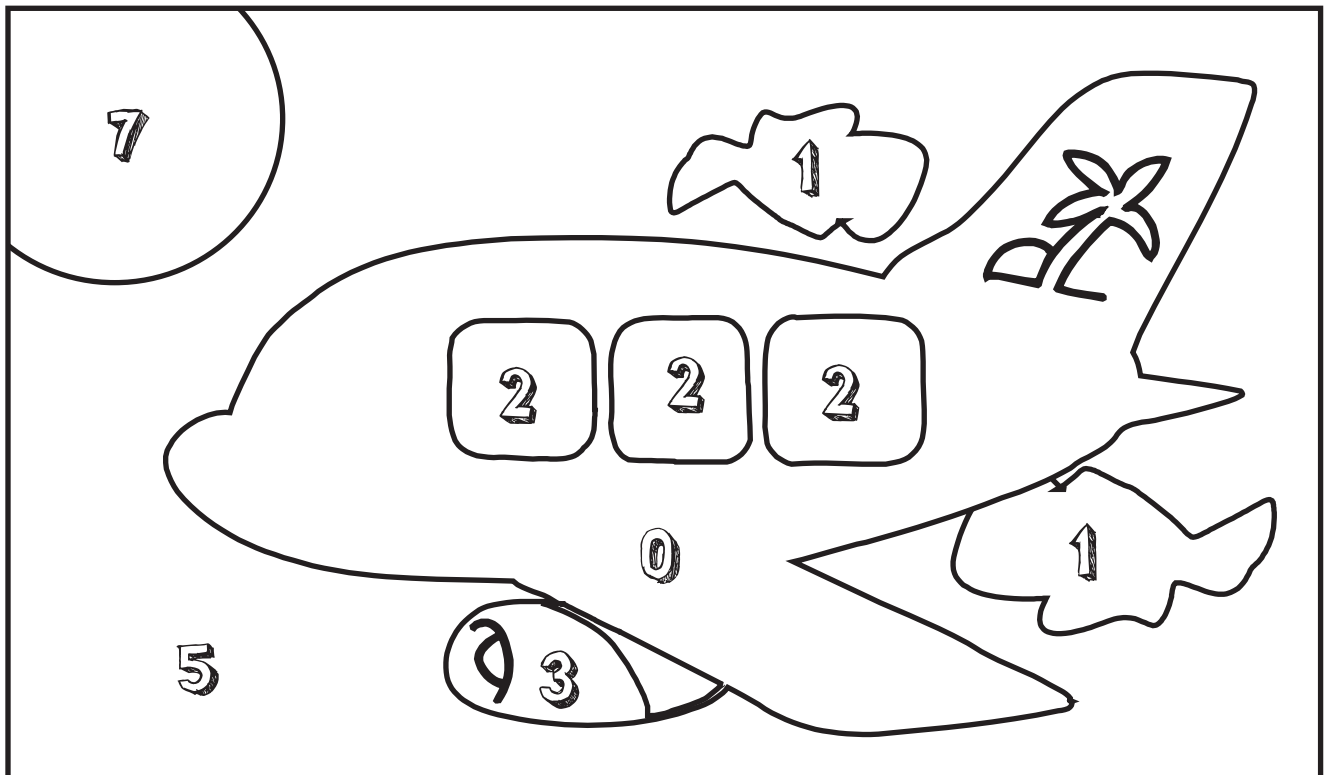
Coloring Subtraction

Find the answer to each problem, then use the numbers to color the picture.

$8 - 1 = \underline{\quad} \text{ orange} \quad 7 - 6 = \underline{\quad} \text{ gray}$

$9 - 4 = \underline{\quad} \text{ blue} \quad 6 - 6 = \underline{\quad} \text{ red}$

$3 - 1 = \underline{\quad} \text{ yellow} \quad 8 - 5 = \underline{\quad} \text{ black}$



Subtraction Surprise! #24



Subtract the numbers in each box. Write the answer in the blank space. Then, show the answer in tally marks.

See example 1.

First Grade

Example 1.

$$4 - 2 = \underline{2}$$

||

2.

$$7 - 3 = \underline{\quad}$$

3.

$$5 - 3 = \underline{\quad}$$

4.

$$3 - 3 = \underline{\quad}$$

5.

$$8 - 6 = \underline{\quad}$$

6.

$$6 - 3 = \underline{\quad}$$

7.

$$5 - 4 = \underline{\quad}$$

8.

$$9 - 4 = \underline{\quad}$$



Find the Difference

Subtract to find the answer to each problem. Then use the letters next to each equation to find out the answer to the question.

$$\begin{array}{r} 10 \\ - 2 \\ \hline \end{array} \quad \mathbf{H}$$

$$\begin{array}{r} 4 \\ - 3 \\ \hline \end{array} \quad \mathbf{B}$$

$$\begin{array}{r} 9 \\ - 7 \\ \hline \end{array} \quad \mathbf{R}$$

$$\begin{array}{r} 8 \\ - 5 \\ \hline \end{array} \quad \mathbf{F}$$

$$\begin{array}{r} 9 \\ - 4 \\ \hline \end{array} \quad \mathbf{M}$$

$$\begin{array}{r} 3 \\ - 2 \\ \hline \end{array} \quad \mathbf{V}$$

$$\begin{array}{r} 6 \\ - 1 \\ \hline \end{array} \quad \mathbf{K}$$

$$\begin{array}{r} 5 \\ - 3 \\ \hline \end{array} \quad \mathbf{P}$$

$$\begin{array}{r} 10 \\ - 6 \\ \hline \end{array} \quad \mathbf{T}$$

$$\begin{array}{r} 9 \\ - 2 \\ \hline \end{array} \quad \mathbf{E}$$


$$\begin{array}{r} 6 \\ - 4 \\ \hline \end{array} \quad \mathbf{L}$$

$$\begin{array}{r} 8 \\ - 3 \\ \hline \end{array} \quad \mathbf{J}$$

$$\begin{array}{r} 3 \\ - 3 \\ \hline \end{array} \quad \mathbf{A}$$


$$\begin{array}{r} 5 \\ - 2 \\ \hline \end{array} \quad \mathbf{G}$$

$$\begin{array}{r} 6 \\ - 0 \\ \hline \end{array} \quad \mathbf{C}$$



What animal always lands on its feet?

4 8 7 6 0 4



Subtraction Surprise! #7

★ Subtract the numbers in each box. Write the answer in the blank space. Then, show the answer in tally marks. See example 1.

First Grade

Example 1.

$$6 - 1 = \underline{5}$$



2.

$$4 - 1 = \underline{\quad}$$

3.

$$5 - 4 = \underline{\quad}$$

4.

$$9 - 8 = \underline{\quad}$$

5.

$$4 - 2 = \underline{\quad}$$

6.

$$7 - 4 = \underline{\quad}$$

7.

$$8 - 4 = \underline{\quad}$$


8.

$$6 - 5 = \underline{\quad}$$




Fishing for Answers #17

Circle the fish below that show ways of making 10.




10





SIMPLE SUBTRACTION

Two-Digit Subtraction



Subtract the numbers inside the eggplant and circle the ones that match up to the number on the top.

10

$12-2$

$14-3$

$16-6$

$16-5$

15

$13-2$

$16-1$

$17-5$

$17-2$

12

$13-1$

$18-6$

$13-5$

$16-2$

14

$15-2$

$17-7$

$12-5$

$19-5$

11

$14-3$

$12-4$

$19-7$

$11-3$

13

$12-2$


$16-3$

$14-7$



$15-5$

Fishing for Answers #21

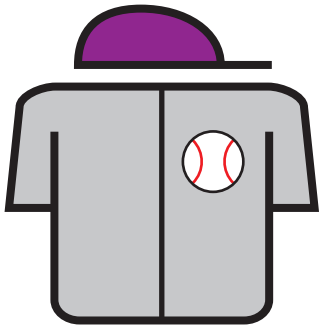
Circle the fish below that show ways of making 14.




14



BASEBALL SUBTRACTION #4



Batter up! Step up to the plate and swing for the fences. Solve the following subtraction problems and you'll be an All-Star!



$12 - 7 = \underline{\quad}$

$11 - 2 = \underline{\quad}$

$20 - 13 = \underline{\quad}$

$7 - 4 = \underline{\quad}$

$14 - 4 = \underline{\quad}$

$24 - 9 = \underline{\quad}$

$16 - 5 = \underline{\quad}$

$8 - 6 = \underline{\quad}$

$18 - 3 = \underline{\quad}$

$5 - 2 = \underline{\quad}$

$15 - 8 = \underline{\quad}$

$9 - 3 = \underline{\quad}$



Odd or Even?: Practice Subtraction

Tell whether the numbers are odd or even. Then find the answer. Is the difference odd or even?

$6 - 1 =$ Even - Odd $=$ 5 . 5 is an odd number.

$7 - 4 =$ _____ $=$ _____. _____ is an _____ number.

$8 - 2 =$ _____ $=$ _____. _____ is an _____ number.



$9 - 7 =$ _____ $=$ _____. _____ is an _____ number.

$4 - 3 =$ _____ $=$ _____. _____ is an _____ number.

$5 - 1 =$ _____ $=$ _____. _____ is an _____ number.

$3 - 2 =$ _____ $=$ _____. _____ is an _____ number.



$10 - 4 =$ _____ $=$ _____. _____ is an _____ number.

$18 - 8 =$ _____ $=$ _____. _____ is an _____ number.

$12 - 3 =$ _____ $=$ _____. _____ is an _____ number.

$20 - 13 =$ _____ $=$ _____. _____ is an _____ number.

$25 - 7 =$ _____ $=$ _____. _____ is an _____ number.




Do you notice a pattern? What happens when you subtract an even number from an odd number? Is the answer always odd?




BASKETBALL SUBTRACTION #1

Ready to take the court and run a fast break to learning? Solve the following subtraction problems and you'll be an All-Star!


★ ☆ ★
 $20 - 10 = \underline{\quad}$




★ ☆ ★
 $15 - 2 = \underline{\quad}$



★ ☆ ★
 $8 - 3 = \underline{\quad}$




★ ☆ ★
 $18 - 7 = \underline{\quad}$




★ ☆ ★
 $9 - 4 = \underline{\quad}$




★ ☆ ★
 $13 - 5 = \underline{\quad}$




★ ☆ ★
 $21 - 14 = \underline{\quad}$



★ ☆ ★
 $16 - 4 = \underline{\quad}$



★ ☆ ★
 $12 - 8 = \underline{\quad}$




★ ☆ ★
 $5 - 3 = \underline{\quad}$



★ ☆ ★
 $11 - 6 = \underline{\quad}$



★ ☆ ★
 $7 - 3 = \underline{\quad}$





BALLOON BUSTER #15



Draw an **X** to pop all the balloons that equal **15**.

$21 - 6$

$8 + 5$

$25 - 7$

$10 + 4$

$19 - 4$

$2 + 12$

$15 - 0$

$3 + 8$

$20 - 5$

$7 + 8$

$18 - 3$

$6 + 6$

$22 - 6$

$4 + 11$

$24 - 9$

$7 + 7$

$23 - 8$

$5 + 10$

$20 - 4$

$2 + 14$

$18 - 8$

$14 + 1$

$17 - 4$

$9 + 6$

$25 - 6$




SIMPLE SUBTRACTION

Two-Digit Subtraction

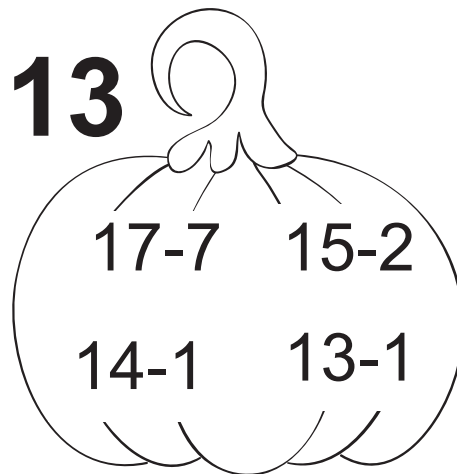


Subtract the numbers inside the pumpkin and circle the ones that match up to the number on the top.

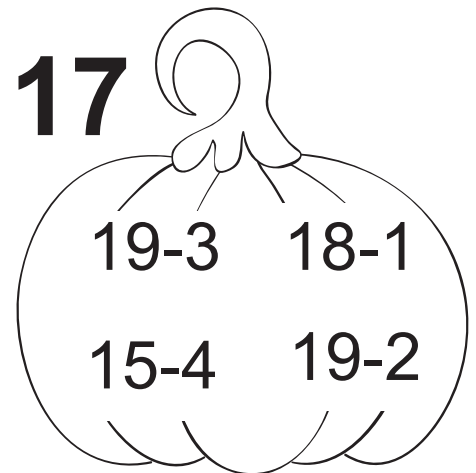
14



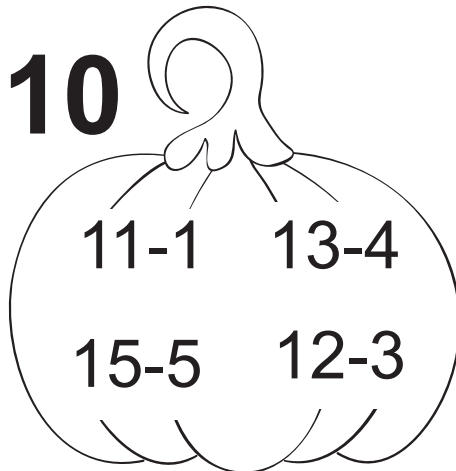
13



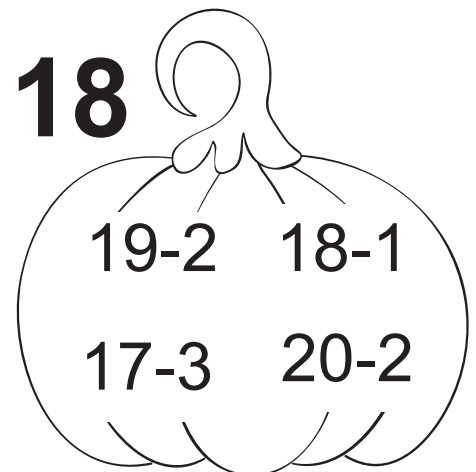
17



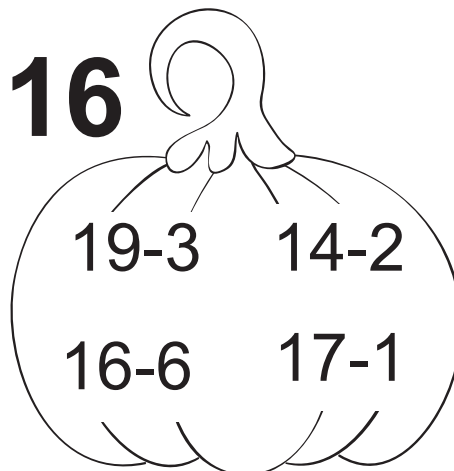
10



18



16



Problem Solving

Read each story problem and solve.

There are 3 fish in a group.
2 more fish joined them.
How many are all together now?

_____ fish

2 jellyfish are pink.
1 is purple.
How many jellyfish in all?


_____ jellyfish

There are 4 starfish.
2 hid behind the seaweed.
How many are left?

_____ starfish

There were 8 shells.
A diver took 5 of them.
How many shells are left?

_____ shells



Math-Go-Round

Subtraction | Difficulty: ★★☆☆

Find a friend and practice your subtraction skills. Find two coins or game pieces and place them on the square labeled **START**. Choose one of the problems to solve and move your game piece clockwise around the board to that problem's answer.


Keep track of the number of corners you go around on each move. For each one, give yourself a point. The player with the most points at the end is the winner.

Keep score with the table below.

	Player 1	Player 2
Round 1		
Round 2		
Round 3		
Round 4		
Round 5		
Round 6		
Round 7		
Round 8		

Total _____

START +1 Point	146	488	389	174	+1 Point
357	$\begin{array}{r} 145 \\ - 76 \\ \hline \end{array}$	$\begin{array}{r} 425 \\ - 68 \\ \hline \end{array}$	$\begin{array}{r} 272 \\ - 98 \\ \hline \end{array}$	$\begin{array}{r} 349 \\ - 83 \\ \hline \end{array}$	357
446	$\begin{array}{r} 514 \\ - 68 \\ \hline \end{array}$	$\begin{array}{r} 260 \\ - 72 \\ \hline \end{array}$	$\begin{array}{r} 341 \\ - 69 \\ \hline \end{array}$	$\begin{array}{r} 506 \\ - 18 \\ \hline \end{array}$	188
272	$\begin{array}{r} 352 \\ - 95 \\ \hline \end{array}$	$\begin{array}{r} 431 \\ - 76 \\ \hline \end{array}$	$\begin{array}{r} 132 \\ - 68 \\ \hline \end{array}$	$\begin{array}{r} 233 \\ - 87 \\ \hline \end{array}$	64
257	$\begin{array}{r} 486 \\ - 97 \\ \hline \end{array}$	$\begin{array}{r} 242 \\ - 93 \\ \hline \end{array}$	$\begin{array}{r} 312 \\ - 44 \\ \hline \end{array}$	$\begin{array}{r} 180 \\ - 91 \\ \hline \end{array}$	149
+1 Point	268	355	89	69	+1 Point



Great job!

is an Education.com math superstar

