





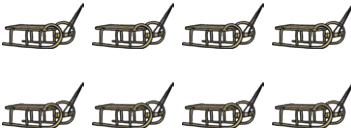




















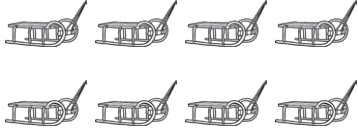






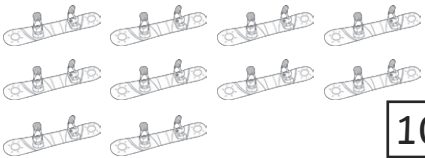







# Greater Than or Less Than

Count the winter-themed objects in each box. Then, draw the correct symbol in the middle box to show which is greater. The first one has been done for you.



 <div data-bbox="485 618 549 674">3</div>		 <div data-bbox="1050 618 1114 674">5</div>
 <div data-bbox="485 801 549 857"></div>		 <div data-bbox="1050 808 1114 864"></div>
 <div data-bbox="485 999 549 1055"></div>		 <div data-bbox="1050 999 1114 1055"></div>
 <div data-bbox="485 1189 549 1245"></div>		 <div data-bbox="1050 1189 1114 1245"></div>
 <div data-bbox="485 1373 549 1429"></div>		 <div data-bbox="1050 1373 1114 1429"></div>
 <div data-bbox="485 1563 549 1619"></div>		 <div data-bbox="1050 1563 1114 1619"></div>
 <div data-bbox="485 1760 549 1816"></div>		 <div data-bbox="1050 1760 1114 1816"></div>
 <div data-bbox="485 1944 549 2000"></div>		 <div data-bbox="1050 1944 1114 2000"></div>

# Greater Than or Less Than **Answers**

 <div>3</div>		 <div>5</div>
 <div>7</div>		<div>1</div> 
 <div>2</div>		<div>8</div> 
 <div>5</div>		<div>4</div> 
 <div>9</div>		<div>7</div> 
 <div>10</div>		<div>8</div> 
 <div>6</div>		<div>9</div> 
 <div>8</div>		<div>3</div> 