

**P13-17**
**Resonance®**  
 Educating for better tomorrow

**Code**  
**0**

# ADVANCED PATTERN PART TEST-4(APT-4)

**TARGET : JEE (MAIN+ADVANCED) 2018**
**SUBJECT : PHYSICS**
**COURSE : VIJAY (07JR)**
**Date : 11-02-2018**
**Time: 2 Hours**
**Maximum Marks : 160**

Please read the instructions carefully. You are allotted 5 minutes specifically for this purpose.

**GENERAL :**

- The sealed booklet is your Question Paper. Do not break the seal till you are instructed to do so.
- The question paper CODE is printed on the right hand top corner of this sheet.
- Use the Optical Response Sheet (ORS) provided separately for answering the question.
- Blank spaces are provided within this booklet for rough work.
- Write your Name and Roll Number in the space provided on the below cover.
- After the open booklet, verify that the booklet contains all the **40** questions along with the options are legible.

**QUESTION PAPER FORMAT AND MARKING SCHEME :**


- This questions paper consists of **Two sections**.
- Each section as detailed in the following table :

Section	Question Type	Number of Questions	Category-wise Marks for Each Question				Maximum Marks of the Section
			Full Marks	Partial Marks	Zero Marks	Negative Marks	
1	One or More Correct Option(s)	20	+4 If only the bubble(s) corresponding to all the correct option(s) is(are) darkened	+1 For darkening a bubble corresponding to each correct option, provided NO incorrect option is darkened	0 If none of the bubbles is darkened	-2 In all other cases	80
2	Comprehension (One or More Correct Option(s))	20	+4 If only the bubble(s) corresponding to all the correct option(s) is(are) darkened	—	0 If none of the bubbles is darkened	-2 In all other cases	80

**OPTICAL RESPONSE SHEET :**

- Darken the appropriate bubbles on the original by applying sufficient pressure.
- The original is machine-gradable and will be collected by the invigilator at the end of the examination.
- Do not tamper with or mutilate the ORS.
- Write your name, roll number and the name of the examination centre and sign with pen in the space provided for this purpose on the original. **Do not write any of these details anywhere else.** Darken the appropriate bubble under each digit of your roll number.

**DARKENING THE BUBBLES ON THE ORS :**

- Use a **BLACK BALL POINT** to darken the bubbles in the upper sheet.
- Darken the bubble **COMPLETELY**.
- Darken the bubble **ONLY** if you are sure of the answer.
- The correct way of darkening a bubble is as shown here : 
- There is **NO** way to erase or "un-darkened bubble".
- The marking scheme given at the beginning of each section gives details of how darkened and **not darkened** bubbles are evaluated.

NAME OF THE CANDIDATE : .....

ROLL NO. : .....

 I have read all the instructions  
and shall abide by them

 I have verified the identity, name and roll number  
of the candidate.

Signature of the Candidate

Signature of the Invigilator

## Resonance Eduventures Ltd.

**CORPORATE OFFICE :** CG Tower, A-46 & 52, IPIA, Near City Mall, Jhalawar Road, Kota (Raj.) - 324005

**Ph.No. :** +91-744-3012222, 6635555 | **Toll Free :** 1800 258 5555

**Reg. Office :** J-2, Jawahar Nagar, Main Road, Kota (Raj.) 324005 | **Ph. No.:** +91-744-3192222 | **FAX No. :** +91-022-39167222

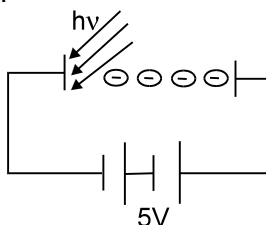
**Website :** www.resonance.ac.in | **E-mail :** contact@resonance.ac.in | **CIN:** U80302RJ2007PLC024029

DO NOT BREAK THE SEAL WITHOUT BEING INSTRUCTED TO DO SO BY THE INVIGILATOR

**SECTION – 1: (Maximum Marks : 80)**

- This section contains **TWENTY** questions  
 Each question has **FOUR** options (A), (B), (C) and (D). **ONE OR MORE THAN ONE** of these four option(s) is(are) correct  
 For each question, darken the bubble(s) corresponding to all the correct option(s) in the ORS  
 For each question, marks will be awarded in one of the following categories :  
 Full Marks : +4 If only the bubble(s) corresponding to all the correct option(s) is(are) darkened.  
 Partial Marks : +1 For darkening a bubble corresponding to **each correct option**, provided NO incorrect option is darkened.  
 Zero Marks : 0 If none of the bubbles is darkened.  
 Negative Marks : -2 In all other cases.  
 For example, if (A), (C) and (D) are all the correct options for a question, darkening all these three will result in +4 marks ; darkening only (A) and (D) will result in +2 marks and darkening (A) and (B) will result in -2 marks, as a wrong option is also darkened.

1. Photons of energy 5 eV are incident on cathode. Electrons reaching the anode have kinetic energies varying from 5eV to 8eV.



- (A) Work function of the metal is 2 eV  
 (B) Work function of the metal is 3 eV  
 (C) Current in the circuit is equal to saturation value.  
 (D) Current in the circuit is less than saturation value.

**Space for Rough Work**

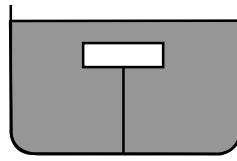


2. An electron makes a transition from  $n = 2$  to  $n = 1$  state in a hydrogen like atom.
- (A) magnetic field at the site of nucleus decreases by 16 times.
- (B) magnetic field at the site of nucleus increases by 32 times
- (C) angular momentum of electron will change
- (D) none of these
3. X-ray from a tube with a target A of atomic number  $Z$  shows strong  $K_\alpha$  lines for target A and two weak  $K_\alpha$  lines for impurities. The wavelength of  $K_\alpha$  lines is  $\lambda_0$  for target A and  $\lambda_1$  and  $\lambda_2$  for two impurities respectively.  $\frac{\lambda_0}{\lambda_1} = 4$  and  $\frac{\lambda_0}{\lambda_2} = \frac{1}{4}$ . The screening constant of  $K_\alpha$  lines is unity. Select the correct alternative(s) :
- (A) The atomic number of first impurity is  $2Z - 1$
- (B) The atomic number of first impurity is  $2Z + 1$
- (C) The atomic number of second impurity is  $\frac{Z+1}{2}$
- (D) The atomic number of second impurity is  $\frac{Z}{2} + 1$

---

Space for Rough Work

4. A string is holding a solid block below the surface of the liquid as shown in figure. If the system is given an upward acceleration  $a$ , then as compared to previous state.



- (A) Tension in string will be  $\left(1 + \frac{a}{g}\right)$  times
- (B) Tension in string will be  $\left(1 - \frac{a}{g}\right)$  times
- (C) Upthrust force on block become  $\left(1 + \frac{a}{g}\right)$  times
- (D) Upthrust force on block becomes  $\left(1 - \frac{a}{g}\right)$  times

---

Space for Rough Work

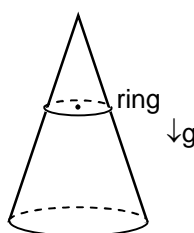


5. Two radioactive materials A & B have decay constant  $3\lambda$  and  $2\lambda$  respectively. At  $t = 0$ , the numbers of nuclei of A and B are  $4N_0$  and  $2N_0$  respectively, then
- (A) Their number of radioactive nuclei will be equal at  $t = \frac{\ln 2}{\lambda}$
- (B) Their decay rate will be equal at  $t = \frac{\ln 4}{\lambda}$
- (C) Their decay rate will be equal at  $t = \frac{\ln 3}{\lambda}$
- (D) At  $t = \frac{\ln 4}{\lambda}$  the decay rate of A will be greater than that of B.
6. A container of large uniform cross sectional area A resting on a horizontal surface holds two immiscible non-viscous and incompressible liquids of density  $d$  and  $3d$  each of height  $H/2$ . The lower density liquid is open to the atmosphere having pressure  $P_0$ . A tiny hole of area  $a$  ( $a \ll A$ ) is punched on the vertical side of the container at a height of  $h$  ( $0 < h < H/2$ ) from the bottom of container for which range is maximum.
- (A)  $h = H/3$  (B) Range  $R = \frac{2H}{3}$
- (C) Range  $R = \frac{3H}{2}$  (D) Velocity of efflux  $v = \sqrt{\frac{2}{3}gH}$
7. In a radioactive decay reaction :
- $$A \xrightarrow{2\lambda} B \xrightarrow{9\lambda} C$$
- Select correct alternative/s at the instant the number of the particles of B is maximum :
- (A) Activity of A is equal to activity of B
- (B) No of atoms of A is 4.5 times of B
- (C) Activity of A is more than activity of B
- (D) Activity of A is minimum

---

**Space for Rough Work**

8. A fusion reaction consists of combining four protons into an  $\alpha$ -particle. The mass of He atom is 4.002603u and that of proton is 1.007825u  
 (A) the equation  $4p_1^1 \rightarrow \text{He}_2^4$  does not satisfy conservation of charge  
 (B) the correct reaction equation may be  $4p_1^1 \rightarrow \text{He}_2^4 + 2\beta^+ + 2\nu$  where  $\beta^+$  is positron and  $\nu$  is the neutrino (negligible rest mass and uncharged)  
 (C) loss of mass of the reaction is 0.028697 u  
 (D) the energy equivalent of the mass defect is 26.7 MeV
9. In an  $\alpha$  decay the parent nucleus  $X^{200}$  decays into daughter nucleus Y.  
 (A) The mass number of Y is less than that of X by 4.  
 (B) The atomic number of Y is less than that of X by 2.  
 (C) If the Q value of the reaction is 200 MeV, and the daughter nucleus is in ground state, the Kinetic energy of the  $\alpha$  particle is approximately 196 MeV.  
 (D) The Q value of the reaction decreases if the daughter nucleus is formed in excited state.
10. An elastic ring of mass 'm' and force constant k (stiffness) is released from rest in a smooth cone of semi vertex angle  $\theta$  from horizontal position as shown in figure. Initially the ring was in natural length :

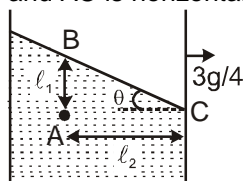


- (A) initial acceleration of any point on circumference of ring is g  
 (B) initial acceleration of centre of ring is  $g \cos^2 \theta$   
 (C) maximum vertical displacement of centre of ring is  $\frac{mg \cot^2 \theta}{2\pi^2 k}$   
 (D) at the moment maximum vertical displacement acceleration of centre of ring is zero.

---

**Space for Rough Work**

11. In Young double slit experiment  $\lambda = 1000 \text{ nm}$ ,  $d = 1 \text{ mm}$  and  $D = 1 \text{ m}$ . If both the slits are having equal intensities. The distance(s) from central maxima at which intensity is half of maximum intensity is :  
 (A)  $12.5 \times 10^{-4} \text{ m}$  (B)  $2.5 \times 10^{-4} \text{ m}$  (C)  $7.5 \times 10^{-4} \text{ m}$  (D)  $1.25 \times 10^{-4} \text{ m}$
12. Two slits emit equal to intensity of light. Now one of the slit in a standard YDSE apparatus is covered by a thin glass slab so that it transmits only one half of the light intensity of the other. Select correct alternatives :  
 (A) Resultant intensity at centre of screen will decrease  
 (B) Resultant intensity at dark fringe will increase  
 (C) The fringe width will remain unchanged  
 (D) The fringe pattern will shift toward the covered slit.
13. A container is filled with a liquid of density  $\rho$ . Container is accelerating on a horizontal surface with acceleration  $\frac{3g}{4}$  towards right hand side and liquid is at rest with respect to container as shown in figure. If there is a point A in liquid then, which of the following is **correct** : (assume atmospheric pressure is zero and AB is vertical and AC is horizontal line)

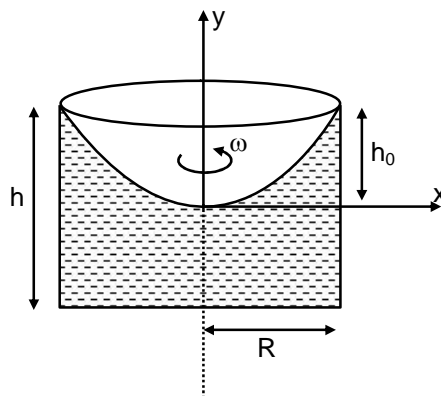


- (A) Pressure at A is  $\rho g l_1$   
 (B) Pressure at A is  $\rho \frac{3g}{4} l_2$   
 (C)  $\theta = \tan^{-1} \left( \frac{3}{4} \right)$   
 (D)  $\rho g l_1 = \rho g l_2$

---

Space for Rough Work

14. Ideal liquid of density  $\rho$  is filled in a cylindrical container upto  $(3/4)^{\text{th}}$  height. Now the liquid is being rotated about vertical axis passing through its axis of symmetry with constant angular velocity  $\omega$ , such that liquid is on the verge of falling out of the container and free surface of liquid forms a paraboloid. Whole situation is shown in the figure. Choose the correct option(s).



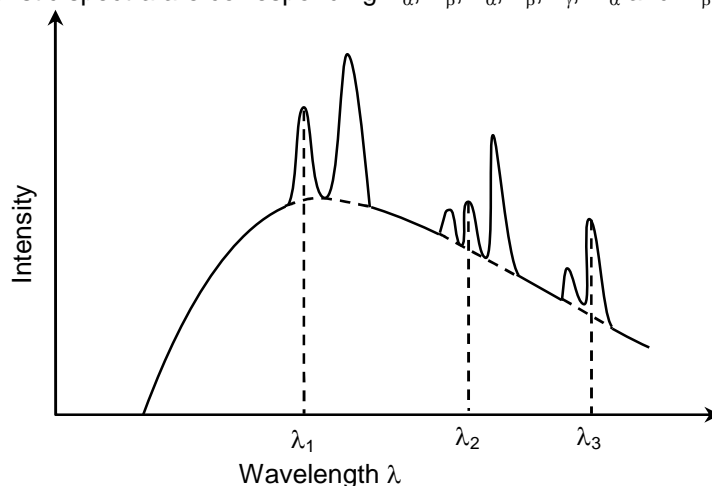
- (A)  $h_0 = \frac{h}{4}$       (B)  $\omega = \sqrt{\frac{gh}{R^2}}$       (C)  $\frac{dp}{dx} = \rho\omega^2 x$       (D)  $\frac{dp}{dy} = -\rho g$

15. Wavelength and intensity of monochromatic light falling on a photoelectric cell as a function of time is given by  $\lambda = 10000 e^{-t/10} \text{ \AA}$  and  $I = 1000 (1 - e^{-t/10})$ . The threshold wave length of metal used in cell is  $3700 \text{ \AA}$ .
- (A) Work function of metal plate is equal to  $3.35 \text{ eV}$ .  
 (B) At  $t = 0 \text{ sec}$  photo current is zero.  
 (C) At  $t = 5 \text{ sec}$  photo current is zero.  
 (D) At  $t = 20 \text{ sec}$  photo current is zero.

Space for Rough Work



16. Figure shows X-ray spectrum showing continuous and few characteristic spectra from an X-ray tube. Characteristic spectra are corresponding  $K_\alpha$ ,  $K_\beta$ ,  $L_\alpha$ ,  $L_\beta$ ,  $L_\gamma$ ,  $M_\alpha$  and  $M_\beta$ . The wave length-



- (A)  $\lambda_1$  corresponds to  $K_\alpha$  (B)  $\lambda_2$  corresponds to  $L_\beta$   
 (C)  $\lambda_3$  corresponds to  $M_\alpha$  (D)  $\lambda_3$  corresponds to  $K_\beta$
17. The wavelength of  $K_\alpha$  X-rays for lead isotopes  $Pb^{208}$ ,  $Pb^{206}$  and  $Pb^{204}$  are  $\lambda_1$ ,  $\lambda_2$  and  $\lambda_3$  respectively. Then according to Mosley's law :
- (A)  $\lambda_1 = \lambda_2 = \lambda_3$  (B)  $\lambda_1 > \lambda_2 > \lambda_3$  (C)  $\lambda_1 < \lambda_2 < \lambda_3$  (D)  $\lambda_2 = \sqrt{\lambda_1 \lambda_3}$
18. Consider an atom made up of a protons and a hypothetical particle of triple the mass of electron but having same charge as electron. Apply Bohr model and consider all possible transition of this hypothetical from second excited state to lower states. The possible wavelengths emitted is (are) (Given in term of the Rydberg constant R for the hydrogen atom)
- (A)  $\frac{8}{5R}$  (B)  $\frac{3}{8R}$  (C)  $\frac{4}{9R}$  (D)  $\frac{12}{5R}$

Space for Rough Work

19. The electron in hydrogen atom makes a transition  $n_1 \rightarrow n_2$  where  $n_1$  and  $n_2$  are the principal quantum number of two states. Assuming the Bohr model to be valid, the time period of the electron in the initial state is eight times that in the final state. The possible value of  $n_1$  and  $n_2$  are:
- (A)  $n_1 = 2$  And  $n_2 = 1$   
(B)  $n_1 = 8$  and  $n_2 = 2$   
(C)  $n_1 = 8$  And  $n_2 = 1$   
(D)  $n_1 = 6$  and  $n_2 = 3$
20. In young's double slit experiment, the interference pattern is found to have an intensity ratio between bright and dark fringes as 9. This means that
- (A) the intensities at the screen due to the two slits are in the ratio 4 : 1  
(B) the intensities at the screen due to the two slits are in the ratio 5 : 4  
(C) the amplitudes at the screen due to the two slits are in the ratio 2 : 1  
(D) the amplitudes at the screen due to the slits are in the ratio  $\sqrt{5} : 2$

---

Space for Rough Work

**SECTION – 2 : (Maximum Marks : 80)**

- ñ This section contains **TEN** paragraphs  
 ñ Based on each paragraph, there will be **TWO** questions.  
 ñ Each question has **FOUR** options (A), (B), (C) and (D). **ONE OR MORE THAN ONE** of these four option(s) is(are) correct.  
 ñ For each question, darken the bubble(s) corresponding to all the correct option(s) in the ORS  
 ñ Marking scheme :  
 +4 If the bubbles corresponding to the answers are darkened  
 0 If none of the bubbles is darkened  
 -2 In all other cases

---



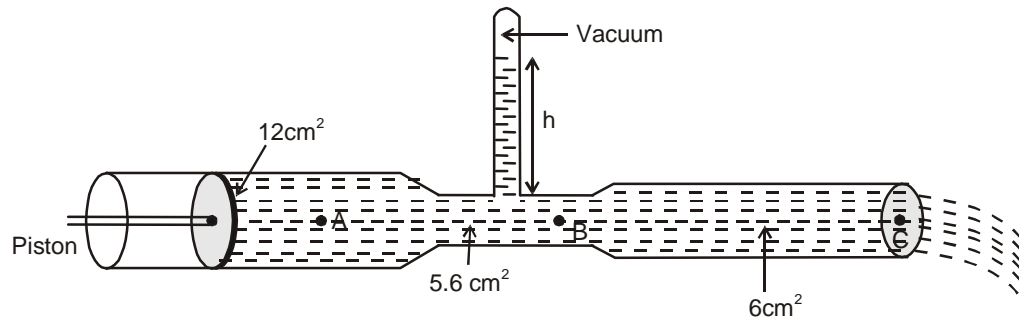
---

**Space for Rough Work**



## Paragraph for Question Nos. 21 to 22

A glass tube has three different cross sectional areas with the values indicated in the figure. A piston at the left end of the tube exerts pressure so that the mercury within the tube flows from the right end with a speed of 8.0 m/s. Three points within the tube are labeled A, B and C. The atmospheric pressure is  $1.01 \times 10^5 \text{ N/m}^2$ ; and the density of mercury is  $1.36 \times 10^4 \text{ kg/m}^3$ . (use  $g = 10 \text{ m/s}^2$ )



21. Choose the correct option(s) :
- (A) The speed of mercury flowing at the point A is 4.0 m/s.
  - (B) The speed of mercury flowing at the point A is 8.0 m/s.
  - (C) The speed of mercury flowing at the point B is 4.0 m/s.
  - (D) The speed of mercury flowing at the point B is 12.0 m/s.
22. Choose the correct option(s) :
- (A) The pressure at point A is nearly equal to  $4.27 \times 10^5 \text{ Pa}$ .
  - (B) The pressure at point A is nearly equal to  $1.01 \times 10^5 \text{ Pa}$ .
  - (C) The pressure at point C is nearly equal to  $1.01 \times 10^5 \text{ Pa}$ .
  - (D) The pressure at point C is nearly equal to  $4.27 \times 10^5 \text{ Pa}$ .

---

**Space for Rough Work**



## Paragraph for Question Nos. 23 to 24

The mass of a nucleus  ${}^A_ZX$  is less than the sum of the masses of  $(A - Z)$  number of neutrons and  $Z$  number of protons in the nucleus. The energy equivalent to the corresponding mass difference is known as the binding energy of the nucleus. A heavy nucleus of mass  $M$  can break into two light nuclei of masses  $m_1$  and  $m_2$  only if  $(m_1 + m_2) < M$ . Also two light nuclei of masses  $m_3$  and  $m_4$  can undergo complete fusion and form a heavy nucleus of mass  $M'$  only if  $(m_3 + m_4) > M'$ . The masses of some neutral atoms are given in the table below :

${}^1_1\text{H}$	1.007825u	${}^2_1\text{H}$	2.014102u	${}^3_1\text{H}$	3.016050u	${}^4_2\text{He}$	4.002603u
${}^6_3\text{Li}$	6.015123u	${}^7_3\text{Li}$	7.016004u	${}^{70}_{30}\text{Zn}$	69.925325u	${}^{82}_{34}\text{Se}$	81.916709u
${}^{152}_{64}\text{Gd}$	151.919803u	${}^{206}_{82}\text{Pb}$	205.974455u	${}^{209}_{83}\text{Bi}$	208.980388u	${}^{210}_{84}\text{Po}$	209.982876u

23. The incorrect statement is/are :

- (A) The nucleus  ${}^6_3\text{Li}$  can emit an alpha particle  
 (B) The nucleus  ${}^{210}_{84}\text{Po}$  can not emit a proton  
 (C) Deuteron and alpha particle can undergo complete fusion.  
 (D) The nuclei  ${}^{70}_{30}\text{Zn}$  and  ${}^{82}_{34}\text{Se}$  can undergo complete fusion.

24. The kinetic energy (in keV) of the alpha particle, when the nucleus  ${}^{210}_{84}\text{Po}$  at rest undergoes alpha decay, is:

- (A) 5319                      (B) 5422                      (C) 5707                      (D) 5818

---

Space for Rough Work



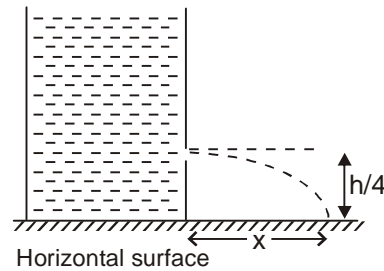
**Resonance**<sup>®</sup>  
Educating for better tomorrow

Corporate Office : CG Tower, A-46 & 52, IPIA, Near City Mall, Jhalawar Road, Kota (Raj.)- 324005  
 Website : www.resonance.ac.in | E-mail : contact@resonance.ac.in  
 Toll Free : 1800 258 5555 | CIN: U80302RJ2007PLC024029

01JRAPT5110218C0-12

## Paragraph for Question Nos. 25 to 26

Water is filled to a height  $h$  in a fixed vertical cylinder placed on horizontal surface. At time  $t = 0$  a small hole is drilled at a height  $h/4$  from bottom of cylinder as shown. The cross section area of hole is  $a$  and the cross-section area of cylinder is  $A$  such that  $A \gg a$ .



25. Let the value of horizontal distance of point where the water fall on horizontal surface from bottom of cylinder be  $x$  as shown. Then from time  $t = 0$  till water comes out of hole, pick the correct statement:
- (A)  $x$  increases with time.
  - (B)  $x$  decreases with time.
  - (C) As long as water comes out of hole, the time taken by a water particle starting from hole to reach the horizontal surface remains constant.
  - (D) As long as water comes out of hole, the time taken by a water particle starting from hole to reach the horizontal surface decreases.
26. The duration of time for which water flows out of hole is:
- (A)  $\frac{A}{a} \sqrt{\frac{3h}{2g}}$
  - (B)  $\frac{a}{A} \sqrt{\frac{3h}{2g}}$
  - (C)  $\frac{A}{a} \sqrt{\frac{2h}{3g}}$
  - (D) None of these

---

**Space for Rough Work**



## Paragraph for Question Nos. 27 to 28

A sample contains two radioactive nuclei X and Y with half lives 2 hr and 1 hr respectively. The nucleus X-decays into the nucleus Y and Y decays into a stable nucleus Z. At time  $t = 0$  the activities of the components in the sample were equal and were each equal to  $A_0$



Suppose that  $N_X$ ,  $N_Y$  are the number of nuclei of X and Y, respectively, at time  $t$ . It is given that

$$\lambda_Y N_Y = \lambda_X (N_X + N_Y) + C_1 e^{-\lambda_Y t}$$

where  $\lambda_X$ ,  $\lambda_Y$  are the decay constants of X and Y;  $C_1$  is an arbitrary constant.

27. Select correct alternatives. The Value of  $C_1$  is

(A)  $C_1 = -\frac{A_0}{2}$

(B)  $C_1 = -A_0$

(C) Number of nuclei of Y at time  $t$  is equal to (t is in hour)  $\frac{A_0}{\ln 2} [2^{(2-t)/2} - 2^{-t}]$

(D) Number of nuclei of Y at time  $t$  is equal to (t is in hour)  $\frac{A_0}{\ln 2} [2^t - 2^{-t}]$

28. The ratio of active nuclei of Y at  $t = 4$  h to that at  $t = 0$  is

(A)  $\frac{2}{3}$

(B)  $\frac{3}{4}$

(C)  $\frac{8}{15}$

(D)  $\frac{7}{16}$

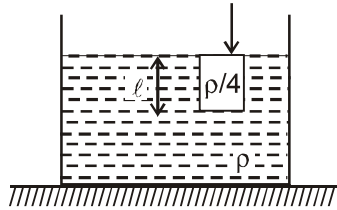
---

Space for Rough Work



## Paragraph for Question Nos. 29 to 30

A large tank of cross-section area  $A$  contains liquid of density  $\rho$ . A cylinder of density  $\rho/4$  and length  $\ell$ , and cross-section area  $a$  ( $a \ll A$ ) is kept in equilibrium by applying an external vertically downward force as shown. The cylinder is just submerged in liquid. At  $t = 0$  the external force is removed instantaneously. Assume that water level in the tank remains constant.



29. The acceleration of cylinder immediately after the external force is removed is  
 (A)  $g$  (B)  $2g$  (C)  $3g$  (D) zero
30. Choose the **CORRECT** option(s) :
- (A) The speed of the cylinder when it reaches its equilibrium position is  $\frac{3}{2}\sqrt{g\ell}$
- (B) The speed of the cylinder when it reaches its equilibrium position is  $\frac{1}{2}\sqrt{g\ell}$
- (C) After its release at  $t = 0$ , the time taken by cylinder to reach its equilibrium position for the first time is  $\frac{\pi}{4}\sqrt{\frac{\ell}{g}}$
- (D) After its release at  $t = 0$ , the time taken by cylinder to reach its equilibrium position for the first time is  $\frac{\pi}{8}\sqrt{\frac{\ell}{g}}$

---

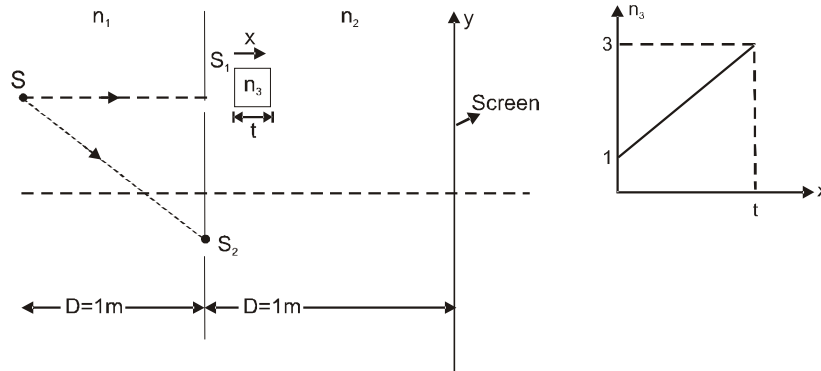
Space for Rough Work





### Paragraph for Question Nos. 31 to 32

In YDSE arrangement as shown in figure, fringes are seen on screen using monochromatic source S having wavelength  $3000 \text{ \AA}$  (in air).  $S_1$  and  $S_2$  are two slits separated by  $d = 1 \text{ mm}$  and  $D = 1 \text{ m}$ . Left of slits  $S_1$  and  $S_2$  medium of refractive index  $n_1 = 2$  is present and to the right of  $S_1$  and  $S_2$  medium of  $n_2 = 3/2$ , is present. A thin slab of thickness ' $t$ ' is placed in front of  $S_1$ . The refractive index of  $n_3$  of the slab varies with distance from it's starting face as shown in figure.



31. Chose the **CORRECT** option(s) :
- (A) Fringe width on the screen is  $0.2 \text{ mm}$ .  
 (B) Fringe width on the screen is  $0.3 \text{ mm}$   
 (C) In order to get central maxima at the centre of screen, the thickness of slab required is  $2 \mu\text{m}$   
 (D) In order to get central maxima at the centre of screen, the thickness of slab required is  $1.5 \mu\text{m}$
32. If thickness of the slab is selected  $1 \mu\text{m}$ , then position of central maxima will be : (y-coordinate)
- (A)  $\frac{1}{3} \text{ mm}$                       (B)  $-\frac{1}{3} \text{ mm}$                       (C)  $\frac{1}{6} \text{ mm}$                       (D)  $-\frac{1}{6} \text{ mm}$

Space for Rough Work



**Resonance**  
Educating for better tomorrow

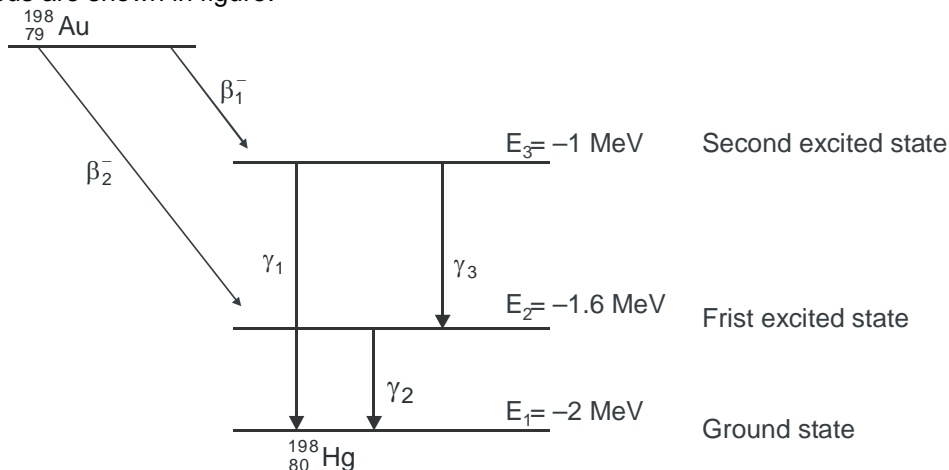
Corporate Office : CG Tower, A-46 & 52, IPIA, Near City Mall, Jhalawar Road, Kota (Raj.)- 324005  
 Website : [www.resonance.ac.in](http://www.resonance.ac.in) | E-mail : [contact@resonance.ac.in](mailto:contact@resonance.ac.in)  
 Toll Free : 1800 258 5555 | CIN: U80302RJ2007PLC024029

01JRAPT5110218C0-16

Paragraph for Question Nos. 33 to 34

Gold Nucleus ( ${}_{79}\text{Au}^{198}$ ) can decay into mercury nucleus ( ${}_{80}\text{Hg}^{198}$ ) by two decay schemes shown in figure. (i) It can emit a  $\beta$  particle ( $\beta_1$ ) and come to ground state by either emitting one  $\gamma$  ray ( $\gamma_1$ ) or emitting two  $\gamma$  rays ( $\gamma_3$  &  $\gamma_2$ )

(ii) It can emit one  $\beta$  particle ( $\beta_2$ ) and come to ground state by emitting  $\gamma_2$  ray. Atomic masses :  ${}^{198}\text{Au} = 197.9682$  amu,  ${}^{198}\text{Hg} = 197.9662$  amu,  $1 \text{ amu} = 930 \text{ MeV}/c^2$ . The energy levels of the nucleus are shown in figure.



33. Choose the **CORRECT** option(s) :
- (A) the maximum kinetic energy of emitted  $\beta_2$  particles is 1.86 MeV  
 (B) the maximum kinetic energy of emitted  $\beta_2$  particles is 1.46 MeV  
 (C) the maximum kinetic energy of emitted  $\beta_1$  particle is 1.86 MeV  
 (D) the maximum kinetic energy of emitted  $\beta_1$  particle is 0.86 MeV
34. The wave length of emitted  $\gamma$  rays are in the order -
- (A)  $\lambda_{\gamma_2} > \lambda_{\gamma_3} > \lambda_{\gamma_1}$       (B)  $\lambda_{\gamma_3} > \lambda_{\gamma_2} > \lambda_{\gamma_1}$       (C)  $\lambda_{\gamma_1} > \lambda_{\gamma_2} > \lambda_{\gamma_3}$       (D)  $\lambda_{\gamma_3} = \lambda_{\gamma_2} = \lambda_{\gamma_1}$

Space for Rough Work



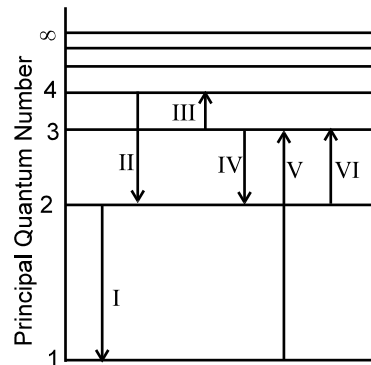
**Resonance**  
Educating for better tomorrow

Corporate Office : CG Tower, A-46 & 52, IPIA, Near City Mall, Jhalawar Road, Kota (Raj.)- 324005  
 Website : [www.resonance.ac.in](http://www.resonance.ac.in) | E-mail : [contact@resonance.ac.in](mailto:contact@resonance.ac.in)  
 Toll Free : 1800 258 5555 | CIN: U80302RJ2007PLC024029

01JRAPT5110218C0-17

### Paragraph for Question Nos. 35 to 36

The figure shows an energy level diagram for the hydrogen atom. Several transitions are marked as I, II, III, \_\_\_\_\_. The diagram is only indicative and not to scale.



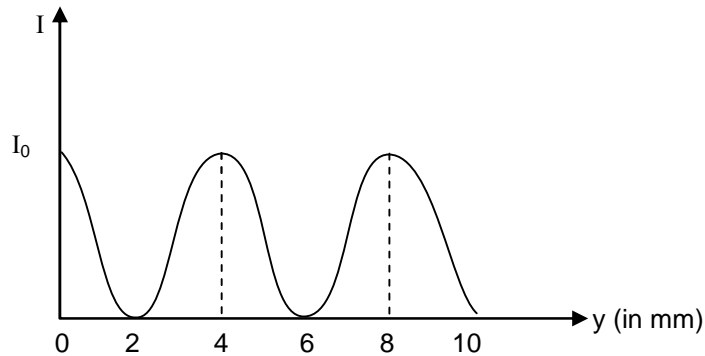
35. Select correct statement(s)
- (A) In VI transition is a Balmer series photon absorbed.
  - (B) In III transition is a Balmer series photon absorbed.
  - (C) The wavelength of the radiation involved in transition II is 291 nm
  - (D) The wavelength of the radiation involved in transition II is 487 nm
36. Which transition involves the longest wavelength line in the visible portion of the hydrogen spectrum ?
- (A) I                      (B) III                      (C) VI                      (D) IV

Space for Rough Work



## Paragraph for Question Nos. 37 to 38

In standard YDSE the intensity on screen varies with position according to following graph as we move away from the central maxima :



Wave length of light used is 400 nm and distance between the two slits is 1 mm.

37. If the distance between two slits is reduce to 0.5 mm then the intensity :
- (A) will become zero at  $y = 4$  mm
  - (B) will remain same  $I_0$  at  $y = 4$  mm
  - (C) will become zero at  $y = 8$  mm
  - (D) will remain same  $I_0$  at  $y = 8$  mm
38. If the distance between the two slits is kept 1 mm and then a thin film of refractive index 1.5 and thickness  $2.2 \mu\text{m}$  is used to cover the one of the slit. What will be intensity at  $y = 2$  mm.
- (A)  $I_0/2$
  - (B)  $I_0$
  - (C)  $I_0/4$
  - (D) zero

---

**Space for Rough Work**

## Paragraph for Question Nos. 39 to 40

A light of wavelength  $\lambda$  is incident on a metal sheet of work function  $\phi = 2\text{eV}$ . The wavelength  $\lambda$  varies with time as  $\lambda = 3000 + 40t$ , where  $\lambda$  is in  $\text{\AA}$  and  $t$  is in second. The power incident on metal sheet is constant at 100 W. This signal is switched on and off for time intervals of 2 minutes and 1 minute respectively. Each time the signal is switched on, the  $\lambda$  start from initial value of  $3000\text{\AA}$ . The metal plate is grounded and electron clouding is negligible. The efficiency of photoemission is 1% ( $hc = 12400\text{ eV\AA}$ ).

39. The time after which photoemission will stop is :  
 (A) 79 s (B) 80 s (C) 81 s (D) 78 s
40. Choose the **CORRECT** option(s) :  
 (A) total number of photoelectrons ejected in three minutes is  $1.855 \times 10^{20}$   
 (B) total number of photoelectrons ejected in three minutes is  $3.71 \times 10^{23}$ .  
 (C) total number of photoelectrons ejected in one hour is  $1.855 \times 10^{20}$   
 (D) total number of photoelectrons ejected in one hour is  $3.71 \times 10^{21}$ .

---

Space for Rough Work